



MBUYA PARENTS' SCHOOL

PRIMARY ONE HOLIDAY WORK FOR TERM 1 2020 - WEEK 10

MATHEMATICS

NAME: _____ **STREAM** _____

1. Fill in the missing numbers.

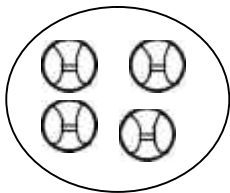
10, 11, _____, 14, _____, 16, _____,

2. Write in words.

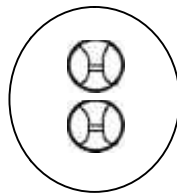
5 10.....

1st 2nd

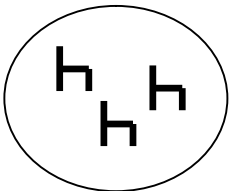

3. Join the sets below.



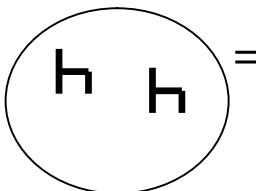
and



makes




+



=



4. Draw an empty set.



5. Draw the following sets.

A set of 7 boxes



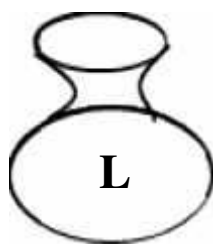

A set of 4 sticks



6. Match correctly.



7.



i) Which pot holds more water?

ii) Which pot holds less water?

8. Add and match correctly.

A

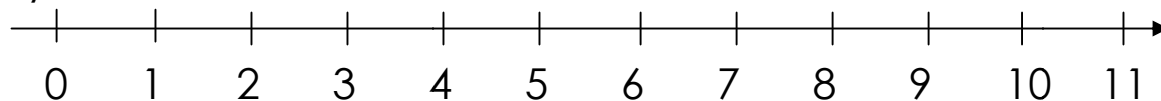
4+2
3+1
5+3
6+4

B

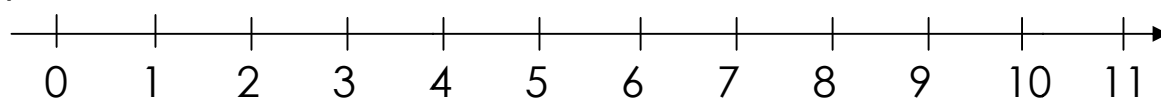
8
10
6
4

10. Add using a number line.

(a) $4 + 2$



(b) $3 + 2$





MBUYA PARENTS' SCHOOL

PRIMARY ONE HOLIDAY WORK FOR TERM 1 2020 - WEEK 10

LITERACY B

NAME:_____ **STREAM** _____

1. A _____ is a place where people go to learn.

2. List down three people found at school.

i) ii)

iii)

3. Draw and name two things found in the classroom

4. Write down the work place of the following people found at school

i) head teacher _____

ii) teacher _____

5. Name any three building materials you know

i _____ ii _____

iii _____

6. Write down two sensitive parts of the body that we are not supposed to touch in order to avoid corona virus.

i _____ ii _____

iii _____

7. Name the school symbol that makes us smart.

8. State one activity that makes our home clean.

9. Name two school needs.

i) _____

ii) _____

10. Mention any two school activities known to you.

i) _____

ii) _____



MBUYA PARENTS' SCHOOL

PRIMARY ONE HOLIDAY WORK FOR TERM 1 2020 - WEEK 10

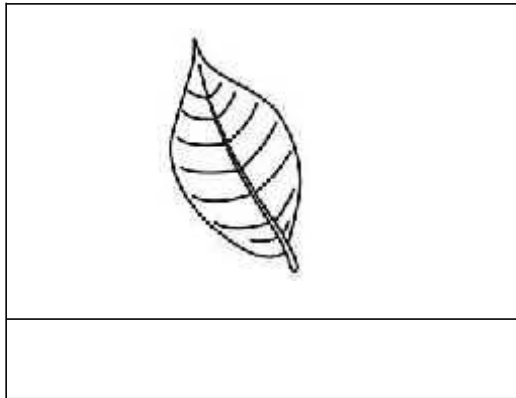
LITERACY A

NAME: _____ **STREAM** _____

1. Where should we put rubbish after collecting?

2. Write any one thing that can make your body dirty.

3. Name this part of a plant.



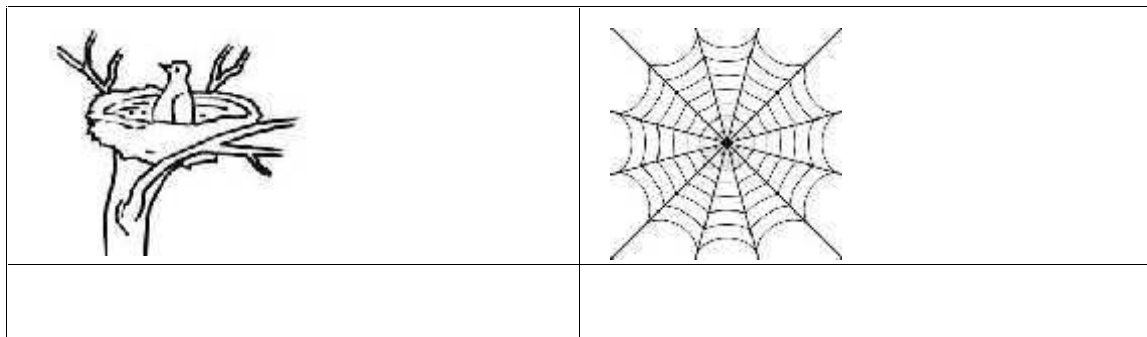
4. Who treats sick children at school?

5. How do you keep your teeth clean?


6. Write any two things used in cooking food.

(a) _____ (b) _____

7. Name these animal homes.



8. The diagram shows parts of the body. Name the parts.



9. Name the young ones of the following animals.

(a) people _____

(b) hen _____

10. **Match these correctly.**

A

eyes

tongue

legs

nose

A

eyes

tongue

nose

legs

B

walking

smelling

seeing

tasting

B



MBUYA PARENTS' SCHOOL

PRIMARY ONE HOLIDAY WORK FOR TERM 1 2020 - WEEK 10

ENGLISH

NAME: _____ STREAM _____

1. What is this?

(a)



(b)



Is this a book?

2. Give the plurals of the words in brackets.

(a) I have two _____ in my bag. (bottle)

(b) Mary and Ben have nice _____. (watch)

(c) Some _____ have no shoes. (child)

3. Fill in the correct word.

(a)



Emma is _____ a book.

(b)



She is _____ a rope.

4. Make four sentences from the table.

The girls	is	sweeping the house.
The boys		dancing.
The cat		playing.
She	are	taking milk.
David and Becky		Playing football.

- (a) _____
- (b) _____
- (c) _____
- (d) _____

5. Use the words in brackets to complete the sentences.

(under , over , in , near , on)

- (i)  The bird is flying _____ the tree.

- (ii)  The fish is _____ the dish.

- (iii)  The cat is _____ the ball.

- (iv)  The snake is _____ the bed.

END