



# MBUYA PARENTS' SCHOOL

## PRIMARY ONE HOLIDAY WORK FOR TERM 1 2020 - WEEK 4

### MATHEMATICS

Name: \_\_\_\_\_ Stream: \_\_\_\_\_

#### 1. Fill in the missing number.

10, 20, \_\_\_\_\_, 40, 50, 60.


#### 2. Match words to numbers.

ten	0
two	2
zero	5
one	10
five	1

#### 3. Count and write in words.



= \_\_\_\_\_



= \_\_\_\_\_

4. **Read and draw:**

six boys =



two eggs =




four balls =

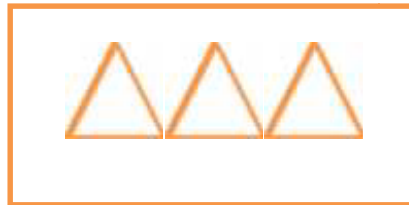


5. **Complete these sets using “less” or “ more”.**

**X**



**Y**



a) Set X has \_\_\_\_\_ members than set Y.

b) Set Y has \_\_\_\_\_ members than set X.

6. **Circle the bigger number.**

1    or    3

5    or    8

10   or   4

20   or   12



# MBUYA PARENTS' SCHOOL

## PRIMARY ONE HOLIDAY WORK FOR TERM 1 2020 - WEEK 4

### ENGLISH

Name : \_\_\_\_\_ Stream : \_\_\_\_\_

### 1. Count and write the syllables.

bab-y = ( 2 )

watch – man = (     )

fam – i – ly = (     )

head – teach-er = (     )

dri- ver = (     )

boy = (     )

### 2. Name these pictures



\_\_\_\_\_



\_\_\_\_\_



\_\_\_\_\_



\_\_\_\_\_

### 3. Give the plural of these words.

one

boy

church

baby

girl

many

\_\_\_\_\_

\_\_\_\_\_

\_\_\_\_\_

\_\_\_\_\_

4. Rewrite these words correctly.



eeey \_\_\_\_\_



gle \_\_\_\_\_



\_\_\_\_\_



ahdn \_\_\_\_\_

5. Match correctly



brother



father



sister



mother



# MBUYA PARENTS' SCHOOL

## PRIMARY ONE HOLIDAY WORK FOR TERM 1 2020 - WEEK 4

### LITERACY I

Name: \_\_\_\_\_ Stream: \_\_\_\_\_

1. Write your school name.

\_\_\_\_\_

2. Name any two domestic birds.

(i) \_\_\_\_\_ (ii) \_\_\_\_\_

3. Give one reason why you like your school.

\_\_\_\_\_

4. Mention two important places at your school.

(i) \_\_\_\_\_ (ii) \_\_\_\_\_

5. Name these parts found on the head.



\_\_\_\_\_  
\_\_\_\_\_  
\_\_\_\_\_  
\_\_\_\_\_

6. Count the body parts you have.

(i) legs – I have 2 legs.

(ii) toes - \_\_\_\_\_

(iii) fingers - \_\_\_\_\_

(iv) hands - \_\_\_\_\_

(v) nose - \_\_\_\_\_

7. Draw these things we use to clean our body.

towel	comb	soap	handkerchief

8. **Why do people keep domestic animals?**

\_\_\_\_\_

9. **Give one way of caring for domestic birds.**

\_\_\_\_\_

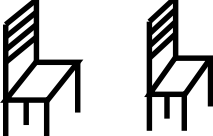


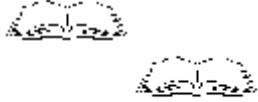
10. **Write two people in an extended family.**

(i) \_\_\_\_\_ (ii) \_\_\_\_\_

11. **How is father useful at home?**

\_\_\_\_\_

12. Name these things found at school.

13. Draw these parts of a house.

door



window



14. What things are found in these rooms?

(i) bed room - \_\_\_\_\_

(ii) kitchen - \_\_\_\_\_

(iii) sitting room - \_\_\_\_\_



# MBUYA PARENTS' SCHOOL

## PRIMARY ONE HOLIDAY WORK FOR TERM 1 2020 - WEEK 4

### LITERACY II

Name: \_\_\_\_\_ Stream: \_\_\_\_\_

#### 1. Fill in the missing letters.

so\_\_p

toothbr\_\_\_\_sh

t\_\_\_\_ \_\_thpaste

raz\_\_rb\_\_ade

#### 2. Write words correctly:

shwa - \_\_\_\_\_

terwa - \_\_\_\_\_

ngespo - \_\_\_\_\_

#### 3. Name the pictures.



\_\_\_\_\_



\_\_\_\_\_

4. **Write these sentences correctly:**

(i) broom I use a to sweep.

\_\_\_\_\_

(ii) is Mummy the in kitchen.

\_\_\_\_\_

(iii) Finger I with write my

\_\_\_\_\_

5. **Form words using these sounds.**

sh -sharp

shade

dr - \_\_\_\_\_

\_\_\_\_\_

pl - \_\_\_\_\_

\_\_\_\_\_

ch - \_\_\_\_\_

\_\_\_\_\_

6. **Read and draw:**

A cat on a stool.	Baby sitting on a mat.
A flower in a tin.	A cup on a plate.