



# MBUYA PARENTS' SCHOOL

## PRIMARY SIX HOLIDAY WORK FOR TERM 1 2020 - WEEK 8

### ENGLISH.

**NAME:** \_\_\_\_\_ **STREAM** \_\_\_\_\_

**In each of the following questions 1-5, fill in the blank space with a suitable word.**

1. Either a rope \_\_\_\_\_ a string is used to measure the length of a chalkboard.
2. How \_\_\_\_\_ salt should put in the sauce?
3. It has been raining \_\_\_\_\_ morning
4. Mother left for prayers \_\_\_\_\_ hour ago.
5. A big \_\_\_\_\_ turned up to watch the play at the theatre.

**For number 6-15, use the correct form of the word in brackets to complete the sentence.**

6. His \_\_\_\_\_ helped us to get long lasting solutions. (wise)
7. Grace's \_\_\_\_\_ attracted many me. (beautiful)
8. The \_\_\_\_\_ between the two girls surprised everybody. (similar)
9. Okumu ran quite fast and he was the \_\_\_\_\_ in the race. (one)
10. My younger sister is \_\_\_\_\_ than my elder sister. (pretty)
11. The more the teacher talked, the \_\_\_\_\_ i understood. (little)
12. Some \_\_\_\_\_ do not know where Lire is. (Japan)
13. Mukyala asked for \_\_\_\_\_ to be absent from the lesson this morning. (permit)
14. If he \_\_\_\_\_ enough money, he will buy a bus. (getting)
15. All children like drawing \_\_\_\_\_ shape. (circle)

**In questions 16 and 17, re-write the sentences giving the plural form of the underlined words.**

16. The teacher told them to make good **analysis** before they report to their mothers.

\_\_\_\_\_

17. Uganda has many **hero** to be respected.

\_\_\_\_\_

**In questions 18-20, re-write the sentences giving one word for the underlined group of words.**

18. I gave the money to the **woman who receives money** in the headmistress' office.

---

19. He took his shoes to the **man who repairs shoes**.

---

20. The candidates carried their group revision **without making noise**.

---

**In questions 21 and 22, arrange the given words in alphabetical order.**

21. Corporation, correction, corner, curtain.

---

22. disobey, discover, district, dislike.

---

**In questions 23 and 24, write the full form of the given contractions.**

23. it'll \_\_\_\_\_

24. he's \_\_\_\_\_

**In questions 25 and 26, use each of the given words in a sentence to show that you know the difference in their meaning.**

25. pail \_\_\_\_\_

26. pale \_\_\_\_\_

**In questions 27 and 28, re-write the sentences, giving the opposite of the underlined words.**

27. Doe's handwriting is too **legible** for even an old man to read.

---

28. Most feeder roads in Uganda are **passable**.

---



# MBUYA PARENTS' SCHOOL

## PRIMARY SIX HOLIDAY WORK FOR TERM 1 2020 - WEEK 8

### MATHEMATICS.

**NAME:** \_\_\_\_\_ **STREAM** \_\_\_\_\_

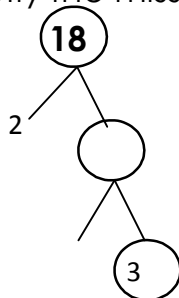
1. Work out:  $1.43 + 1.8$

2. Solve:  $y + 4 = 12$ .

3. Expand: 4213 in value form.

4. Set  $A = \{a, b, c\}$ , How many subsets are in set A?

5. Fill in correctly the missing numbers.



6. What is the sum of the next two numbers in the sequence?

5, 6, 8, 9, 11, \_ \_\_\_\_\_, \_\_\_\_\_

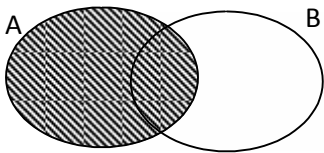
7. Write 364 to the nearest tens.

8. Write the Hindu Arabic numeral for this expansion:  $XXX + IX$ .

9. Find the square of 16.

10. Write 0.19 in words.

11. Describe the un-shaded part in the Venn diagram below.



12. Convert:  $2\frac{1}{2}$  hours into minutes.



# MBUYA PARENTS' SCHOOL

## PRIMARY SIX HOLIDAY WORK FOR TERM 1 2020 - WEEK 8

SST.

**NAME:** \_\_\_\_\_ **STREAM** \_\_\_\_\_

1. Which element of weather favours human settlement?  
\_\_\_\_\_
2. State the significance of the international dateline?  
\_\_\_\_\_
3. Which river forms the natural boundary between Tanzania and Mozambique?  
\_\_\_\_\_
4. How do commercial banks promote rural farming in Uganda?  
\_\_\_\_\_
5. How did the discovery of fire improve on early man's life?  
\_\_\_\_\_
6. Give any one way of promoting culture in our community.  
\_\_\_\_\_
7. How does climate influence human activities?  
\_\_\_\_\_
8. When is a by-election organized?  
\_\_\_\_\_
9. How do primary industries support secondary industries?  
\_\_\_\_\_
10. How did Sir Gerald Portal change the political event of Uganda in 1894?  
\_\_\_\_\_
11. How is a wind sock important at the Airport?  
\_\_\_\_\_
12. Name the Nationalist who led Uganda to her independence.

13. Why was the union jack lowered at Kololo Airstrip on the 9<sup>th</sup> October, 1962?  
\_\_\_\_\_
14. Give one way lakes regulate climate.  
\_\_\_\_\_
15. State the contribution of Dr. David Livingstone in East Africa.  
\_\_\_\_\_
16. What role do police play at the polling station?  
\_\_\_\_\_
17. Name the current secretary General of the East African Community.  
\_\_\_\_\_
18. How did Namirembe Agreement help to restore peace in Buganda Kingdom?  
\_\_\_\_\_
19. Mention the tribe in Nigeria that carries one similar activity like that of the Karamojong of Uganda.  
\_\_\_\_\_
20. Why is irrigation not commonly used in many parts of Uganda?  
\_\_\_\_\_
21. Why was RabaiMpya built by Dr. Ludwig Krapf?  
\_\_\_\_\_
22. Give one reason why road transport is difficult in many parts of Bundibugyo.  
\_\_\_\_\_
23. Which water body joins Mediterranean Sea to the Red Sea?  
\_\_\_\_\_
24. Why is poaching discourage by the government?  
\_\_\_\_\_
25. Why is crop growing not commonly practiced around mount Moroto?  
\_\_\_\_\_



# MBUYA PARENTS' SCHOOL

## PRIMARY SIX HOLIDAY WORK FOR TERM 1 2020 - WEEK 8

RE.

NAME: \_\_\_\_\_ STREAM \_\_\_\_\_

For each of the questions 1-7, answer either their Christian or Islamic questions But not both.

1. **Either:** Why did Prophet Abraham accept to sacrifice his only son?

\_\_\_\_\_

**Or:** Why did Prophet Ibrahim accept to sacrifice his only son?

\_\_\_\_\_

2. **Either:** Why does God forgive sinner?

\_\_\_\_\_

**Or:** Why does Allah forgive sinner?

\_\_\_\_\_

3. **Either:** Why did Adam and Eve fail to live in peace forever?

\_\_\_\_\_

**Or:** Why did Adam and Hawa fail to live in peace forever?

\_\_\_\_\_

4. **Either:** State one reason why Christians observe lent period.

\_\_\_\_\_

**Or:** Why id Saum important in Islamic faith?

\_\_\_\_\_

5. **Either:** How can Christians show love to the needy in the community?

\_\_\_\_\_

**Or:** How can Moslems show love to the needy in the community?

\_\_\_\_\_

6. a) **Either:** Give one reason why a faithful Christian should pray.

\_\_\_\_\_

b) List down any 3 types of prayers in Christian faith.

i) \_\_\_\_\_

ii) \_\_\_\_\_

**Or:** Give any one reason why a faithful Moslem should pray five times a day.

\_\_\_\_\_

b) Give any three conditions which a faithful Moslem should fulfill before performing a prayer.

i) \_\_\_\_\_ ii) \_\_\_\_\_ iii) \_\_\_\_\_

7. **a) Either:** Which sacrament of God is also called laying on the hands to Christians?

\_\_\_\_\_

b) State any two importance of the sacrament you have name in (a) above.

i) \_\_\_\_\_

ii) \_\_\_\_\_

d) Mention the sacrament where wine and bread is used as symbols of faith.

\_\_\_\_\_

**Or:** a) What is Nikah?

\_\_\_\_\_

b) Give any three conditions that allows Nikah to take place.

i. \_\_\_\_\_

ii. \_\_\_\_\_

iii. \_\_\_\_\_





# MBUYA PARENTS' SCHOOL

## PRIMARY SIX HOLIDAY WORK FOR TERM 1 2020 - WEEK 8

### SCIENCE

**NAME:** \_\_\_\_\_ **STREAM** \_\_\_\_\_

1. a) In which one way are plants important to other living organisms in the environment.

\_\_\_\_\_

b) Give one difference between plants and animals in terms of their feeding.

\_\_\_\_\_

\_\_\_\_\_

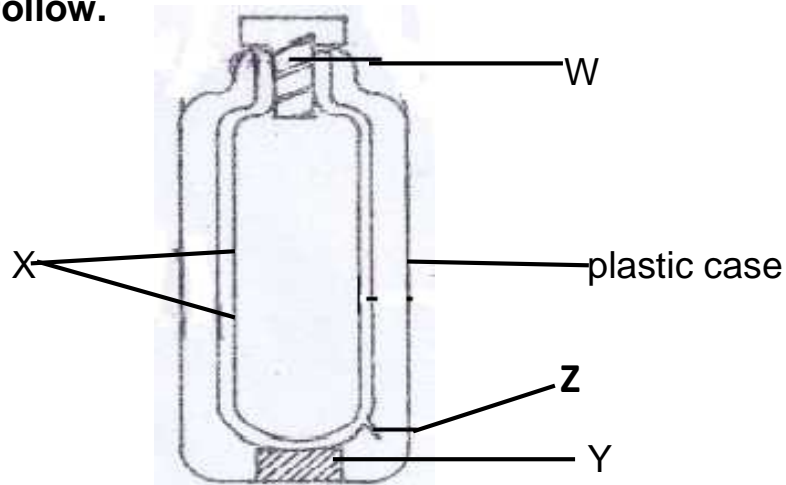
c) Give one way how crop farmers benefit from cats kept at home.

\_\_\_\_\_

d) How do animals benefit from plants?

\_\_\_\_\_

2. **The diagram below is of a thermos flask. Study and use it to answer questions that follow.**



a) Name the parts labelled Y and Z.

i) Y \_\_\_\_\_

ii) Z \_\_\_\_\_

b) Give any one material that can be used for making part W.

---

c) Why is part X able to prevent heat loss by conduction and convection?

---

---

3. a) Which class of food is digested in the stomach?

---

b) How is the ileum able to carry out its function of food absorption?

---

---

c) Give any two ways of preventing disorders of the human digestive system.

i) \_\_\_\_\_

ii) \_\_\_\_\_

4. a) Identify any one effect of freezing on water.

---

b) Name any two states of matter.

i) \_\_\_\_\_ ii) \_\_\_\_\_

c) Which state of matter is water at  $105^{\circ}\text{C}$ ?

---

5. **The table below shows weather elements, instruments and their uses.**

**Study and complete it correctly.**

Element	Instrument	Use
Rainfall	_____	Measures the amount of rainfall.
_____	Hygrometer	Measures the amount of water vapour.
Wind	_____	Measures speed of wind.
Temperature	Thermometer	

--	--	--