



MBUYA PARENTS' SCHOOL

PRIMARY FOUR HOLIDAY WORK FOR TERM 1 2020 - WEEK 8

ENGLISH.

NAME: _____ **STREAM** _____

Use the words in the brackets to complete the sentences correctly.

1. The _____ are playing football. (child)
2. Susan is _____ a blue dress. (wear)
3. Our classroom is _____ than yours. (clean)
4. Why haven't you _____ your work? (do)
5. Red is my _____ colour. (good)

Fill in the gaps with the correct word or group of words.

6. Lucy _____ Peter are my friends.
7. Please, do not lean _____ the wet wall.
8. Alex prefers swimming _____ singing.
9. _____ I came to school late, I did all my work.
10. The girl is crying _____ she is sick.

Use these words to construct meaningful sentences.

11. see _____
12. sea _____

Rearrange the words in alphabetical order.

13. sisal, clay, mat, fibre
- _____

14. pink, pat, pot, put.
- _____

Make correct sentences from the following words.

15. learn to come school we to.

16. crying you are why?

Give the plural form of the underlined words.

17. She has bought a new car. _____

18. The calf has not been treated. _____

19. Whose bus could that be? _____

Rewrite the sentences giving the opposite of the underlined words.

20. My grandfather is poor.

21. She is a very unlucky girl.

22. Peace was absent yesterday.

Write these abbreviations in full:

23. Rd. _____

24. Shan't _____

25. P.O _____

Underline the odd man out:

26. Spoon, kettle, fork. Leaf.

27. Betty, Alex, John, Peter.

28. aeroplane, helicopter, boat, parachute.



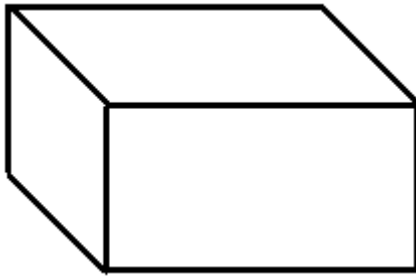
A MBUYA PARENTS' SCHOOL
PRIMARY FOUR HOLIDAY WORK FOR TERM 1 2020 - WEEK 8

MATHEMATICS.

NAME: _____ **STREAM** _____

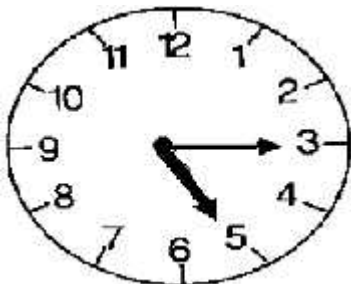
1. Multiply 6 by 3.

2. What name is given to the figure below?



3. What is $\frac{3}{7}$ of 28 balls?

4. Write the time shown on the clock face below.



5. Write 27 in Roman numerals.


6. Change 3 Kg to grams.

7. What is the next number in the sequence: 2, 5, 8, 11, _____?

8. Solve: $\square - 4 = 9$

9. Round off 374 to nearest ten.

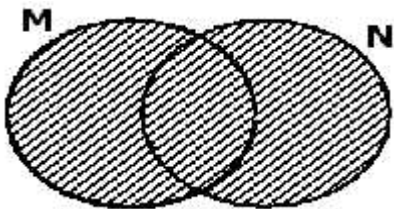
10. Give the unshaded fraction in the figure below.



11. Collect the like terms and simplify: $2x + 3y + 4x + 2y$.

12. Write 4,508 in words.

13. Describe the shaded region in the Venn diagram below.



14. The cost of 1 pen is sh. 500. What is the cost of 4 similar pens?



MBUYA PARENTS' SCHOOL

PRIMARY FOUR HOLIDAY WORK FOR TERM 1 2020 - WEEK 8

SST.

NAME: _____ **STREAM** _____

1. What name is given to lines that run from the East to the West of the globe?

2. Mention one way lakes can be a disadvantage to the people living near them.

3. How are farmers important to the people living in the city?

4. Mention one tourist attraction found in your district.

5. How can a tourist find direction without using a compass?

6. State one way of improving health services in a community.

7. What is a forest?

8. Give one importance of wetlands to the people living near them.

9. How is Local Council I executive committee important to the people living in a village?

10. Name one product got from processing cotton.

11. Identify one factor that can make road transport difficult.

12. In the space provided below, draw the symbol of a linear scale.
13. State any one way roads are important to people in our district.

14. How is a market important to the people in a community?

15. What is meant by the term "permanent river"?

16. Which district borders Mukono in the West?

17. What are by-laws?

18. How does the building of factories in villages stop people from going to towns for settlement?

19. Mention any one economic activity carried out on lake Victoria.

20. Name the biggest ethnic group in Mukono district.

21. Why do people wear heavy clothes on a cold day?

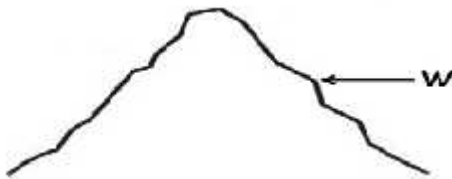
22. Give one role played by cultural institutions in Uganda today.

23. How are prefects important in a school?

24. Name any one important place found in Central Urban Council.

25. State one way a radio can be used as a communication tool.

The diagram shows one of the common physical features. Use it to answer questions 26 – 27.



26. Name the physical feature shown in the diagram above.

27. What name is given to part marked W?

28. Mention one way the police maintains law and order.

29. Ali was walking to school in the morning and his shadow was on his right. In which direction was he walking?



MBUYA PARENTS' SCHOOL

PRIMARY FOUR HOLIDAY WORK FOR TERM 1 2020 - WEEK 8

SCIENCE.

NAME: _____ **STREAM** _____

1. Which insect spreads cholera?

2. How is rotting important in soil formation?

3. Give one example of garden pest.

4. Which part of a leaf has the same function as gills of a fish?

5. Why is a stone considered a non-living thing?

6. How is a dustbin useful in a home?

7. State one problem caused by drought in the environment.

8. Give one way people make water sources contaminated.

9. What is the second stage in the life cycle of a cockroach?

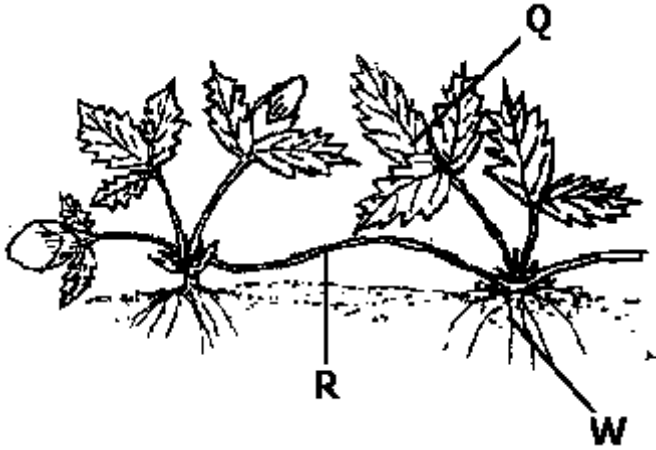
10. Name one item used in giving first aid to a patient with cuts.

11. Why is regular washing of our bodies important?

12. How is photosynthesis important in plants?

13. Mention one way insects protect themselves from enemies.

The diagram below shows a part of plant stem. Use it to answer questions 14 – 16.



14. Name the type of stem marked R.

15. What type of venation does leaf marked Q have?

16. Give the type of roots marked W.

17. How is the sun important to plants?

18. Mention one natural cause of damage to our environment.

The P. 4 children were given the following list of plants: maize, millet, beans, sorghum.

19. Which plant was different from the others in the list?

20. Give a reason for your answer in (19) above.



MBUYA PARENTS' SCHOOL

PRIMARY FOUR HOLIDAY WORK FOR TERM 1 2020 - WEEK 8

Religious Education.

NAME: _____ **STREAM** _____

In this paper answer either Christianity or Islam but not both.

1. Either: How many days did God take to create the world and all things in it?

Or: Why did Allah create man?

2. Either: In which town was Jesus Christ born?

Or: In which town was prophet Muhammad born?

3. Either: Identify any one sacrament in Christianity.

Or: Identify any one impurity in Islam.

4. Either: Who is believed to be the grandfather of all believers in Christianity?

Or: Mention the grandfather of believers in Islam.

5. Either: According to the Bible, who committed the first murder?

Or: Mention the first martyr in Islam.

6. Either: Name the apostle of Jesus Christ who led Roman soldiers to arrest Him.

Or: Who accompanied prophet Muhammad to Taif?

7. Either: Who was the first human being to be created?

Or: Mention the last prophet in Islam?

8. Either: Mention one way Christians celebrate the Christmas day.

Or: Which celebration marks the end of the Holy month of Ramadhan?

9. Either: Which leader in the Old Testament led the Israelites out of slavery in Egypt?

Or: To whom was the Tauret revealed?

10. Either: Where do most Christians go for congregational prayers?

Or: Where do most Muslims go for congregational prayer?

11. Either: What do we call the fasting period for Christians?

Or: How many days do Muslims fast?

12. Either: Why is John the Baptist remembered in Christianity?

Or: Why is Halima remembered in Islam?

13. Either: Give one way Abraham expressed his faith in God.

Or: How did prophet Ibrahim show his faith in Allah?
