



# MBUYA PARENTS' SCHOOL

## PRIMARY THREE HOLIDAY WORK FOR TERM 1 2020 - WEEK 8

ENGLISH.

NAME: \_\_\_\_\_ STREAM \_\_\_\_\_

**Use the correct form of the word in brackets to complete the sentences.**

1. I am \_\_\_\_\_ than my sister. (tall)
2. She \_\_\_\_\_ to the market every day. (go)
3. The man is \_\_\_\_\_ on the stage. (dance)

**Fill in the gaps with a correct word**

4. I want to eat \_\_\_\_\_ apple.
5. A dog \_\_\_\_\_ a domestic animal.
6. She is looking \_\_\_\_\_ you.

**Arrange the words in alphabetical order**

7. Fish, axe, cow, bell

\_\_\_\_\_

8. Dig, dug, desk, duck

\_\_\_\_\_

**Use these words in sentences**

9. hour \_\_\_\_\_
10. our \_\_\_\_\_

**Use 'a' or 'an' to complete the sentences**

11. He is carrying \_\_\_\_\_ umbrella.
12. Daddy bought \_\_\_\_\_ goat from the market.

**Arrange the words to make good sentences**

13. doing are What you?

\_\_\_\_\_

**14. teacher My good is**

---

**Give the plural of the underlined words**

15. He has lost his pen.

---

16. We have a boy in our class.

---

17. The bench is broken.

---

18. The baby is crying.

---

**Circle the odd man out**

19. Table, chair, girl, bench

20. Orange, mango, apple, pen

21. John, Peter, Mary, Alvin

**Write these numbers in words**

22. 8 \_\_\_\_\_

23. 11 \_\_\_\_\_

**Complete the table below**

24. Small \_\_\_\_\_ smallest

25. \_\_\_\_\_ fatter fattest

26. Young younger \_\_\_\_\_

**Fill in the gaps using some or any**

27. I have \_\_\_\_\_ money in my bag.

28. I do not have \_\_\_\_\_ food in the house



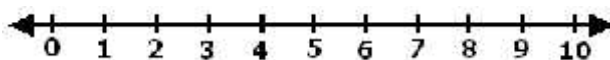
# MBUYA PARENTS' SCHOOL

## PRIMARY THREE HOLIDAY WORK FOR TERM 1 2020 - WEEK 8

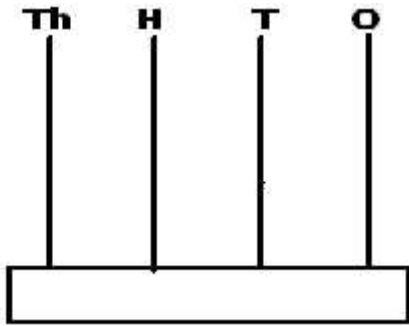
### MATHEMATICS

**NAME:** \_\_\_\_\_ **STREAM** \_\_\_\_\_

1. Add 28 to 13.
2. Find the place value of 2 in 2,156.
3. Share 64 mangoes equally among 8 girls.
4. Write XIX in Hindu Arabic numerals.
5. Draw a triangle in the space provided below. \*\*\*\*\*
6. Write 15 in Roman numerals.
7. Use a number line to work out:  $8 - 3$ .



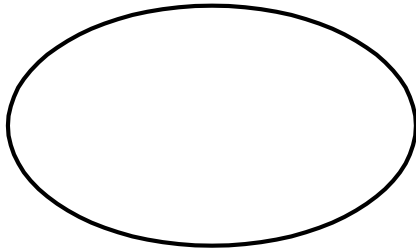
8. Show 4235 on the abacus below.



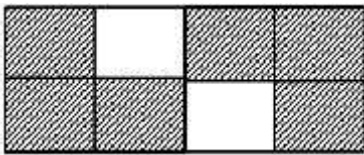
9. Given that set  $A = \{ p, q, r \}$ . Find  $n(A)$ .

10. Find the missing number in the sequence: 2, 4, 6, 8, \_\_\_\_\_.

11. Draw a set of 4 flowers.



12. Write the shaded fraction in the diagram below.



13. There are 24 girls and 31 boys in P. 3 F. How many children are there in the class?

14. Find the missing number in the box.

$$\boxed{\phantom{00}} \div 3 = 4$$



# MBUYA PARENTS' SCHOOL

## PRIMARY THREE HOLIDAY WORK FOR TERM 1 2020 - WEEK 8

### LITERACY B.

**NAME:** \_\_\_\_\_ **STREAM** \_\_\_\_\_

1. What is a map?  
\_\_\_\_\_
2. What title is given to the head of a school?  
\_\_\_\_\_
3. Where do houseflies get their food?  
\_\_\_\_\_
4. State one-way Lake Victoria is important to the people living in Makindye Division.  
\_\_\_\_\_
5. Give one importance of rain to the people living in a community.  
\_\_\_\_\_
6. State one use of trees to people in our area.  
\_\_\_\_\_
7. Name one place that gives health care services in our area.  
\_\_\_\_\_
8. Mention one tool farmers use to produce food.  
\_\_\_\_\_
9. How is a title important to a map-reader?  
\_\_\_\_\_
10. Name the smallest unit of a community where you belong as a child.  
\_\_\_\_\_
11. Give one problem that can be caused by too much sunshine.  
\_\_\_\_\_
12. Mention any one type of community you know.  
\_\_\_\_\_
13. Give any one symbol that makes our school different from others.  
\_\_\_\_\_

14. Name the vice president of Uganda?

---

15. Give one importance of roads to people living in your area.

---

16. What do we call a drawing of an object as seen from above?

---

17. State one way insects can be dangerous to us.

---

18. What does the green colour represent on a map?

---

19. Mention one importance of a television in a home.

---

20. State one way the police maintains law and order in a community.

---

21. Give one danger of building a home in a valley.

---

22. In the space provided below, draw a picture of a tree.



23. State any one activity people do on hills.

---

24. Mention one way children's rights can be abused in our community.

---

25. State one way family members get money.

---

26. Name any one tribe under the Bantu ethnic group.

---

27. Why do people put on clothes?

---



# MBUYA PARENTS' SCHOOL

## PRIMARY THREE HOLIDAY WORK FOR TERM 1 2020 - WEEK 8

### LITERACY A.

**NAME:** \_\_\_\_\_ **STREAM** \_\_\_\_\_

1. What part do plants use to make food.  
\_\_\_\_\_
2. Give one way a razor blade can be used to keep the body clean.  
\_\_\_\_\_
3. Where do houseflies get their food?  
\_\_\_\_\_

The sign below is found in the school compound. Use it to answer questions 4 and 5.

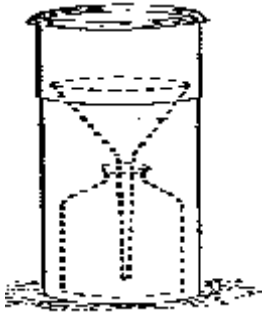


4. How is the message above useful in a school?  
\_\_\_\_\_
5. Name one item that can be used to keep the school clean.  
\_\_\_\_\_
6. State one way water is used in a school.  
\_\_\_\_\_
7. What gas in air is used to put out fires?  
\_\_\_\_\_
8. Mention problem faced by a P. 3 child who does not brush her / his teeth regularly?  
\_\_\_\_\_
9. How are nimbus clouds useful to a crop farmer?  
\_\_\_\_\_
10. Give one example of social insects?  
\_\_\_\_\_
11. Why is it important to boil drinking water?  
\_\_\_\_\_

12. Name one disease in man caused by germs.

\_\_\_\_\_

Below is an instrument used in a weather station. Use it to answer questions 13 and 14.



13. Name the instrument shown in the diagram above.

\_\_\_\_\_  
\_\_\_\_\_

14. How is the instrument useful in a weather station?

\_\_\_\_\_  
\_\_\_\_\_

15. Why do we eat food?

\_\_\_\_\_

16. Mention one agent of soil erosion.

\_\_\_\_\_

17. Give one weapon animals use to protect themselves from enemies.

\_\_\_\_\_

18. What component of soil is formed from dead plants and animals?

\_\_\_\_\_

19. How are physical exercises important to people?

\_\_\_\_\_

20. Give one immunisable disease among children.

\_\_\_\_\_

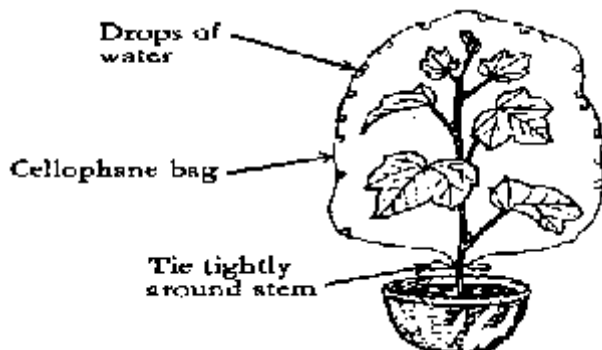
21. State one way of preventing diseases in a community.

\_\_\_\_\_

22. In which weather do people use umbrellas?

\_\_\_\_\_

Study the experiment below and answer questions 23 and 24.



Name the process shown in the diagram above

How is the process useful in the rain formation?





# MBUYA PARENTS' SCHOOL

## PRIMARY THREE HOLIDAY WORK FOR TERM 1 2020 - WEEK 8

### RELIGIOUS EDUCATION.

**NAME:** \_\_\_\_\_ **STREAM** \_\_\_\_\_

In this paper answer either Christianity or Islam but not both.

1. Either: What in full R. E.

\_\_\_\_\_

Or: What is I.R.E.

\_\_\_\_\_

2. Either: Who was the earthly father of Jesus Christ?

\_\_\_\_\_

Or: Who was the father of prophet Muhammad.(P.B.U.H)

\_\_\_\_\_

3. Either: Give one duty of a child in a family.

\_\_\_\_\_

Or: Give one duty of a Muslim child in a family.

\_\_\_\_\_

4. Either: What did God use to make Adam?

\_\_\_\_\_

Or: What did Allah use to create prophet Adam?

\_\_\_\_\_

5. Either: Why did God make the sun?

\_\_\_\_\_

Or: Why did Allah create the sun?

\_\_\_\_\_

6. Either: In which way is a church useful to Christians?

\_\_\_\_\_

Or: In which way is a Mosque useful to a Moslem?

\_\_\_\_\_

7. Either: Mention any one example of a Christian leader.

\_\_\_\_\_

Or: Mention any one example of a Muslim leader.

---

8. Either: What is Lent?

---

Or: Who brought Allah's message to prophet Muhammad (PBUH)?

---

9. Either: In which town was Jesus born?

---

Or: In which city was prophet Muhammad (P.B.U.H) born?

---

10. Either: Name the angel whom God sent to virgin Mary.

---

Or: Name the prophet in Islam who received the Qur'an.

---

11. Either: Why is river Jordan remembered by Christians?

---

Or: Why is Mountain Hira remembered in Islam?

---

12. Either: In which garden did God put Eve?

---

Or: Where did Prophet Muhammad (P.B.U.H) receive the first revelation from Allah?

---

13. Either: How is a Bible useful to a Christian?

---

Or: How is a Qur'an useful to a Muslim?

---

14. Either: What did God create on the first day?

---

Or: How many times a Moslem should pray in a day?

---