



MBUYA PARENTS' SCHOOL

PRIMARY TWO HOLIDAY WORK FOR TERM 1 2020 - WEEK 8

CHRISTIAN RELIGIOUS EDUCATION.

NAME: _____ **STREAM** _____

1. Who died on the cross for our sins?

2. Write your Religious name.

3. Name two religious leaders who baptize others in a church.

(a) _____ (b) _____

4. **Circle what makes God unhappy.**

sharing, greeting, stealing, obeying elders.

5. What did God create on the first day?

6. Mention the roles of these people in a family

father _____

mother _____

children _____

7. Who was the wife of Adam?

8. How many testaments are found in the Bible?


9. What lesson do you learn from the story of the good Samaritan?

10. Draw and name any two places of worship.

11. Why is it good to live in a nuclear family?

12. What is the holy book for Christians?

13. Name these religious symbols.



14. Why was Adam and Eve chased from the Garden of Eden?

15. How do you talk to God?



MBUYA PARENTS' SCHOOL

PRIMARY TWO HOLIDAY WORK FOR TERM 1 2020 - WEEK 8

ENGLISH

NAME: _____ STREAM _____

1. Name this object



2. Write these correctly

(a) usn _____

3. Give the plurals of these words

(a) boy _____

(b) bench _____

4. Use the words given in brackets correctly

(a) Kato is _____ to school now. (go)

(b) He _____ the classroom every day. (clean)

(c) We _____ football yesterday. (play)

5. Make small words from the big one

(a) goat _____

(b) teacher _____

6. Arrange the words in alphabetical order

(a) Bird, axe, door, cup

(b) Kettle, egg, pot, girl

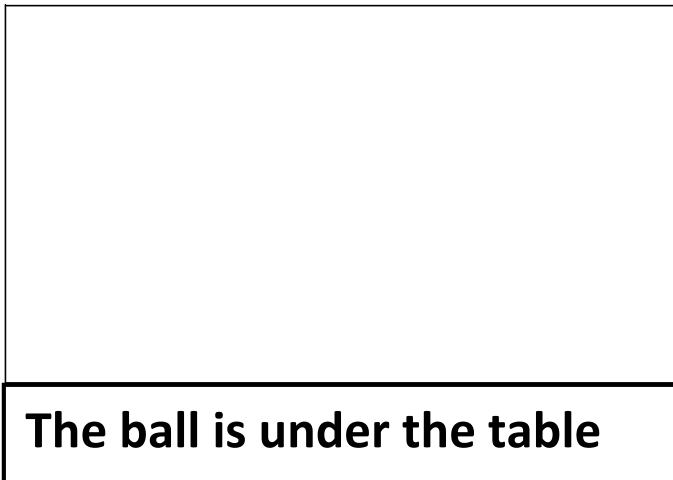
7. Circle the odd one out

(a) eye, flower, mouth, ear

8. Complete this table

old	older	oldest
small	_____	smallest
_____	fatter	fattest

9. Read and draw



10. Arrange the words to make correct sentences

(a) playing are we.

(b) Mary bag has good a.



MBUYA PARENTS' SCHOOL

PRIMARY TWO HOLIDAY WORK FOR TERM 1 2020 - WEEK 8

LITERACY A

NAME: _____ **STREAM** _____

1. Mention the human body part used for smelling.

2. Why do we boil water for drinking?

3. Name the source of light and heat below.



4. How is the broom useful in the school?

5. Give any **one** example of an insect.

6. Write any **one** common accident at school.

7. How can we prevent malaria at home?

8. How do we call the general cleanliness of an area?

9. Give any **one** way of preserving food.

10. Identify any **one** source of food.

11. Mention any **one** activity you do after visiting the toilet or latrine.

12. Write any **one** use of electricity at home.

13. Mention **one** thing or product got from a cow.


14. Give any **one** characteristic of living things.

15. What is wind?

16. Which group of animals is kept at home?

17. Name any **one** disease spread by a housefly.

18. Name the road sign below.



19. Write the best food for babies.

20. Write any **one** use of water to people.



MBUYA PARENTS' SCHOOL

PRIMARY TWO HOLIDAY WORK FOR TERM 1 2020 - WEEK 8

LITERACY B

NAME: _____ **STREAM** _____

1. What is a family?

2. Draw and name any one school symbol you know.



3. Why do children go to school?

4. How do we call some one who build houses?

5. Name one thing which can help to show where your school is found.

6. What is a home?

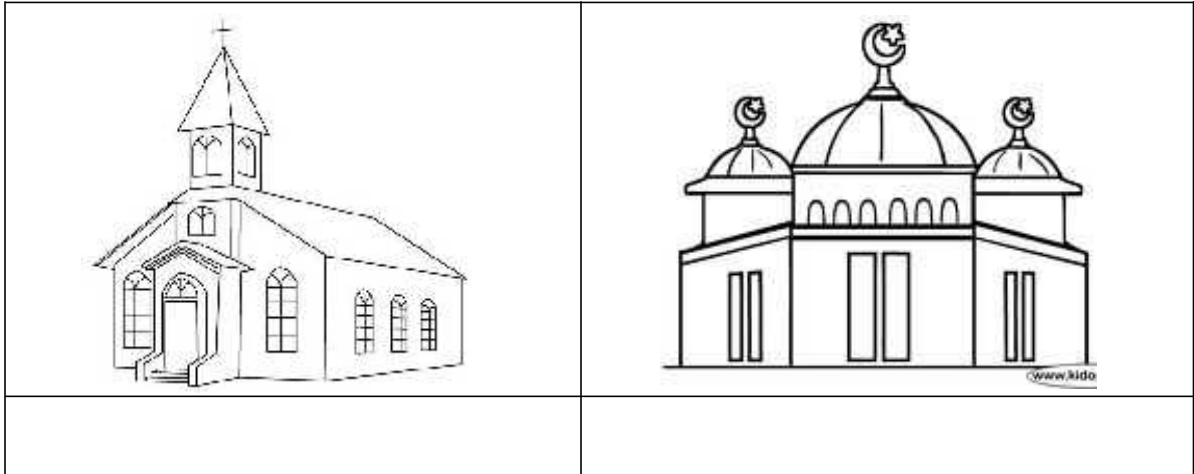
7. Why do we need teachers in a community?

8. Name any one thing we can get from the swamp.

9. Write two colours found on your school flag.

(a) _____ (b) _____

10. Name these places of worship.




11. How do people manage rainy weather?

12. _____ is the acceptable way of behaving in a society.

13. Why do we keep hens at home?

14. Name the means of transport below.



15. Where do we go for treatment when we are sick?



MBUYA PARENTS' SCHOOL

PRIMARY TWO HOLIDAY WORK FOR TERM 1 2020 - WEEK 8

MATHEMATICS

NAME: _____ STREAM _____

1. Add correctly:

a) 11 goats + 15 goats = _____

2. Name this set.



3. What number has been expanded?

$100 + 40 + 6 =$ _____

4. Draw a triangle in the space below

5. Find the missing number.

- 2 = 8

6. Circle the biggest number.

167, 117, 107, 176


7. What is 8 less 3?

8. Multiply

2 3

$$\begin{array}{r} \underline{x3} \\ \end{array}$$

9. What number is shown?



= _____

10. Work out.

$$\frac{4}{6} + \frac{1}{6} = \underline{\hspace{2cm}}$$

11. What is the place value of 8 in this figure?

318