



MBUYA PARENTS' SCHOOL

PRIMARY ONE HOLIDAY WORK FOR TERM 1 2020 - WEEK 8

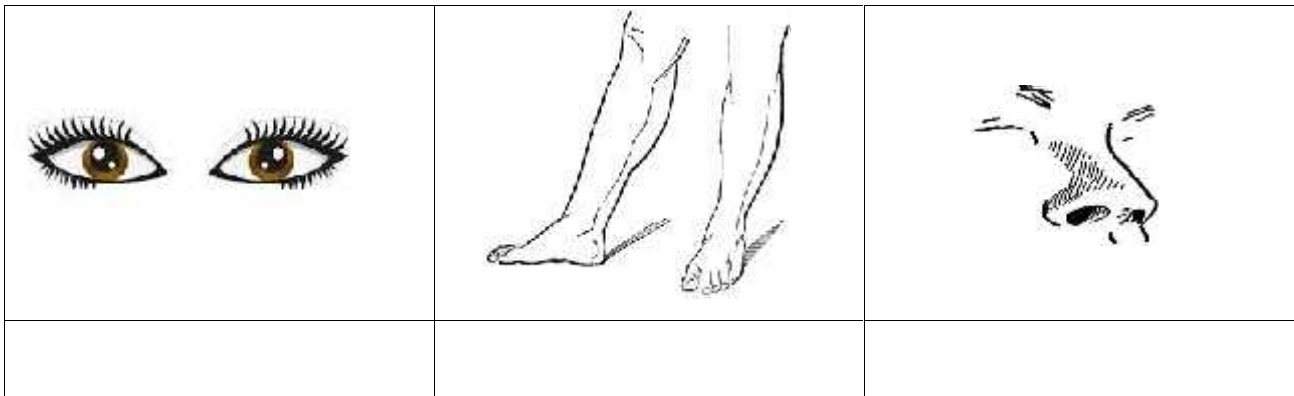
CHRISTIAN RELIGIOUS EDUCATION.

Name _____ Stream _____

1. Write one Christian name for boys.

2. Who created you?

3. Name these gifts shown below.



4. How do children help their parents at home?

5. Underline the ways of respecting people

(a) greeting them.

(b) beating them.

(c) saying sorry.

6. Name any one thing that God created.

7. Who breast feeds the baby at home?

8. **Match people's names to their meanings.**

- | | |
|----------|-----------------|
| Peter | battle |
| Emmanuel | blessing |
| Hilda | rock |
| Mukisa | God is with us. |

9. Name the holy book for Christians.

10. Why did God create the sun?

11. Draw these places of worship.

mosque	Church

12. When do Christians go for general prayers?

13. Who died on the cross for our sins?

14. How do Christians talk to God?

15. Who saved people from their sins?




MBUYA PARENTS' SCHOOL

PRIMARY ONE HOLIDAY WORK FOR TERM 1 2020 - WEEK 8

ENGLISH.

NAME: _____ STREAM _____

1. Name these pictures



2. Write the following in small letters

(a) D _____

(b) H _____

(c) G _____

3. Fill in the missing letters

(a) b ___x

(b) c ___ r

(c) br ___ _m

4. Use 'has' or 'have' to complete the sentences

(a) An elephant _____ a small tail.

(b) You _____ a nice bag.

5. Fill in the gaps using on, under, in

(a)



The pot is _____ the table.

(b)



The pencil is _____ the tin.

6. Use 'a' or 'an' to complete the sentences

(a) Mummy bought _____ orange yesterday.

(b) The farmer has _____ rake and an axe.

(c) There is _____ book on the table.

7. Use the verbs in the brackets correctly

(a) He is _____ the ball. (kick)

(b) Mary is _____ to school. (go)

8. Which letter comes after?

(a) d _____

(b) a _____

9. Change to plural form

(a) One _____ Many

(b) Ear _____

(c) Leg _____



MBUYA PARENTS' SCHOOL

PRIMARY ONE HOLIDAY WORK FOR TERM 1 2020 - WEEK 8

LITERACY 1.


NAME: _____ **STREAM** _____

1. Name the food a baby gets from the mother's breasts.

2. Name any other part of a house.

3. Write any one person who works in a hospital.

4. The picture below shows food stuff.



Give the name of the food stuff above.

5. (a) How do we keep our teeth clean?

(b) Name any two things people use to brush teeth?

(i) _____ (ii) _____

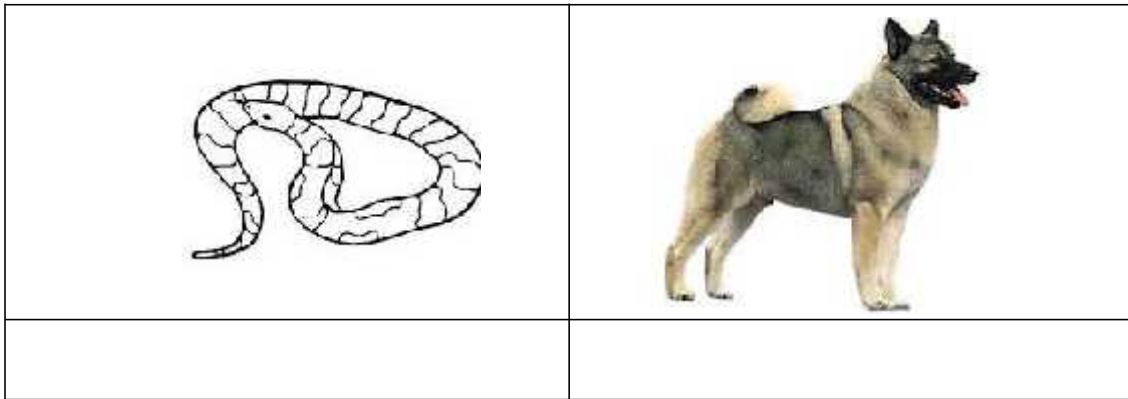
6. Give one way of keeping our shoes clean?

7. Name any one type of animal.

8. Write any one place where we get food.

9. How many legs does a hen have?

10. Name the animals below.



11. (a) Draw a tree.



12. Where do fish live?

13. Give any two things we get from a cow.

(a) _____ (b) _____

14. Name any one thing we use when eating food.

15. What part of your body is used for kicking balls?

16. Draw a hen.



MBUYA PARENTS' SCHOOL

PRIMARY ONE HOLIDAY WORK FOR TERM 1 2020 - WEEK 8

LITERACY B.

NAME: _____ **STREAM** _____

1. Draw and name any two play objects.

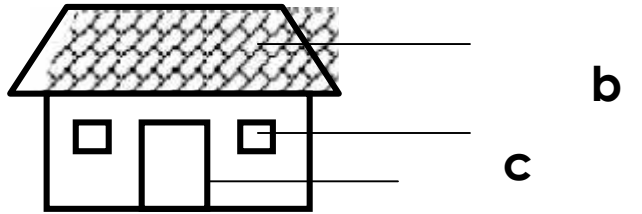
18. Why do children bring pencils to school?

19. Write any two rooms found in a house.

(a) _____ (b) _____

20. Draw and name any two things found in a bathroom.

21.




Name the parts of a house.

(a) _____ (c) _____

(b) _____

22. Give one use of a house.

23. Name this bird kept at home.



24. Why do we need these people in our community?

(a) teachers _____

(b) policemen _____

25. Give one use of plants to us.

26. Which domestic animal gives us mutton and wool?



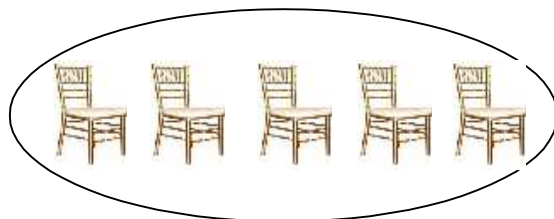
MBUYA PARENTS' SCHOOL

PRIMARY ONE HOLIDAY WORK FOR TERM 1 2020 - WEEK 8

MATHEMATICS.

NAME: _____ **STREAM** _____

1. (a) Name this set



(b) Circle the bigger number.

4 or 10

(c) Find the missing number.

$$6 + \square = 8$$

2. (a) What number has been expanded?

$$30 + 2 = \underline{\hspace{2cm}}$$

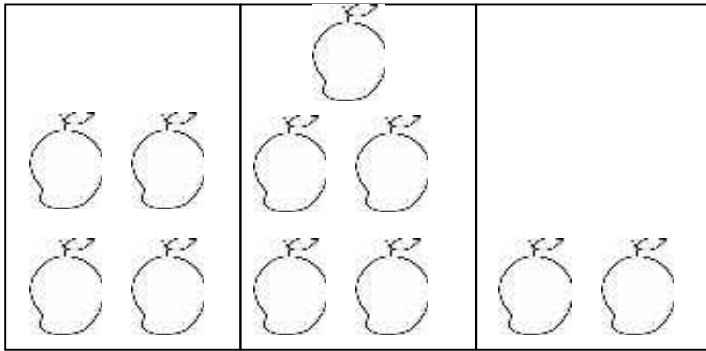
(b) Match correctly.

$$2 \times 2 = \text{five}$$

$$10 + 2 = \text{four}$$

$$7 - 2 = \text{twelve}$$

3. Study the graph and answer questions that follow it.
Three boys picked mangoes.



John

Tom


Musa

a) Who picked 4 mangoes?

b) How many mangoes did Tom pick?

c) How many mangoes did they pick altogether?

30. Form a new set from a big set and name it.



31. (a) Circle the smallest number.

30, 10, 20, 40