



MBUYA PARENTS' SCHOOL

PRIMARY SIX HOLIDAY WORK FOR TERM 1 2020 - WEEK 7

ENGLISH

NAME _____ STREAM _____

In each of the questions 1 – 5, fill in the blank space with a suitable word.

1. I have been living in this village _____ I was born.
2. We always get instructions _____ our teachers.
3. The lady _____ kidnapped a young boy was imprisoned.
4. The accused was neither charged _____ sent to jail.
5. The _____ has not repaired my shoes.

In each of the questions 6 to 15, use the correct form of the word given in the brackets to complete the sentence.

6. Mr. Mukasa was _____ the headteacher of our school. (one)
7. He _____ answered all the questions and passed the test. (care)
8. Meddie _____ a fountain pen to a ball point pen. (prefer)
9. A python is a _____ snake. (danger)
10. The _____ of the plane was sudden. (depart)
11. The three _____ were successfully trapped. (mouse)
12. A friend of _____ has graduated from the university. (he)
13. Rainfall is very _____ to crop farmers and cattle keepers. (use)
14. Mary is _____ the classroom now. (mop)
15. How many _____ are there in the Kraal? (calf)

In each of the questions 16 and 17, use each of the given words in a sentence to show that you know the difference in their meaning.

16. peace

17. piece

In questions 18 and 19, re-arrange the given words to form a correct sentence.

18. is doctor uncle a My.

19. good is Kato driver a.

In questions 20 and 21, write each of the abbreviations in full.

20. gov't _____

21. Co. _____

In each of the question 22 and 23, re-write the sentence giving the opposite form of the underlined word.

22. Permanent houses have been banned in the city.

23. Most of the guests arrived late.

In questions 24 and 25, arrange the given words in alphabetical order.

24. point, pocket, poetry, poem

25. storm, stone, store, stop

In each of the questions 26 to 28, write the plural form of the given word.

26. thief _____

27. lady _____

28. stitch _____

In each of the questions 29 and 30, re-write the sentence giving one word for the underlined group of words.

29. My sister's daughter was elected headgirl.

30. This examination is not easy.



MBUYA PARENTS' SCHOOL

PRIMARY SIX HOLIDAY WORK FOR TERM 1 2020 - WEEK 7

MATHEMATICS

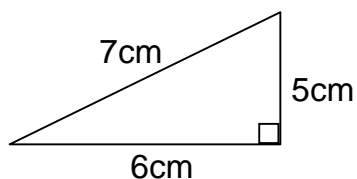
NAME _____ STREAM _____

1. Add:

$$\begin{array}{r} 13 \\ + 56 \\ \hline \\ \hline \end{array}$$

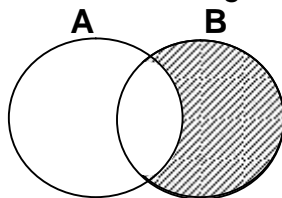
2. What is the place value of 4 in the numeral 2430?

3. Work out the area of the figure below.



4. Write XLV in Hindu Arabic numerals.

5. Describe the shaded region.



6. Give the next number in the sequence below.

2, 3, 5, 7, _____

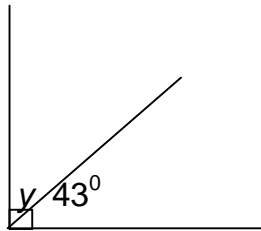
7. Simplify: $\frac{1}{3} + \frac{1}{6}$

8. Work out $4 + 3 = \underline{\hspace{2cm}}$ (mod 5)

9. Kamoga bought an art book at shs. 1000. He then sold it at shs. 700. Find his loss.

10. Find the mean of 8, 6, 5 and 1.

11. Calculate the value of y in degrees.



12. What is $\frac{3}{4}$ of 120 mangoes?

13. Write in figures “Two thousand fifteen”

14. Kiryowa had sh. 23600 and Musisi had sh. 21400. How much more money did Kiryowa had than Musisi?



MBUYA PARENTS' SCHOOL

PRIMARY SIX HOLIDAY WORK FOR TERM 1 2020 - WEEK 7

SCIENCE

NAME _____ STREAM _____

1. Name the best soil for growing crops.

2. Give one example of a pouched mammal.

3. How does painting prevent rusting of metals?

4. How is a spur useful to a cock?

5. Why is ironing of clothes a good health habit?


6. State one danger of deforestation to the environment.

7. Why is burning referred to as a chemical change?

8. Why is a spider not regarded as an insect?

9. What is the gestation period of a ewe?

The diagram below shows the structure of an onion. Study it carefully and answer question 10.



10. Name the type of roots marked Y.

11. Give any one property of air.

12. Mention one disease of poultry caused by a virus.

13. Why do some trees shed off their leaves during a dry season?

14. Suggest one reason why bees swarm.

15. State any one way through which germs enter our bodies.

16. What form of energy does a falling stone have before it reaches the ground?

17. How do bees and wasps protect themselves?

18. Why is proper disposal of refuse important in a home?

19. How is the life cycle of a grasshopper similar to that of a locust?

The diagram below shows the structure of a blood cell. Study it and answer question 20.



20. Name the blood cell shown above.



MBUYA PARENTS' SCHOOL

PRIMARY SIX HOLIDAY WORK FOR TERM 1 2020 - WEEK 7

SST

NAME _____ STREAM _____

1. Name the Uganda's neighbour to the North.

2. What is natural vegetation?

3. Name one country that joined the East African Community previously.

4. What name is given to the region that lies between $23\frac{1}{2}^{\circ}\text{N}$ and $23\frac{1}{2}^{\circ}\text{S}$ in Africa?

5. Why are there few people in North – Eastern Uganda?

6. Which physical feature covers the largest part of East Africa?

7. Who was the last ruler of the Bachwezi?

8. Why are there mountain gorillas in Bwindi National Park but not in Kidepo Valley National Park?

9. How did Sir Albert Cook contribute to the health sector of Uganda?

10. Why is the Prime meridian marked 0° ?

11. Why were political parties formed in the 1950s in Uganda?

12. How do industries affect the environment?

13. Identify any one basic need of a child at home.

14. What term is used to mean the remains of early man?

15. State one political contribution of the Bachwezi in Uganda.

16. Give one disadvantage of a deficit budget to a country like Uganda.

17. Who is the current speaker of the East African Legislative Assembly?

18. Why do Police officers wear uniforms?

19. How is a sailor able to find the right direction on the ocean?

20. Name the official who signed the 1900 Buganda Agreement on behalf of the British colonial government.

21. Why is Mt. Rwenzori snow-capped throughout the year?

22. Which term is used to mean the steep-sides of a rift valley?

23. Why do people in hilly areas keep donkeys?

24. State any one duty of a citizen.

25. Why is Miombo woodland not suitable for cattle keeping?
