



MBUYA PARENTS' SCHOOL

PRIMARY TWO HOLIDAY WORK FOR TERM 1 2020 - WEEK 7

ENGLISH


Name: _____ Stream: _____

1. **Fill in the missing letters.**

(a) un__fo__m (b) f__ag (c) bal__

2. **Name these objects**


(a)



(b)



(c)



3. **Arrange the words in a b c order.**

(a) egg dog cat

(b) peas onion meat

4. **Write the plural of the underlined words.**

(a) Peter has a pen. _____

(b) Our teacher is a good man. _____

(c) The dish is full of food. _____

5. **Write in full.**

(a) Tr. _____

(c) Nov. _____

(b) Dr. _____

6. **Arrange the letters to form correct words.**

(a) skde _____ (c) blefa _____

(b) ircha _____

7. **Circle the compound word**

(a) Our classroom is clean.

(b) The teapot is on the table.

(c) The blackboard is big.

(d) Mother's handbag is black.

8. **Underline the odd member in the list.**

(a) pencil, book, rubber, car

(b) John, Peter, Jane, Charles

(c) mango, oranges, apples, posho


9. **Write a small word from the big one.**


(a) weather _____ (c) teacher _____

(b) wash _____

10. **Fill in the correct word.**

(a)  Tom is pointing _____ the aeroplane.

(b)  The tree is _____ the hut.

(c)  The pencil is _____ the table.



MBUYA PARENTS' SCHOOL

PRIMARY TWO HOLIDAY WORK FOR TERM 1 2020 - WEEK 7

LITEARCY B

Name: _____ Stream: _____

1. _____ is a place where we go to learn.

(home, school, market)

2. A dog is to puppy as duck is to _____.

3. Tick the school symbols only.


(a) toilets (b) badge (c) books


(d) uniform

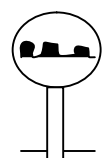
4. Give one type of family.

5. Complete the sentence correctly.

a.  We use this tool for _____ in the garden.

b.  I can use this _____ to sweep my classroom.

c.  This is a school symbol. It is called a _____

d.  This is a road _____. It warns drivers about humps ahead.

6. **Read and write True or False**

- a. A headteacher heads a school. _____
- b. Elephants are domestic animals. _____
- c. Plants give us food. _____
- d. A doctor treats patients. _____

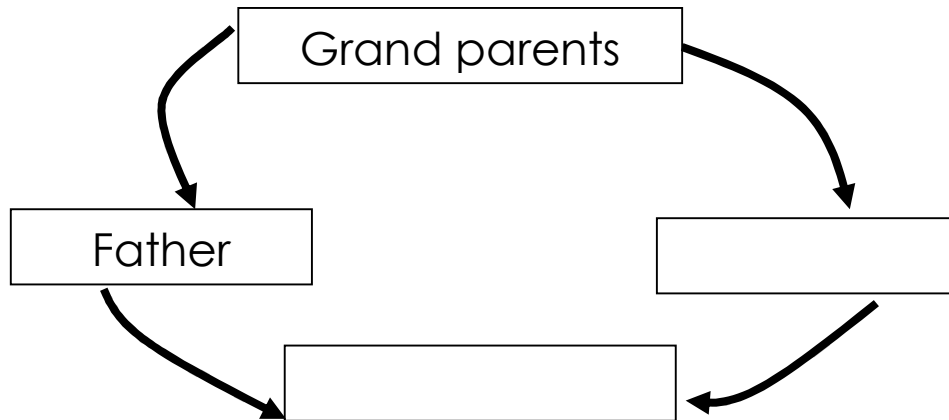
7. **Read and complete correctly**

- a. I am a black rectangle. I am found in your class. Teachers use chalk to write on me. What am I?

- b. I am a school symbol. I show the location of your school. What am I?

- c. I live in a stable. You use me to carry things from one place to another. What am I?

8. **Fill in the missing words.**





MBUYA PARENTS' SCHOOL
PRIMARY TWO HOLIDAY WORK FOR TERM 1 2020 - WEEK 7

LITEARCY A

Name: _____ **Stream:** _____

Use the words given below to complete the sentences

Germination, grams, fresh seeds, pests

1. Animals, insects and birds that spoil crops are called _____

(b) _____ is the growing of a seed into a seedling.

(c) The basic unit for weight is _____

(d) _____ are seeds which have water in them.

2. Write True or False

(a) A cockroach does not have wings _____

(b) A true insect has six legs. _____

(c) Insects breathe through spiracles. _____

(d) Termites destroy crops. _____

3. Write out the natural changes

(a) planting trees (i) _____

(b) burning bushes (ii) _____

(c) growth (iii) _____

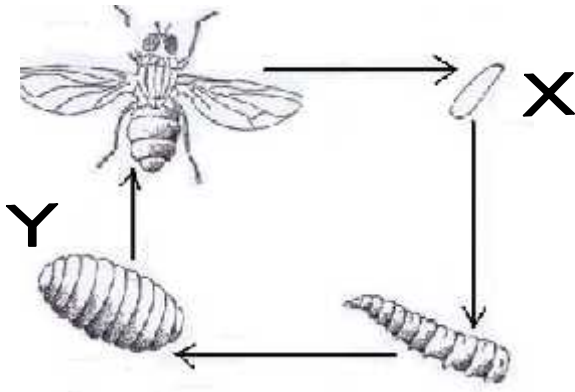
(d) reproduction (iv) _____

(e) cutting down trees

(f) germination

(g) decomposition

4 Study the life cycle of an insect below.



(a) Name the stages.

X _____

Y _____

(b) State any two insects which undergo the above lifecycle.

(i) _____

(ii) _____

5. Name the sense organ used for the following:

(i) Hearing _____

(ii) Feeding _____

(iii) Seeing _____

(iv) Smelling _____

6. Match the animal in list A to the way it protects itself in list B

List A

List B

cat

by producing bad smell.

snake

by stinging

bee

by using its claws

skunk

by using its fangs

(a) cat _____

(b) snake _____

(c) bee _____

(d) skunk _____

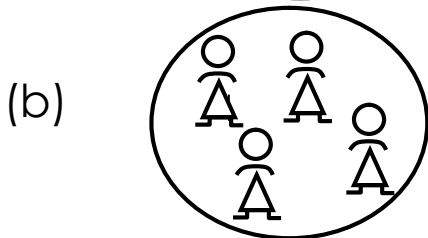



MBUYA PARENTS' SCHOOL
PRIMARY TWO HOLIDAY WORK FOR TERM 1 2020 - WEEK 7

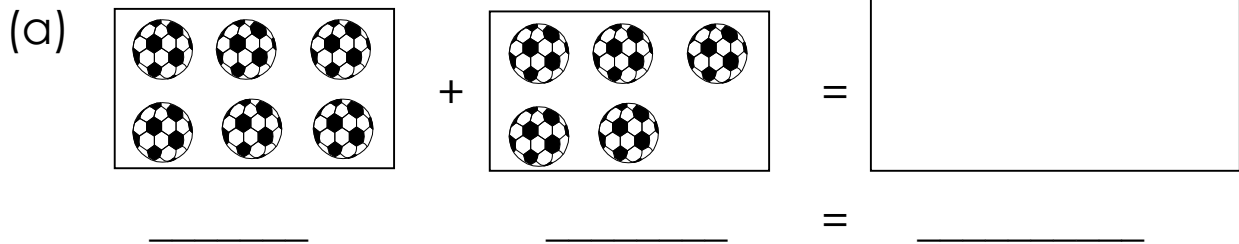
MATHEMATICS

Name: _____ Stream: _____

1 **Name these sets.**



2. **Add:**



(b) $8 + 0 + 7 =$ _____

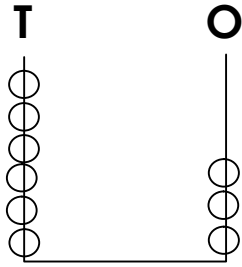
(c)
$$\begin{array}{r} \text{T} \quad \text{O} \\ 4 \quad 5 \\ + 2 \quad 4 \\ \hline \end{array}$$

3. **Write in figures.**


(a) Sixteen - _____

(b) Forty eight - _____

4. (a) What number is shown on the abacus?



(b) Complete the abacus.



5. Subtract

(a) 12 eggs - 7 eggs = _____ eggs.

(b)
$$\begin{array}{r} \text{T} \quad \text{O} \\ 5 \quad 7 \\ - 2 \quad 3 \\ \hline \end{array}$$

6. (a) Name the shapes.

