



# MBUYA PARENTS' SCHOOL

## PRIMARY THREE HOLIDAY WORK FOR TERM 1 2020 - WEEK 7

### ENGLISH

**Name:** \_\_\_\_\_ **Stream:** \_\_\_\_\_

In each of questions 1 to 5, fill in the correct word.

1. I eat \_\_\_\_\_ orange everyday.
2. Musa \_\_\_\_\_ John are playing football.
3. I am going \_\_\_\_\_ school tomorrow.
4. An insect \_\_\_\_\_ six legs.
5. A cow is smaller \_\_\_\_\_ an elephant.

In questions 6 to 8, write the full forms of the given abbreviations.

6. Ltd. \_\_\_\_\_
7. Sun. \_\_\_\_\_
8. Dr. \_\_\_\_\_

In each of the questions 9 to 13, use the correct form of the word given in brackets to complete the sentence.

9. Sarah is \_\_\_\_\_ a basket. (carry)
10. A plane is \_\_\_\_\_ than a car. (fast)
11. That bag is \_\_\_\_\_. (my)
12. Our \_\_\_\_\_ is very friendly. (teach)
13. The two \_\_\_\_\_ ate our bananas. (monkey)

In questions 14 and 15, arrange the words in alphabetical order.

14. list, hyena, eats, goat
- \_\_\_\_\_

15. boy, buy, beg, bag
- \_\_\_\_\_

In questions 16 and 18, write the plural forms of the given words.

16. lorry \_\_\_\_\_

17. knife \_\_\_\_\_

18. mango \_\_\_\_\_

In each of the questions 19 and 21, re-arrange the words to form a good sentence.

19. cooking is food Mother.

\_\_\_\_\_

20. grass is The eating goat.

\_\_\_\_\_

21. wild is a animal Hyena.

\_\_\_\_\_

Make a sentence using each of these words correctly.

22. cat

\_\_\_\_\_

23. cut

\_\_\_\_\_

In each of the questions 24 to 26, re-write the sentence giving the opposite of the underlined word.

24. Maria's uniform is very dirty.

\_\_\_\_\_

25. I cannot climb short trees.

\_\_\_\_\_

26. That woman works at Mulago hospital.

\_\_\_\_\_

In questions 27 to 29, make small words from the big ones.

27. teacher \_\_\_\_\_

28. window \_\_\_\_\_

29. monkey \_\_\_\_\_



# MBUYA PARENTS' SCHOOL

## PRIMARY THREE HOLIDAY WORK FOR TERM 1 2020 - WEEK 7

### LITERACY A

**Name:** \_\_\_\_\_ **Stream:** \_\_\_\_\_

1. Fill in the missing letters.

E \_ \_ v \_ \_ \_ \_ o n \_ \_ \_ n t

2. Circle one element of weather.

sun soil wind man

3. What is the best season for harvesting crops?

\_\_\_\_\_

4. Why do people cut down trees?

\_\_\_\_\_

5. Underline the component of soil from the list below.

sunlight, water, carbon dioxide, chlorophyll

6. Mention one place where germs are common.

\_\_\_\_\_

7. Give one example of materials used by a farmer to mulch his garden.

\_\_\_\_\_

8. Name the gas that supports life in people.

\_\_\_\_\_

9. What is First Aid?

\_\_\_\_\_

10. Name one living organism that lives in soil.

\_\_\_\_\_

11. How does a chameleon protect itself?

\_\_\_\_\_

\_\_\_\_\_

12. Name the part on your body which you use for feeling.

---

13. Mention one example of animals that lives in water.

---

14. How can we protect ourselves from malaria?

---

15. What is wind?

---

16. In the space below, draw a garden rake.

17. How do snakes move?

---

18. Give one reason why people eat food.

---

19. How many stages of growth does a housefly undergo?

---

20. Name one insect that visits flowers.

---

21. What are natural changes?

---

22. Underline the odd word.

sand soil, top soil, clay soil, loam soil

23. Where does the moon get its light from?

---

24. Which part of a cassava plant is eaten by people?

---

25. What is the best food for babies?

---



# MBUYA PARENTS' SCHOOL

## PRIMARY THREE HOLIDAY WORK FOR TERM 1 2020 - WEEK 7

### MATHEMATICS

Name: \_\_\_\_\_ Stream: \_\_\_\_\_

1. Add:

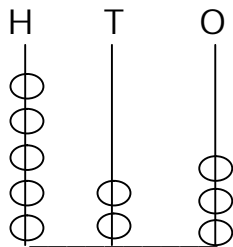
$$\begin{array}{r} 1 \quad 2 \\ + 1 \quad 0 \\ \hline \end{array}$$

\_\_\_\_\_

2. Write in words 3 4 9.

3. How many days are in 2 weeks?

4. What number is shown on the abacus?



= \_\_\_\_\_

\_\_\_\_\_

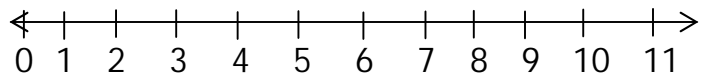
5. Given that set  $P = \{ \text{🌐} \text{📖} \text{🏠} \}$

How many members are in set P?



6. Complete the number sequence  
0, 3, 6, 9, 12, \_\_\_\_

7. Add:  $\frac{1}{4} + \frac{2}{4} =$

8. Add  $3 + 4$  using a number line.



9. One cup costs sh. 600, how much will Kato pay for 2 cups?

10.  = 3 trees. How many trees are represented by 

11. Name this shape.



12. Share 12 oranges between 2 boys.


13. What is the place value of 4 in 341?

14. Name the unshaded fraction.



15. 3 metres + 7 metres = \_\_\_ metres.

16. Group members in twos.



There are \_\_\_\_\_ groups of twos.


17. Fill in the missing number.

$$\square - 3 = 9$$

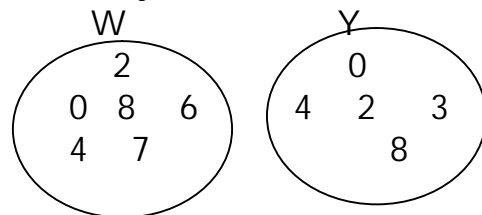
18. Write in figures.  
Eight hundred sixty five.

19. Draw a triangle.

20. Show a half past 10 on the clock face.



21. Study the sets below. (2 marks each)



(a) How many members are in set W?

(b) List members in set Y.

(c) Which set has more members?



# MBUYA PARENTS' SCHOOL

## PRIMARY THREE HOLIDAY WORK FOR TERM 1 2020 - WEEK 7

### LITERACY B

**Name:** \_\_\_\_\_ **Stream:** \_\_\_\_\_

1. Write one symbol of a school.

\_\_\_\_\_

2. Give one use of a camel to people.

\_\_\_\_\_

3. Mention one example of a temporary house.

\_\_\_\_\_

4. What is the work of a school nurse?

\_\_\_\_\_

5. In what season do farmers plant their crops?

\_\_\_\_\_

6. Give one means of road transport.

\_\_\_\_\_

7. Circle the first person to live on earth.

Kintu      Nambi      Adam      Walumbe      Eve

8. In which compass direction does the sun set?

\_\_\_\_\_

9. What product do we get from sugarcane?

\_\_\_\_\_

10. Give the use of desks in your classroom.

\_\_\_\_\_

11. Write L.C in full.

\_\_\_\_\_

12. Draw and name the main natural source of water.



13. How is a teacher important in a community?

---

14. Give any one example of a garden tool.

---

15. Why do people have mobile phones?

---

16. Underline the biggest ethnic group.

Nilotics, Hamites, Bantu, Nilo-hamites

17. What is a community?

---

18. What do people do in order to get money?

---

---

19. Give any one source of food.

---

20. Which element of a good map tells what the map is showing?

---

21. Why do people wear clothes?

---

---

22. What does a cow feed on?

---

23. Why do children go to school?

---