



MBUYA PARENTS' SCHOOL

PRIMARY SIX HOLIDAY WORK FOR TERM 1 2020 - WEEK 5

ENGLISH

Name: _____ Stream: _____

For each of the questions 1-5, fill in the blank space with a suitable word.

1. All road users should respect _____ Highway Code.
2. The pupils succeeded _____ opposing the motion.
3. I did not abuse him, _____ I?
4. Is there anybody in Primary Six _____ doesn't eat chocolate cake.
5. _____ should look right, left and then right before one crosses the road.

In questions 6-15, use the correct form of the word in brackets to complete the sentences.

6. Abaho was _____ by a speeding car. (knock)
7. My mother takes us to the zoo _____ a year. (two)
8. Little boys always _____ their toes while playing football. (hurt)
9. People should be _____ to keep money in banks. (encourage)
10. The mechanic _____ waited for the owner of the car. (patient)
11. The sheep are _____ because they are hungry. (bleating)
12. Primary Six pupils wrote very good _____ about their Christmas holiday. (compose)
13. The _____ like visiting the zoos and National parks. (tour)
14. The traffic is _____ today than it was yesterday. (heavy)
15. _____ in a supermarket is quite expensive. (sheep)

In each of the questions 16 and 17, use each of the given words to show that you understand the differences in their meaning.

16. right: _____
17. write _____

In questions 18 and 19, arrange the given words in alphabetical order.

18. story, newspaper, cartoon, editor

19. traffic, traffic jam, taxi, tax

In questions 20 and 21, write the full form of the given abbreviations.

20. shs. _____ 21. I'd _____

In questions 22 and 23, re-write the sentence giving the opposite form of the underlined words.

22. Our classroom is very dirty.

23. Jaja Mugalu cannot remember when she was born.

In questions 24 and 25, give the plural form of the given words.

24. blackspot _____

25. luggage _____

In questions 26 to 28, re-write the sentence giving one word for the underlined group of words.

26. Karen drove her car without care.

27. Collins has made up his mind to work harder at his studies.

28. Hats worn on the head for protection are very expensive.

In questions 29 and 30, re-arrange the given words to form a correct sentence.

29. mechanic Did your repair car the?

30. good John a cartoonist is.



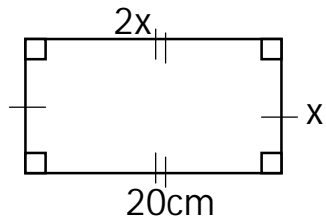
MBUYA PARENTS' SCHOOL

PRIMARY SIX HOLIDAY WORK FOR TERM 1 2020 - WEEK 5

MATHEMATICS

Name: _____ Stream: _____

1. Below is a rectangle. Use it to answer questions that follow.



- (a) Find the value of x (2 marks)

- (b) Calculate the area of the figure. (2marks)

- (c) Work out its perimeter. (2 marks)

2. Given the numeral 4678

- (a) Find the sum of the value of 6 and 8. (2marks)

- (b) Expand the number above in power form. (1 mark)

- (c) Write the numeral 4678 in words. (1 mark)

3. The sum of three consecutive even numbers is 66. Find the numbers. (3marks)

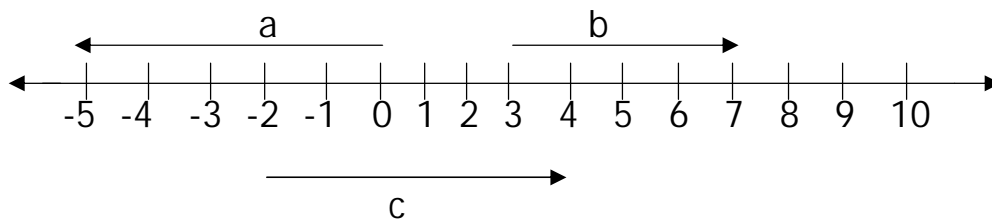
(b) Find the range of numbers

(2marks)

4. (a) Arrange the following integers in ascending order. -3, 0, 4, 2, -5 and 2

(2marks)

(b) Write the integers shown on the number line



(1 mark each)

(i)a _____ (ii) b _____ (iii) c _____

5. Mwebesa went to the market and bought the following items.

2 kg of sugar at sh. 4000 a kg

A bunch of banana at sh. 20,000

3kg of salt at sh. 2000 a kg

4 litres of milk at sh. 3000

(a) How much money did she spend altogether?

(3marks)

(b) If she had sh. 80,000. What was her balance?

(1mark)



MBUYA PARENTS' SCHOOL

PRIMARY SIX HOLIDAY WORK FOR TERM 1 2020 - WEEK 5

SCIENCE

Name: _____ Stream: _____

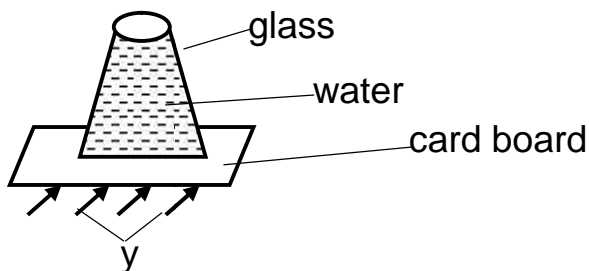
1. Name the activity done to prevent bad smell of our bodies.

2. Give one way carbon dioxide is useful to man.

3. Why should first aider give first aid to casualties?

4. State one reason why frogs and toads are referred to as vertebrates.

Study the diagram below and use it to answer the question 5.



5. What do arrows represent in the above experiment?

6. Name any one example of root tubers crop that is propagated by use of seeds.

7. How important are canine teeth to animals like dogs?

8. A farmer was seen painting metallic parts of his garden tools. Why did he do that practice?

9. Name the sense organ used for detecting sound energy in snails.

10. Give one importance of poultry.

11. State any one disadvantage of wind in the environment.

12. How do spiny ant eaters differ from other mammals in terms of reproduction?

13. Name one communicable disease that affect our eyes.

14. How do farmers living in hilly areas control soil erosion in their garden?

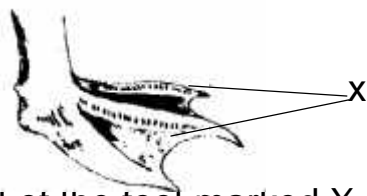
15. Give any one traditional method of measuring length.

16. Why do animals move from place to place?

17. Write one advantage of rearing local breeds of goats to exotic breeds.

18. Give the function of incisor teeth to man.

The diagram below shows a bird foot. Use it to answer question 19 and 20.



19. Name the part of the foot marked X.

20. How important is the above foot to such a bird?

21. State one advantage of keeping records on a farm.

22. Which deficiency disease is cause due to lack of proteins in diet?



MBUYA PARENTS' SCHOOL

PRIMARY SIX HOLIDAY WORK FOR TERM 1 2020 - WEEK 5

SST

Name: _____ **Stream:** _____

1. Write one founder head-of-state of East African Community.

2. Suggest one way East African Community promotes trade.

3. How do farmers care for the crops during the dry season?

4. In which one way do school children practice democracy?

5. Why is a teacher regarded as a resource?

6. Draw any one material item used by people to manage rainy weather in the space below.
7. Mention one product got from forests.

8. Name any one member of an extended family who is not found in a nuclear family. _____
9. State one way security organs are useful in Uganda.

10. Apart from political leaders, state any other type of leaders in your community.

11. Mention one example of Uganda's invisible trade export to her neighbours.

12. Give one way roads promote trade in your community.

13. Name the line of latitude that passes through Uganda and Kenya.

14. Give one way early man used to obtain food.

15. How can Mr. Mubiru a farmer improve on his local breeds of cattle?

16. Why is culture important in your society?

17. How did Dr. Albert Cook contribute towards the development of the health sector in Uganda?

18. How has farming created employment among the people of East Africa?

19. How do civil servants benefit from government revenue?

20. Give one advantage of locking doors and windows at night.

21. What is child abuse? _____

22. State one human activity that influences climate of an area.

23. Why do you think the government of Uganda has created many districts?

24. Mugisha wants to control soil erosion on his compound. What can you advise him to do? _____
25. Mention one object in school that is used to manage time.
