



MBUYA PARENTS' SCHOOL

PRIMARY FIVE HOLIDAY WORK FOR TERM 1 2020 - WEEK 5

ENGLISH

Name: _____ Stream: _____

For questions 1-5, fill in the blank spaces with a suitable words or group of words to complete.

1. It was such _____ interesting match that we all enjoyed it.
2. Neither the driver _____ the mechanic is rude.
3. We are proud _____ our school.
4. That is the woman _____ son was knocked down by a speeding car.
5. _____ you repair your vehicle in time, you will not reach the airport in time.

For questions 6-15, use the correct form of word given in brackets to complete the sentence.

6. Mary _____ a nice basket yesterday. (weave)
7. The mechanic repaired our father's car _____. (skill)
8. Of the twins, Nakato is the _____. (thin)
9. Kato fixed his bicycle _____. (he)
10. Most people play football for _____. (enjoy)
11. The bell is _____ by the timekeeper every morning. (ring)
12. If I get enough money, I will _____ to London next week. (fly)
13. It is important to be _____ when riding a bicycle. (care)
14. The bitch and _____ puppies are sleeping in the kennel. (it)
15. My _____ is to become a mechanic in future. (intend)

Re-arrange these words in alphabetical order.

16. pliers, grease, file, oil
- _____

17. editor, edit, editorial, edition
- _____

Re-write the following sentences by giving plurals of the underlined words.

18. My dad bought a new lorry.

19. Tom put the luggage in the boot of the bus.

Write the following abbreviations in full.

20. Dr. _____ 21. I'll _____

Re-write giving one word for the underlined group of words.

22. The judge for a football match was very fair.

23. Our goat gave birth to three young ones.

24. The person who repairs vehicles is my uncle.

Give opposites of the following words.

25. expensive _____ 26. arrive _____

Use the following words in sentences to show that you know a difference in their meaning.

27. leave _____

28. live _____

Re-arrange these words to form a meaningful sentence.

29. expensive That very car is.

30. is story an that What interesting!

For questions 31-50, re-write the sentences as instructed in the brackets without changing the meaning.

31. Horses are very strong. Oxen are very strong. (Re-write using.....as.....as.....)

32. Yemen is the woman. She stole Ana's money. (Join using...who.....)



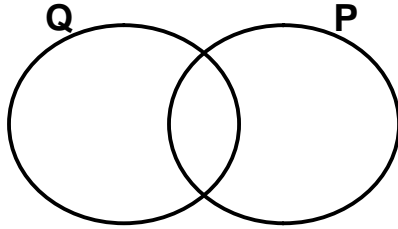
MBUYA PARENTS' SCHOOL

PRIMARY FIVE HOLIDAY WORK FOR TERM 1 2020 - WEEK 5

MATHEMATICS

Name: _____ Stream: _____

1. Given that set $P = \{0, 2, 4, 6, \}$ and $Q = \{1, 2, 3, 4, 5, 7\}$
(a) Represent the above sets on the Venn diagram below. (3 marks)



- (b) Find $n(P \cup Q)$ (2 marks)

2. In a class of 60 pupils, $\frac{3}{4}$ of them are boys and the rest are girls. (2marks)
(a) What fraction of the class are girls?

- (b) Find the number of: (2 marks each)
(i) boys (ii) girls

3. Given the digits 7, 0, 4

(a) Write the smallest and largest 3 digit numerals. (2 marks)

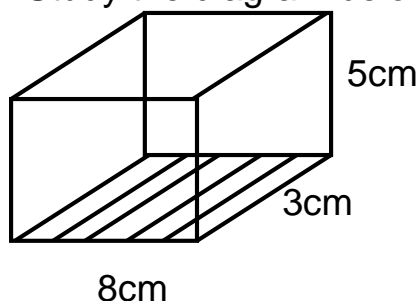
(b) Calculate the sum of the smallest and largest numeral formed in (a) above. (2 marks)

(c) Expand the smallest number formed in (a) above using place values. (2 marks)

4. In the space below, draw the following shapes. (4 marks)

| | | | |
|----------|--------------|------|-----------|
| | | | |
| Triangle | Semi- circle | Cube | Trapezium |

5. Study the diagram below and use it to answer questions that follow.



(a) How many faces has the figure above? (1 mark)

(b) Find the area of the shaded part. (2marks)

(c) Calculate its volume. (2marks)



MBUYA PARENTS' SCHOOL

PRIMARY FIVE HOLIDAY WORK FOR TERM 1 2020 - WEEK 5

SCIENCE

Name: _____ **Stream:** _____

1. Name the gas man uses to put out fire.

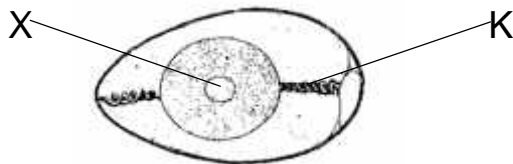
2. State the importance of banana fibres to children.

3. Mention any one element of a clean home.

4. Give any one problem of having tall bushes at school.

5. Why is clay soil suitable for modelling?

Below is an egg of a duck. Study and use it to answer questions 6 and 7.



6. What will part X develop into after hatching?

7. Which part hold the yolk in position?

8. Name the vector that spread rabies among people.

9. What name is given to objects that block light rays from the source?

10. State the importance of water to a seed during germination.

11. Give one way how crop farmers benefit from sunbirds.

12. Write down any one activity done to seedlings in a nursery bed.

13. Why do butterflies lay eggs on plant leaves?

14. How is the incisor tooth able to cut food?

15. Which deficiency disease is caused by lack of iron in the body?

16. Name the body organ responsible for the production of bile juice.

17. Give any one way how a sick boy is important at school.

18. State any one characteristic which is common to all legumes.

19. Why do people suffering from hookworms become anaemic?

Below is a diagram of a plant process. Study and use it to answer questions 20 and 21.

20. By what process is x formed?

21. What is the importance of a polythene bag on the diagram above?

22. State any one difference between a cock and a hen.



MBUYA PARENTS' SCHOOL

PRIMARY FIVE HOLIDAY WORK FOR TERM 1 2020 - WEEK 5

SST

Name: _____ **Stream:** _____

1. Name the lake that is known for salt mining in Uganda.

2. Which school symbol enables one to know the direction where the school is?

3. Write RDC in full

4. In which way does a magnetic compass simplify the work of a pilot?

5. What are resources? _____

6. Mention any one example of child abuse in Uganda.

7. State one advantage of living in nuclear family.

8. Give one way in which police maintains law and order in your district.

9. How do farmers benefit from feeder roads?

10. _____ is the sending and receiving of messages.
11. What does the following symbol show on a map?

12. State any one benefit of a community to a school?

13. Apart from political leaders, mention any one other type of leaders in Uganda.
_____14
- . Give one reason why the government of Uganda is creating more districts.

15. Name the element that gives detailed information about a map.

16. Which term is used to mean countries without seaports?

17. What does the term clan mean?

18. Write short notes about Hon. Janet Kataaha Museveni.

19. How can farmers be able to get good crop yields in their gardens?

20. Why do traffic officers wear white uniforms?

24. As a P.5 child, how can you promote peace in class?

22. In which direction is Kenya from Uganda?

23. Mention the type of rainfall that is received around L. Victoria.

24. State one reason why people in your country rarely use air transport.

25. Ofwono was facing the northern direction and he turned 45° clockwise. What was his new direction?