



MBUYA PARENTS' SCHOOL

PRIMARY FOUR HOLIDAY WORK FOR TERM 1 2020 - WEEK 5

ENGLISH

Name: _____ Stream: _____

In questions 1-7, use the correct form of the words in the brackets.

1. Musoke is _____ than Kateme. (short)
2. A friend of _____ writes very well. (me)
3. The brown girl _____ TV every day. (watch)
4. That baby _____ a lot yesterday. (cry)
5. Farmers winnow seeds during _____ weather. (wind)
6. The _____ punished us yesterday. (teach)
7. Our headteacher bought _____ chairs last week. (wood)

In questions 8-10, complete the sentences with a suitable word.

8. Both balls _____ apples are circular.
9. Mugoya comes to school _____ foot.
10. She is too weak _____ carry a jerrycan of water.

In questions 11-15, give the plural form of the underlined words.

11. Our school bought new furniture. _____
12. we saw a monkey in the zoo. _____
13. That child is crying. _____
14. Mr. smith is a strong man. _____
15. How much did you pay for the knife? _____

Use each of the words given to construct sentences to show that you know their meaning.

16. meat _____
17. meet _____

In questions 18-21, write the given short forms in full.

18. Sat _____ 19. Dec. _____

20. isn't _____ 21. won't _____

Re-write the sentences giving the opposite of the underlined words.

22. Opio is smaller than Apio.

23. Our kind uncle hates lazy people.

24. Both Kato and Wasswa are smart.

25. Of the three girls, Mary is the shortest.

In questions 26-28, re-write the sentences giving one word for the underlined group of words.

26. Our teacher found all of us talking to God while closing our eyes.

27. I will pay for the end of year function full of dancing, eating and drinking.

28. That lady sells mangoes, oranges and apples.

In questions 29-30, arrange the given words in alphabetical order.

29. tall, short, brown, polite

30. ugly, smart, thin, kind

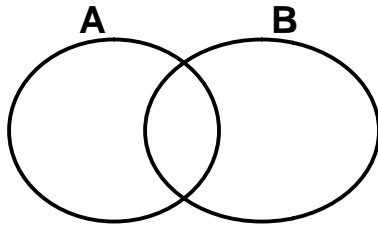


MBUYA PARENTS' SCHOOL
PRIMARY FOUR HOLIDAY WORK FOR TERM 1 2020 - WEEK 5

MATHEMATICS

Name: _____ **Stream:** _____

1. Given that set $A = \{a, b, c, d, e, f\}$ and set $B = \{a, e, i, o, u\}$
(a) Represent the above information on the Venn diagram below. (3 marks)



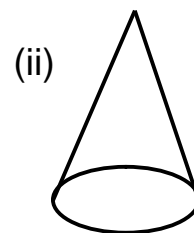
- (b) Find $n(A \cap B)$ (2 marks)
- (c) How many elements are in set $A \cup B$? (2 marks)

2. Using 4,976, complete the table below. (4 marks)

Digit	Place value	Value
9	Hundreds	_____
6	_____	6
4	Thousands	_____
7	_____	70

3. (a) Name the shapes below.





(4 marks)

- (b) Draw these shapes
(i) rhombus

(ii) rectangle

4. Complete the magic square below.

(4 marks)

7	a	5
2	4	c
b	8	1

5. Given digits 3, 5, 2

(a) Form the smallest and the biggest three digit numerals. (2 marks)

(b) Calculate the sum of the numerals formed above. (2marks)

(c) Expand the smallest numeral using place values. (2 marks)

6. Name these fractions. (2 marks each)

(a) $\frac{2}{3}$ _____

(b) $\frac{1}{4}$ _____

(c) Willy ate $\frac{2}{5}$ of a cake in the morning. What fraction did he remain with?
(2 marks)

MBUYA PARENTS' SCHOOL

PRIMARY FOUR HOLIDAY WORK FOR TERM 1 2020 - WEEK 5

SCIENCE

Name: _____ Stream: _____

1. Name the sense organ for hearing.

2. How is sand soil useful to man?

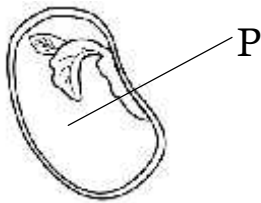
3. Mention any one item used in giving first aid.

4. Which component of air helps man to put out petrol fire?

5. How is a rake important to a crop farmer?

6. Why do houseflies lay their eggs in decaying matter?

7. Identify the part marked P on the diagram.



8. Mention any one disease spread by a housefly.

9. Give one way how you can care for your body.

10. Write down any one PIASCY message.

11. Give one reason for washing hands before eating food.

12. Write down one activity done by farmers in the dry season.

13. Write any item a P.4 child can use to keep the class clean.

14. How does a tooth brush help to promote personal hygiene.

15. Name the habitat for the termites.

16. Which vitamin is obtained from the sun?

17. What do we call the removal of top soil by its agents?

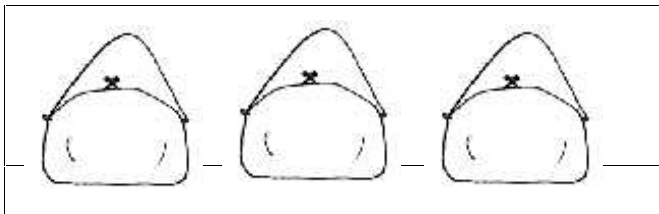
18. Name the garden tool drawn below



19. State one use of flowers to people.

20. Which sense organ does a dog use to detect its prey?

21. Name these skin products.



22. Give one difference between air and wind.

MBUYA PARENTS' SCHOOL

PRIMARY FOUR HOLIDAY WORK FOR TERM 1 2020 - WEEK 5

SST

Name: _____ Stream: _____

Name the division where your school is located.

2. Which weather element enables farmers to carry out winnowing?

3. Mention any one type of transport commonly used by people in your district.

4. How is vegetation important to carpenters?

5. Why is it important for all school going children to wear school uniforms?

6. Give the term used to mean the kinds of work done by people to earn a living.

7. Mention any one crop that is commonly grown in swamps.

8. How is a compass useful to a sailor on Lake Victoria?

9. In the space below, draw a map symbol of a waterfall.



10. Why is AldinaVisram still remembered in Uganda's history?

11. Mention any one important place in your district.

12. How is a bank important to a community?

13. Give the meaning of the term vegetation.

14. Name any one tribe in Uganda that practices male circumcision.

15. How does the police help people in our district to promote peace?

-
16. Name any one physical feature where fishing is carried out.
-
17. Why do some parents fail to provide basic needs to their children?
-
18. Mention any one importance of class rules and regulations.
-
19. How are Nimbus clouds important to crop farmers?
-
20. Write KCCA in full.
-
21. At what point on road are pedestrians encouraged to cross a busy road?
-
22. Give any one advantage of living near a hospital in an area.
-
23. In which direction does the sun set?
-
24. State any one reason why people cut down trees.
-
25. In the space provided below, draw and name any one tool used for keeping peace and security.
-
-
26. When do school children need school vans?
-
27. Name the major line of latitude marked 0° on the globe.
-