



# MBUYA PARENTS' SCHOOL

## PRIMARY THREE HOLIDAY WORK FOR TERM 1 2020 - WEEK 5

### ENGLISH

Name: \_\_\_\_\_ Stream: \_\_\_\_\_

#### Re-arrange these letters to make a correct word

1. vellay \_\_\_\_\_
2. thermo \_\_\_\_\_
3. choosl \_\_\_\_\_
4. revir \_\_\_\_\_
5. gerdan \_\_\_\_\_

#### Fill in the blank space with a correct form of the words given in brackets.

6. The teacher-on-duty \_\_\_\_\_ the late comers yesterday. (punish)
7. The snail moved \_\_\_\_\_ from its shell. (slow)
8. Kato is \_\_\_\_\_ than Wasswa. (tall)
9. The boy lost all his \_\_\_\_\_. (tooth)
10. Cissy washed \_\_\_\_\_ clothes in the evening. (she)
11. Peter \_\_\_\_\_ to church every Sunday. (go)
12. Daddy's cow gave birth to two \_\_\_\_\_. (calf)
13. Sarah is \_\_\_\_\_ for milk. (cry)
14. Okoth is the \_\_\_\_\_ man in the village. (smart)
15. This pen is \_\_\_\_\_. (my)

#### Arrange the words in ABC order.

16. book      cat      apple      green
- 

17. pen      pencil      post      pole
- 

18. cow      sheep      pig      lion
- 

#### Fill in 'a' 'an' or 'the' in the gaps.

19. My father bought \_\_\_\_\_ apple.
20. Kampala is \_\_\_\_\_ capital city of Uganda.

21. \_\_\_\_\_ cow is grazing in the field.

**Form correct sentences using the words.**

22. week: \_\_\_\_\_

23. weak: \_\_\_\_\_

**Write in full.**

24. sch \_\_\_\_\_

25. Dr. \_\_\_\_\_

26. Mon. \_\_\_\_\_

**Re-write the sentence using one word for underlined group of words.**

27. Kato borrowed a book from the place where books are kept.

\_\_\_\_\_

28. The patient spent a period of seven days in the hospital.

\_\_\_\_\_

29. My uncle is a person who teaches pupils.

\_\_\_\_\_

**Complete the sentences with a suitable word.**

30. Kapere is suffering \_\_\_\_\_ malaria.

31. Both Kamese \_\_\_\_\_ Kappa are brown.

32. She comes to school \_\_\_\_\_ car.

**Give the plural of the words below.**

33. monkey \_\_\_\_\_

34. leaf \_\_\_\_\_

35. goose \_\_\_\_\_

**Arrange the words to make correct sentences.**

36. is She bag a carrying.

\_\_\_\_\_

37. Kampala go I to everyday.

\_\_\_\_\_

38. see you a mad dog Did?

\_\_\_\_\_

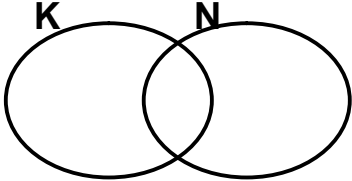
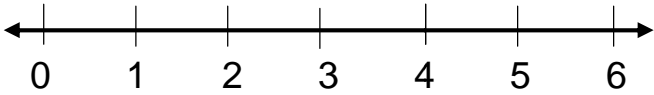



# MBUYA PARENTS' SCHOOL

## PRIMARY THREE HOLIDAY WORK FOR TERM 1 2020 - WEEK 5

### MATHEMATICS

Name: \_\_\_\_\_ Stream: \_\_\_\_\_

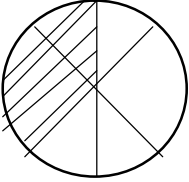
1. Add: $\begin{array}{r} 23 \\ + 15 \\ \hline \end{array}$	2. Name the set symbol below. $\{ \}$ _____
3. Expand 347 using values.	4. Shade $K \cap N$ in the diagram below. 
5. Share 12 apples among 3 children	6. Subtract $4 - 2$ using a number line 
7. What number is shown below? 	8. Write the place value of 2 in 236
9. Draw a semi-circle in the space below.	10. Joan has 527 sweets John has 152 sweets. How many sweets do they have altogether?

11. Find the value of 6 tens.

12.

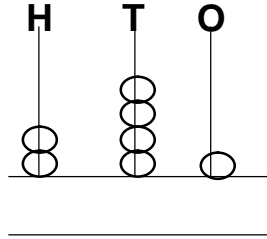
Work out:  $\frac{3}{6} + \frac{2}{6} = \underline{\quad}$

13. Write the unshaded fraction.

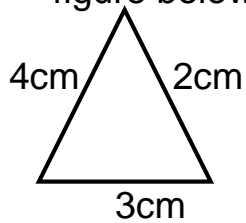


14.

Complete the abacus.



15. Find the perimeter of the figure below.



16.

What number comes after 10?

17. Find the next number in the sequence: 0, 2, 4, \_\_\_\_\_, 8

18.

Draw a symbol of a union sets

19. Multiply: 
$$\begin{array}{r} 24 \\ \times 2 \\ \hline \end{array}$$

20.

Write 367 in words.



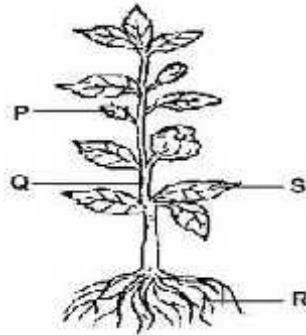
# MBUYA PARENTS' SCHOOL

## PRIMARY THREE HOLIDAY WORK FOR TERM 1 2020 - WEEK 5

### SCIENCE

Name: \_\_\_\_\_ Stream: \_\_\_\_\_

1. Study the diagram below and answer questions.



a) Name the parts marked

i) P \_\_\_\_\_ ii) R \_\_\_\_\_

ii) Q \_\_\_\_\_

b) How is part S useful to a plant?

2. Match correctly.

**A**

Housefly

Mosquito

Tsetsefly

Watersnail

i) Housefly

ii) Mosquito

iii) Tsetsefly

iv) Water snail

**B**

bilharziasis

sleeping sickness

trachoma

malaria


\_\_\_\_\_

\_\_\_\_\_

\_\_\_\_\_

\_\_\_\_\_

3. a) Draw and name any one item used in rainy weather.



\_\_\_\_\_

b) Apart from rainy weather, mention any other two types of weather.

i) \_\_\_\_\_ ii) \_\_\_\_\_

c) Identify any one activity done in sunny weather.

\_\_\_\_\_

**4.** a) What are domestic animals?

\_\_\_\_\_

\_\_\_\_\_

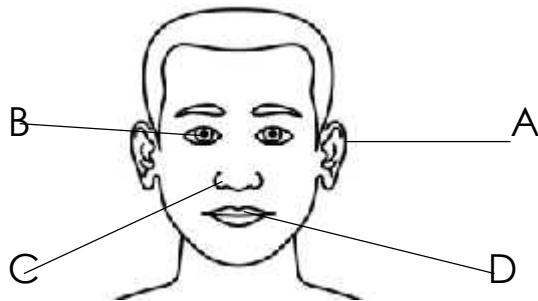
b) List any two examples of domestic animals.

i) \_\_\_\_\_ ii) \_\_\_\_\_

c) Why do people keep domestic animals?

\_\_\_\_\_

**5. The diagram below is a head of a person. Use it to answer questions.**



a) Name the parts

i) A \_\_\_\_\_ ii) B \_\_\_\_\_

b) Give the uses of parts.

i) C \_\_\_\_\_

ii) D \_\_\_\_\_

**6.** a) What are germs?

\_\_\_\_\_

\_\_\_\_\_

b) Apart from bacteria, give any other two types of germs.

i) \_\_\_\_\_ ii) \_\_\_\_\_

c) Write one of the 4Fs.

\_\_\_\_\_



# MBUYA PARENTS' SCHOOL

## PRIMARY THREE HOLIDAY WORK FOR TERM 1 2020 - WEEK 5

### R.E

**Name:** \_\_\_\_\_ **Stream:** \_\_\_\_\_

For questions 1-6, answer either Christianity or Islamic but not both on the same number.

1. Either:

(a) \_\_\_\_\_ are acceptable behavior in a society.

(b) State any two Christian customs in our community.

(i) \_\_\_\_\_

(ii) \_\_\_\_\_

(c) How can we promote peace in a school?

Or: (a) \_\_\_\_\_ are acceptable behaviour in the society.

(b) Mention any two customs in our community.

(i) \_\_\_\_\_

(ii) \_\_\_\_\_

(c) How can we promote peace in a school?

2. Either: (a) Mention any four Christian names for girls.

(i) \_\_\_\_\_ (ii) \_\_\_\_\_

(iii) \_\_\_\_\_ (iv) \_\_\_\_\_

Or: Write down any four Islamic names for boys.

(i) \_\_\_\_\_ (ii) \_\_\_\_\_

(iii) \_\_\_\_\_ (iv) \_\_\_\_\_

3. Either: (a) In which garden did Adam and Eve live?

(b) Name the earthly parents of Jesus.

(i) \_\_\_\_\_ (ii) \_\_\_\_\_

(c) Who created heaven and earth?

Or: In which garden did Adam and Eve like?

(b) Who created Heaven and earth?

(c) Give two reasons why God created man?

(i) \_\_\_\_\_

(ii) \_\_\_\_\_

4. Either: (a) Name any two local names of God.

(i) \_\_\_\_\_ (ii) \_\_\_\_\_

(b) What do the following names mean?

(a) Peter? \_\_\_\_\_

(b) Emmanuel? \_\_\_\_\_

Or: (a) Name any two local names of Allah.

(i) \_\_\_\_\_ (ii) \_\_\_\_\_

(b) Mention the roles played by the following people in the mosque:

(i) Muazin \_\_\_\_\_

(ii) Imam \_\_\_\_\_

5. Either: (a) How many disciples did Jesus Christ have?

\_\_\_\_\_

(b) Name any two disciples of Jesus.

(i) \_\_\_\_\_ (ii) \_\_\_\_\_

(b) How many times did Simon Peter deny Jesus?

\_\_\_\_\_

Or: (a) How many times do Muslims pray in a day?

\_\_\_\_\_

(b) What should a true Muslim do after sinning?

\_\_\_\_\_

(c) Give two reasons why Muslims go to the mosque?

(i) \_\_\_\_\_

(ii) \_\_\_\_\_

6. Both: Draw and name any four things created by God.
