



**MBUYA PARENTS' SCHOOL**  
**PRIMARY TWO HOLIDAY WORK FOR TERM 1 2020 - WEEK 5**

**ENGLISH**

Name: \_\_\_\_\_ Stream: \_\_\_\_\_

1. **Fill in the missing letters.**

fl\_g

r\_\_d




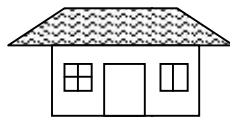
a\_\_them

b\_\_dge

v\_\_llage


m\_\_dicine


2. **Name these objects.**


			


3. **Fill in the correct preposition.**

a)  The flower is \_\_\_\_\_ the flower vase.

b)  The stone is \_\_\_\_\_ the chair.

c)  The tree is \_\_\_\_\_ of the house.

d)  The birds are flying \_\_\_\_\_ the hills.

e)  The car is \_\_\_\_\_ the tree.

4. **Read the story and answer questions about it in full sentences.**

**REX'S NEW DOG**

Rex got a new dog. He loves to play with his dog. Sometimes, Rex takes his dog to the park. They run, jump and chase each other. Rex throws a ball for his dog. Rex has fun with his new dog.

## Questions

a) What did Rex get?

---

b) What does Rex love to do?

---

c) Where does Rex take his dog?

---

d) Does he love to play with his dog?

---

e) Write the heading of the story.

---

5. **Arrange the jumbled story below to make a correct sentence.**

a) I say my prayers.

b) When I wake up in the morning.

c) I wear my uniform.

d) I have a bath and take my breakfast.

e) And my mother takes me to school.

**Correct story**

---

---

---

---

---

---

---



**MBUYA PARENTS' SCHOOL**  
**PRIMARY TWO HOLIDAY WORK FOR TERM 1 2020 - WEEK 5**

**LITERACY A**

**Name:** \_\_\_\_\_ **Stream:** \_\_\_\_\_

1. What is the use of a pencil?

\_\_\_\_\_

2. In which division is Mbuya Parents' School?

\_\_\_\_\_

3. Why do we need a duster in class?

\_\_\_\_\_

4. \_\_\_\_\_ are things man cannot live without.

**(Needs, Basic needs)**

5. Write one activity done at home.

\_\_\_\_\_

6. Name one person who helps you to cross the road.

\_\_\_\_\_

7. \_\_\_\_\_ is to goat as piglet is to pig.

8. Why do people stand at attention when singing the National Anthem?

\_\_\_\_\_

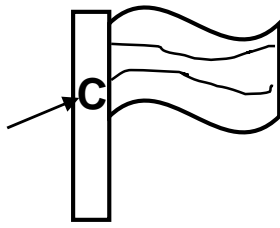
9. Name the classroom object used to clean a chalkboard.

\_\_\_\_\_

10. What name is given to a person who grows crops and keeps animals?

\_\_\_\_\_

11. Name the part marked C on the diagram below.



\_\_\_\_\_

12. Name one need of man.

\_\_\_\_\_

13. Write the name of your classteacher.

\_\_\_\_\_

14. What do chicken provide us with?

\_\_\_\_\_

15. How useful is a doctor in a hospital?

\_\_\_\_\_

16. Identify one plant found in your school compound.

\_\_\_\_\_

17. Why do policemen wear uniforms?

\_\_\_\_\_

18. Write any one feature found on a school badge.

\_\_\_\_\_

19. Mention any two schools neighbouring our school.

i) \_\_\_\_\_ ii) \_\_\_\_\_

20. **Match correctly.**

Father                      sweeping the compound

Sister                      heading the family

Mother                      caring for children



# MBUYA PARENTS' SCHOOL

## PRIMARY TWO HOLIDAY WORK FOR TERM 1 2020 - WEEK 5

### LITERACY B

Name: \_\_\_\_\_ Stream: \_\_\_\_\_

1. Why is it dangerous to play with a knife?

\_\_\_\_\_

2. Give the importance of this body organ.



\_\_\_\_\_

3. State one way of keeping toilet clean.

\_\_\_\_\_

4. Name the insect that provides man with honey.

\_\_\_\_\_

5. Mention one plant that gives us fruits.

\_\_\_\_\_

6. State one source of water.

\_\_\_\_\_

7. Write **true** or **false**.

a) A dog has four legs \_\_\_\_\_

b) We eat food to die \_\_\_\_\_

c) A tree is a living thing \_\_\_\_\_

d) My hair is black in colour \_\_\_\_\_

e) A person has two senses \_\_\_\_\_

8. a) \_\_\_\_\_ animals are animals kept at home.

b) Identify two animals used for transport.

i) \_\_\_\_\_ ii) \_\_\_\_\_

c) Which animals give us milk at home?

i) \_\_\_\_\_ ii) \_\_\_\_\_

9. a) **Draw these items used to keep the body clean.**

<b>water</b>	<b>sponge</b>	<b>soap</b>	<b>tooth brush</b>

b) Why is it good for a P.2 child to iron clothes?

\_\_\_\_\_

10. a) What is food?

\_\_\_\_\_

\_\_\_\_\_

b) List down three examples of food eaten at home.

i) \_\_\_\_\_ ii) \_\_\_\_\_

iii) \_\_\_\_\_

c) Why do we eat food?

\_\_\_\_\_

11. Which accident is caused by the following?

i) fire \_\_\_\_\_

ii) dog \_\_\_\_\_

iii) knife \_\_\_\_\_

b) Mention any two things used to give first aid.

i) \_\_\_\_\_ ii) \_\_\_\_\_



# MBUYA PARENTS' SCHOOL

## PRIMARY TWO HOLIDAY WORK FOR TERM 1 2020 - WEEK 5

### MATHEMATICS

Name: \_\_\_\_\_ Stream: \_\_\_\_\_

#### 1. Match names to their set symbols.

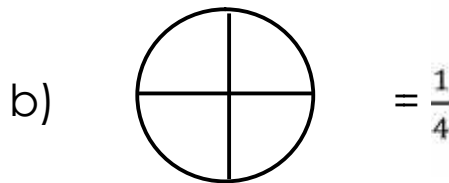
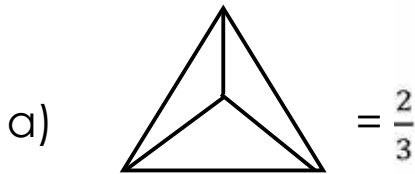
Union set  $\subseteq$

Sub set  $\cap$

Intersection set  $\emptyset$

Empty set  $\cup$

#### 2. Shade for the fractions.



#### 3. Draw these shapes.

cone	circle	oval

#### 4. Work out:

a) Two plus six gives \_\_\_\_\_

b) Subtract 2 from 4 \_\_\_\_\_

c) 10 take away 5 equals \_\_\_\_\_

**5. Fill in tens and ones.**

a)  $14 = \underline{\quad}$  tens +  $\underline{\quad}$  ones

b)  $2\text{tens} + 30\text{nes} = \square$

c)  $\underline{\quad}$  tens +  $\underline{\quad}$  ones = 35

**6. Write the number after.**

a) 2, \_\_\_\_\_

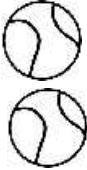
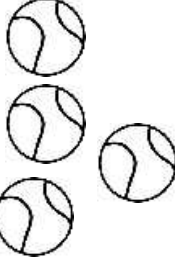
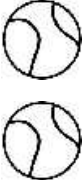
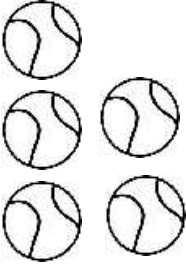

b) nine, \_\_\_\_\_

**c). Show the time on the clock face.**



It is 2 o'clock

**7. Study the graph and answer questions that follow.**

				
Dorah	Jackie	Jane	Paul	John

a) Who has few balls?

\_\_\_\_\_

b) How many balls does Dorah and Jane have?

\_\_\_\_\_

c) \_\_\_\_\_ has fives balls.

d) How many balls does Jackie have?

\_\_\_\_\_

e) How many balls do they have altogether?

\_\_\_\_\_