



MBUYA PARENTS' SCHOOL

PRIMARY THREE HOLIDAY WORK FOR TERM 1 2020 - WEEK 4

LITERACY II

Name: _____ **Stream:** _____

THEME: OUR SUB-COUNTY/DIVISION

1. In which sub-county is your home found?

2. What is a map?

3. What is the use of a title on a map?

4. What are map symbols?

5. Name any three elements of a good map.

i) _____

ii) _____

iii) _____

6. What helps a map reader to tell the actual ground distance on a map?

7. Mention any two groups of people who use compasses in their daily work.

i. _____

ii. _____

8. Name the largest tribe in your sub-county.

9. Mention any one human activity carried out on lakes and rivers.

10. What are physical features?

11. What is a clan?

12. To which clan do you belong?

13. Who was the first Muganda?

14. Who was the wife of Kintu?

15. Why did Gulu refuse Kintu to marry Nambi at first?

16. Name the two brothers of Nambi.

i) _____

ii) _____

17. What is a legend?

18. State any two examples of legends.

i) _____

ii) _____

19. Write D.E.O in full.

20. Who is responsible over Education games and sports in Uganda?



MBUYA PARENTS' SCHOOL

PRIMARY THREE HOLIDAY WORK FOR TERM 1 2020 - WEEK 4

ENGLISH

Name: _____ Stream: _____

1. Make five correct sentences from the table.

Derrick		games and sports
Our teacher	likes	eating cakes and pans
My friend	doesn't like	watering the crops
She		playing in class
he		eating cassava

53a) Arrange these sentences to form a correct story.

- a) I put it on the wire
- b) I went to the tap and got water.
- c) One day, I was running and fell down.
- d) I washed it.
- e) My shirt got dirty.

53b) Arrange to form a good story.

- a) The first one is January
- b) There are twelve months in a year
- c) It is followed by February.
- d) This month has twenty eight days
- e) The third month is March

54a) Match animals with their young ones.

dog	baby
pig	kitten
cow	piglet
cat	calf
man	puppy

b) Match words with their opposites

good	grandmother
grandfather	useless
useful	unhappy
happy	bad
young	old

55. Use the words in the table below to complete the story below.

happy, sick, do, teachers, goes, exams, marks,
three, his, greets

Musoke_____to school everyday. He_____his teachers whenever he arrives. All his_____like him because he is well behaved. Last week, he did_____and got good_____in English. Both Musoke and_____friend Michael are in primary_____

Micheal did not_____exams because he was_____. Musoke is very_____that all teachers love him.



MBUYA PARENTS' SCHOOL

PRIMARY THREE HOLIDAY WORK FOR TERM 1 2020 - WEEK 4

LITERACY I

Name: _____ Stream: _____

THEME: ENVIRONMENT AND WEATHER

1. Write down one danger of the sun.

b) Suggest any three uses of the sun.

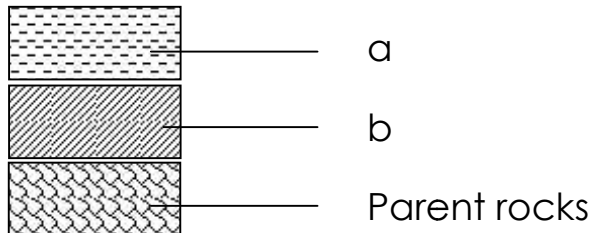
i. _____

ii. _____

iii. _____

2a) Define soil profile.

b) Name the layers of soil below.



c) Explain the term soil texture.

3a) Apart from rain, name any other two sources of water.

i. _____

ii. _____

b) Give two uses of water.

i. _____

ii. _____

4a) What are ceramics?

b) State any two things made out of clay.

- i. _____
- ii. _____

c) Which type of soil is good for making ceramics?

5a) What is soil erosion?

b) Name any two agents of soil erosion.

- i. _____
- ii. _____

c) Write down one type of soil erosion.

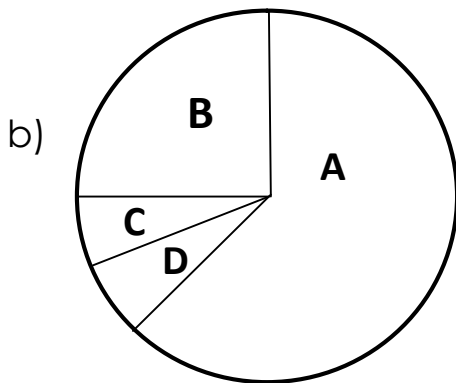
6a) What is weather?

b) Name any two instruments of weather.

- i. _____
- ii. _____

c) List down one element of weather.

7a) What is the main natural source of water?



Name the parts of air marked.

- A _____ 78%
- B _____ 21%
- C _____ 0.07%
- D _____ 0.03%





MBUYA PARENTS' SCHOOL

PRIMARY THREE HOLIDAY WORK FOR TERM 1 2020 - WEEK 4

MATHEMATICS

Name: _____ Stream: _____

1	Work out: (i) $\frac{3}{7} + \frac{1}{7} + \frac{2}{7} =$ (ii) $\frac{5}{6} - \frac{4}{6}$
2	Complete these sets. X  Y  Set Y has _____ members. Set X has _____ members. Use less or more . Set X has _____ members than Set Y. Set Y has _____ members than Set X.
3	(i) _____ is the first day of the week. (ii) If today is Monday 1 st May, 2017. Write the date for Friday next week.

(iii) Write two days of the week that start with letter "S".

a) _____

b) _____

4 Write in expanded form.

(i) 1 2 3 4

(ii) Which number has been expanded?

$$300 + 60 + 3$$

5 Write these number names in figures.

(i) Thirteen

(ii) One hundred eleven.

(iii) Nine thousand nine hundred ninety nine.

6 **Work out:**

(i) $14 \div 2 = \underline{\quad}$

(ii) 3 4 9 litres

+ 1 6 4 litres

(iii) 8 4 5 6

- 1 3 2 7

7 a. Use **heavier** or **lighter**.



Balloon K is _____ than balloon W.

Balloon W is _____ than balloon K.