



**MBUYA PARENTS' SCHOOL**

**P.3 HOLIDAY PACKAGE TERM ONE 2020 WEEK 3**

**NAME** .....**STREAM** .....

**LITERACY II:**

**THEME: LIVELIHOOD IN OUR SUB-COUNTY/DIVISION**

1. What is a post office?

.....

2. Give any two importance of a post office.

i).....

ii).....

3. What is a bank?

.....

4. Mention any four importances of a bank.

i).....

ii).....

iii).....

iv).....

5. List any five examples of banks in your sub-county.

i).....ii).....

iii).....iv).....

v).....

6. Name any three petrol stations you know.

i).....

ii).....

iii).....

7. Mention any two examples of wild animals.

i).....ii).....

8. Give one word to mean a group of trees growing together.

.....

9. What is the main source of light?

.....

10. State two materials used for building temporary houses.

i).....ii).....

11. What are cash crops?

.....

12. Name any four human activities done around physical features in you sub-county.

i).....ii).....

iii).....iv).....

13. What is an extended family?

.....

14. Mention any four members found in an extended family.

i).....ii).....

iii).....iv).....

15. Write any two cultural practices.

i).....ii).....

16. Which means of transport do you use when coming to school?

.....

17. Name two things we find in our kitchen at home.

i).....ii).....

18. Give the role of a father in a home.

.....

19. Write two things which uses electricity at home.

i).....ii).....

**P.3 HOLIDAY PACKAGE TERM ONE 2020 WEEK 3**

**NAME** ..... **STREAM** .....

ENGLISH

Re-write as instructed in the brackets.

1. Jill is the boy. He stole my money. (use.....who.....)  
.....
2. Ann is eating mango. She bought it from the market. (use.....which.....)  
.....
3. Here is the man. His leg was broken. (use.....whose.....)  
.....
4. This is the village. The chief stays here. (use.....where.....)  
.....
5. I did not come to school. Mummy was not at home. (use.....because.....)  
.....
6. John is a tall boy. Amos is a tall boy. (Begin: Both.....)  
.....
7. A duck lays eggs. A turkey lays eggs. (use.....and.....)  
.....
8. Get the duster. Clean the blackboard. (use.....and.....)  
.....
9. These are chairs. (Begin: This.....)  
.....
10. She told me a story. It was interesting. (Join using.....which.....)  
.....
11. I met a boy. He was wearing a sweater. (Join using.....who.....)  
.....
12. I know the market. My uncle works there. (Join using.....where.....)  
.....
13. I met a man. His son is a doctor. (Join using.....whose.....)  
.....
14. I went to the market. I wanted to buy food. (Join using.....because.....)  
.....
15. Sit down. Do the work. (Join using.....and.....)  
.....

16. John is a smart boy. Amos is a smart boy. (Begin: Both.....and.....)

17. I don't want milk. I want soda. (Join using.....but.....)

18. Empty tins..... (Complete the proverb)

19. Two heads are..... (Complete the proverb)

20. As white as..... (Complete the proverb)

21. Read the following story and answer questions about it in full sentences.

Mukama and Kusiima are brothers. Mukasa is a small and weak boy. Kusiima is a healthy boy. Kusiima likes doing exercises and goes for games every day.

He likes eating fruits because they have vitamins. The vitamins keep him healthy and strong. Mukama is very weak. He doesn't like doing exercises. He doesn't like eating fruits but he likes eating cakes because they are sweet. Mukama needs vitamins to become healthy and strong.

Questions

a) Who are brothers?

b) Who likes doing exercises?

c) Who does not like fruits but likes cakes?

d) Why does Mukama need Vitamins?

c) What is the story about?

d) Write the heading of the story.

e) Write the opposite of these words.

i) Small.....

ii) Big.....

f) Write the singular form of brothers.

**P.3 HOLIDAY PACKAGE TERM ONE 2020 WEEK 3**

**NAME** ..... **STREAM** .....

**LITERACY I:**

**SUB THEME: AIR AND SUN**

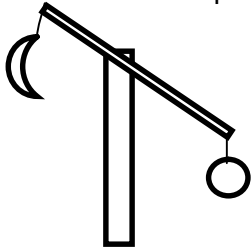
1. Give the difference between air and wind.

.....

2. State one example of rare gases.

.....

3. Name the property of air below.



.....

4. Which property of air is used when a doctor is injecting medicine in your buttock?

.....

5. In the space below, draw a diagram to show rain weather.

6. Name the two conditions necessary for rusting to take place.

i).....

ii).....

7. Give one danger of rusting.

.....

8. Where will the shadow of a man be when the sun is in the west?

.....

9. What do we call the dark clouds that bring rainfall?

.....  
10. Name the instrument used to measure rainfall.

.....  
11. Name the basic need got from rain.

.....  
12. Give any one property of water.

.....  
13. Mention any one way water sources are made dirty.

.....  
14. State one artificial source of water.

.....  
15. Why is it not good to look into the dun directly?

.....  
16. Name one type of germs.

.....  
17. Name the type of weather that dries our crops.

.....  
18. What is weather?

.....  
19. Which type of soil is a mixture of sand, clay and humus?

.....  
20. Which type of clouds is a clear sign of rain?

.....  
21. Give one advantage of clouds.

.....  
22. Name the cloud that is furthest in the sky.

.....  
23. Which clouds are a sign of fair weather?

.....  
24. What is the main natural source of water?

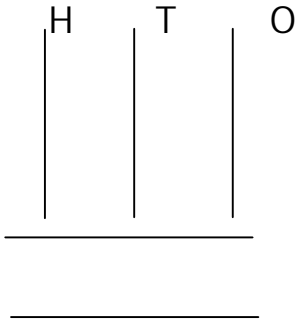
.....

P.3 HOLIDAY PACKAGE TERM ONE 2020 WEEK 3

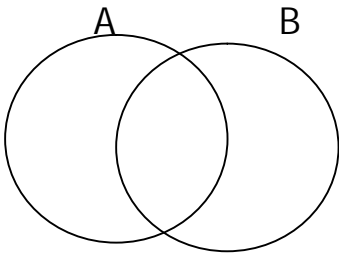
NAME .....STREAM .....

MATHS:

1. Show 267 on the abacus below.



2. Shade set A



THEME: OUR ENVIRONMENT IN OUR SUB-COUNTY

3. Given that  $A = \{2, 3, 4, 5\}$   $B = \{3, 5, 6\}$

a) Find  $A \cap B = \{ \quad \quad \quad \}$

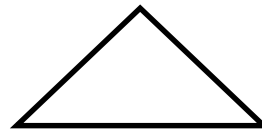
b) Find  $A \cup B = \{ \quad \quad \quad \}$

4. If  $a = 4$ ,  $b = 6$  and  $c = 2$ .

a) Find the value of  $a + b + c$


b)  $b - c$

c) Name the following shapes.



\_\_\_\_\_

\_\_\_\_\_



\_\_\_\_\_

5. Add:  $\begin{array}{r} 3 \quad 4 \end{array}$

$\begin{array}{r} +6 \quad 3 \\ \hline \end{array}$

\_\_\_\_\_

b) Multiply: 1 2 0

x 2

\_\_\_\_\_

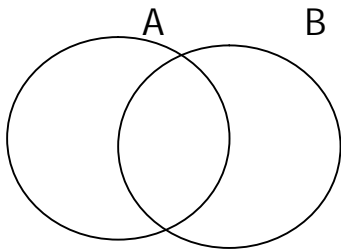
c) Divide:  $9 \div 3 =$

7. Express 25 in roman numerals.

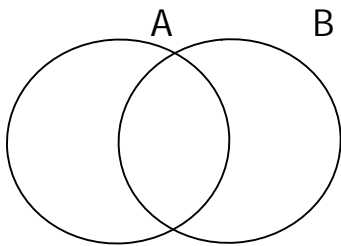
b) Change XX in hindu Arabic numerals.

6. Shade the given regions.

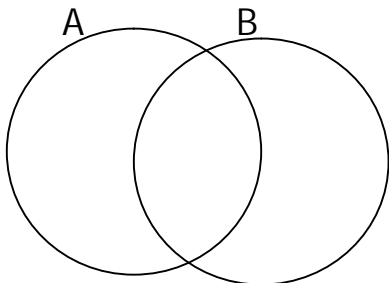
a)  $A \cap B$



b)  $A \cup B$



c) Set B



c) Write 177 in words.

8. Show the following on the abacus.

a) 36

b) 452

THEME: ENVIRONMENT AND WEATHER IN OUR SUB-COUNTY

c) 834