



# MBUYA PARENTS' SCHOOL

## P.7 HOLIDAY PACKAGE WEEK III

### ENGLISH

NAME: \_\_\_\_\_ STREAM \_\_\_\_\_

***In each of the questions 1 - 20, rewrite the sentences as instructed in brackets.***

1. Soil erosion on the increase. We need to plant more trees. (Use.....because.....)

\_\_\_\_\_

2. Agnes was a clever girl. Abigail was a clever girl. (Use.....as well as.....)

\_\_\_\_\_

3. The baptism certificates are not ready. The marriage certificates are not ready. (Begin: Neither.....nor.....)

\_\_\_\_\_

\_\_\_\_\_

4. Primary Seven Candidates will sit for P.L.E in November. (Use..looking forward...)

\_\_\_\_\_

\_\_\_\_\_

5. We didn't have enough money but we bought whatever we needed.

(Begin: Despite.....)

\_\_\_\_\_

\_\_\_\_\_

6. If you drive your car carefully, you will not cause any accident.

(Use.....would have.....)

\_\_\_\_\_

\_\_\_\_\_

7. They will reach church by 2:00pm. (Use.....arrive.....)

\_\_\_\_\_

8. Immediately the groom arrived, the wedding ceremony began.  
(Begin: No sooner.....)
- 
9. The teacher came to school early. He wanted to mark books. (Use.....so that.....)
- 
10. We intend to buy a new house next year. (Begin: Our.....)
- 
11. It was not necessary for you to come late. (Use.....needn't.....)
- 
12. The Umpire is addressing the netball players. (Begin: The netball players.....)
- 
13. Halima liked knitting more than weaving. (Use.....prefer.....)
- 
14. You should be carefully with whatever you say. (Begin: One.....)
- 
15. Our house consists of four rooms. (Use.....comprises.....)
- 
16. My brother has not posted any letter, .....?  
(Re-write and supply a question tag)
- 
17. "Mutoni will visit Kasese tomorrow," said Mugisha. (Begin: Mugisha said that....)
- 
18. Isabirye borrowed a pen from Okullo. (Use.....lend.....)
- 
19. None of the teachers was absent. (Begin: All.....)
- 
20. Wanono is wearing a shirt. It is expensive. It is white. It is big. It is made from China. (Re-write as one sentence without using "which" or "and")
- 
-



## P.7 HOLIDAY PACKAGE TERM ONE 2020 WEEK 3

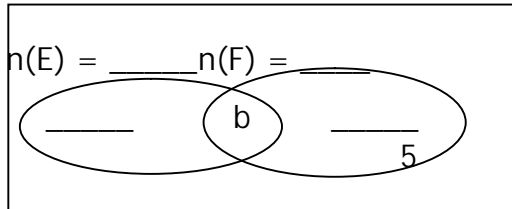
**NAME** ..... **STREAM** .....

### MATHS

1. In a camp of 45 people, 30 speak English (E), 25 speak French (F), some speak both languages (b) and 5 do not speak either of the two languages.

(a) Represent the above information on the Venn diagram. (2 marks)

$$n(\xi) = 45$$



(b) How many people can speak both languages? (2 marks)

(c) Find the probability of choosing a person who can speak French only. (2 marks)

2(a) Simplify:  $\frac{0.28 \times 0.08}{0.14 \times 0.4}$  (2 marks)

(b) Work out:  $1\frac{2}{5} \times 1\frac{1}{2} \div 3\frac{1}{2}$  (2 marks)

3. The table below shows marks of pupils in Mathematics test in P.7. Study it carefully and use it to answer questions that follow.

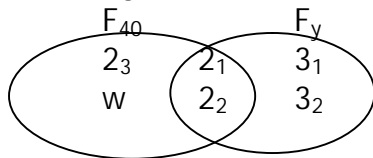
|               |    |    |    |    |    |
|---------------|----|----|----|----|----|
| Marks         | 30 | 55 | 40 | 90 | 75 |
| No. of pupils | 2  | 2  | 3  | 1  | 2  |

(a) How many pupils did the test? (1 marks)

(b) What was the median score? (2 marks)

(c) Calculate the mean mark. (2 marks)

4. Study the Venn diagram below and use it to answer questions that follow:



(a) Find the value of: (1 marks @)

(i)  $w$ ? (ii)  $y$ ?

(b) What is the G.C.F of  $y$  and 40? (1 mark)

(c) Calculate the L.C.M of 40 and  $y$ . (2 marks)



**P.7 HOLIDAY PACKAGE TERM ONE 2020 WEEK 3**

**NAME** ..... **STREAM** .....

**SST**

1a) How are industries important in a country?

.....

b) Give two factors that promote industrial expansion in Africa.

i).....

ii).....

c) What are secondary industries?

.....

2a) What are secondary industries?

.....

.....

b) Write down factors that promote irrigation farming on the Gezira irrigation scheme.

.....

c) Write down two factors that promote irrigation farming on the Gezira irrigation scheme.

i).....

ii).....

3a) What is a national game park?

.....

.....

b) State two importances of national game parks.

i).....

ii).....

c) Identify the major tourist attraction of Kidepo valley national Game Park.

.....

4a) How is transport different from communication?

.....

b) In which two ways do transport and communication promote development in a country?

i).....

ii).....

c) Why are most rivers in Africa not navigable?

.....

5a) Give one cause of each of the following rebellions:

i) Mau-mau.....

.....

ii) Maji-maji.....

.....

b) State one effect of each of the above rebellions.

.....

6a) Why is agriculture an important economic activity of Uganda?

.....

b) State factors that promote agricultural development in Uganda.

i).....

ii).....

c) Identify one problem that affects farmers in East Africa.

.....

7a) Give the meaning of the term mining.

.....

b) State the minerals that are mined in the following area.

i) Shinyanga near Mwadui.

.....

ii) Kimberly South Africa.

.....

iii) Witwatersrand

.....

8a) What are multipurpose river projects?

.....

b) List down two multipurpose river projects in Africa.

i).....

ii).....

c) Mention one natural factor that is considered before a multipurpose river project is set up.

.....

9a) What is population distribution?

.....

b) Write down two factors that influence population distribution in a given area.

i).....

ii).....

c) What method does the government use to know it's population?

.....

10a) Give the meaning of an election.

.....

b) What are traditional cash crops?

.....

c) What are some of the types of election (give two)

i).....

ii).....

11a) What is irrigation farming?

.....

.....



**P.7 HOLIDAY PACKAGE TERM ONE 2020 WEEK 3**

**NAME** ..... **STREAM** .....

**SCIENCE**

1a) List down any two ways in which friction can be a nuisance to people.

i).....

ii).....

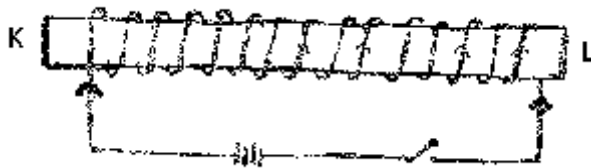
b) What is the importance of having threads on tyres of vehicles?

.....

c) Why are planes, fish and birds streamlined?

.....

2. The diagram below shows one of the methods of magnetization.



a) Identify the method of magnetization shown above.

.....

b) What name is given to the magnets obtained Using the above method?

.....

c) Besides the above method, name two other methods of magnetization.

.....

3a) Write down two functions of the brain in a P.7 candidate.

i).....

ii).....

b) Identify two blood cells made from the bone marrow.

i).....

ii).....

44a) Give one example of a movable joint.

.....

b) What are involuntary muscles?

.....

c) Identify the disease that affects the fluid of the spinal cord.

.....

d) What does the skull protect in the human body?

.....

45a) Mention the importance of a strip cup to a dairy farmer.

.....

b) Describe how the equipment mentioned above is used by a farmer.

.....

c) How many days does a gestating cow take to produce a calf?

.....

d) What is weaning in calf rearing?

.....

46. Write down four differences between veins and arteries.

| Veins | Arteries |
|-------|----------|
| i)    | i)       |
| ii)   | ii)      |
| iii)  | iii)     |
| iv)   | iv)      |

47a) Give two ways how root diseases can be controlled in a crop garden.

- i).....  
 ii).....

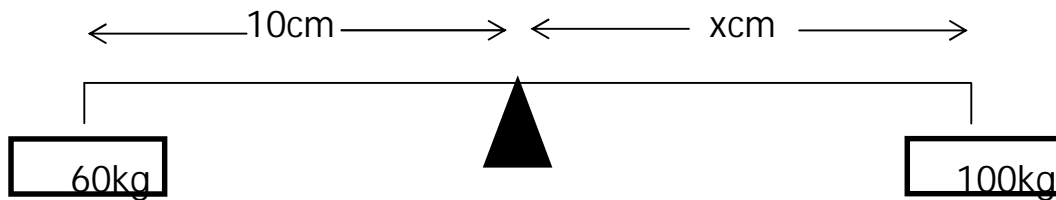
b) What causes cassava mosaic disease to cassava plants?

.....

c) Point out one sign of the disease mentioned above.

.....

Study the diagram below and use it to answer the questions that follow.



48a) Calculate the distance X in metres which is requires to have the first class lever at equilibrium.

b) State one law of moments of force.

.....

c) Identify one part of the human body that can be used as a third class lever.

.....

49a) Write down two functions of skin to your science teacher.

- i).....  
 ii).....

b) What substance determines the skin colour?

.....

c) Which natural energy resource in the environment enables the skin to synthesize vitamin D?

.....

50a) What germ causes tuberculosis disease?

.....

b) Identify one sign a tuberculosis victim may have.

.....

c) Mention one respiration disease that is causes by smoking.

.....

d) Give one hereditary disease that affects the respiratory system.

.....