

**MBUYA PARENTS' SCHOOL**  
**P.5 HOLIDAY PACKAGE TERM ONE – 2020 WEEK II**

**ENGLISH:**

**NAME:**..... **STREAM** .....

Use the suitable word to complete the sentences.

1. If I get money, I.....paid for the trip.
2. We are proud.....our school.
3. He would report you.....he learnt of it.
4. The mechanic.....repaired my bicycle was polite.
5. A tyre is more expensive.....a tube.
6. I have stayed here.....1993.
7. The mechanic uses a.....to hit nails.
8. ....repair vehicles.
9. Mr. Wataya has been a driver.....five years.

Use the most correct form of the words in the brackets to complete the sentences.

10. The school bus is in a dangerous.....condition. (mechanic)
11. He.....more vehicles today than yesterday. (repair)
12. She has.....to the garage. (go)
13. Who.....the editor's daughter? (beat)
14. All the children have entered the school through the main..... (enter)
15. Martha is proud of.....mother. (she)
16. We all stood up and sang the.....Anthem. (nation)
17. What is your.....paper? (favour)
18. ....news is interesting. (read)
19. Jane is.....than her sister. (happy)
20. One of the.....was taken to the police. (thief)
21. The eagle.....through the window. (fly)
22. The traffic officer.....the whistle. (blow)
23. My uncle was.....by the snake. (bite)

- 24. The.....of the thief is not known. (die)
- 25. They will..... it tomorrow. (take)
- 26. Sarah.....her left leg. (break)
- 27. I.....anyone who offends me. (not forgive)

Re-arrange the given words alphabetically.

28. fibre, free, him, from  
.....

29. bench, bend, bent, beat  
.....

30. chain, check, boxes, tree  
.....

31. farm, free, fly, firm  
.....

32. form, friend, frame, fry  
.....

33. sauce, saucepan, pancake, watch  
.....

Re-write the sentences giving the opposite of the given underlined words.

34. Simon died a poor man.  
.....

35. She is the smallest girl in class.  
.....

36. The bench is behind the classroom.  
.....

37. The tool box was empty.  
.....

Give the plural of the words below.

- 38. Housefly. ....
- 39. Photo. ....
- 40. Piano.....

**P.5 SST WEEK II TERM 1 2020:**

**NAME:**..... **STREAM** .....

**LOCATION OF UGANDA**

1. State any problem which may be faced by a person reading a map without a key.  
.....
2. What is farming?  
.....  
.....
3. Of what importance are the following elements on a map?
  - a) Symbols.....
  - b) Title.....
5. Identify the direction from Dem. Republic of Congo (DRC)  
.....
6. Why are slopes of mountains in Uganda suitable for farming?  
.....
7. Suggest one role of a child in a home.  
.....
8. Why is a compass important in map reading?  
.....
9. Name the most important line of latitude that passes through Uganda.  
.....
10. What name is given to the imaginary lines on the map that runs from;
  - a) East to West  
.....
  - b) North to South  
.....
11. Which geographical location of Africa is Uganda located?  
.....
12. What is grid reference?  
.....
13. Give one traditional method of sending messages in Uganda.  
.....
14. Identify Uganda's neighbours to the;
  - a) East .....
  - b) North .....
  - c) South west .....
  - d) West.....
15. Suggest any two reasons why Uganda should have good relationship with her neighbours.
  - i).....
  - ii).....
16. Name the;
  - a) Latitude which is marked  $O^{\circ}$ . .....

b) Longitude that is marked  $0^{\circ}$ . .....

17. Write down the capital cities of all the neighbours of Uganda.

.....  
.....  
.....  
.....  
.....  
.....

18. State one reason why traditional education is important to your community.

.....

19. Why do some trees in the savanna regions of Uganda shed off their leaves during dry season?

.....

20. Identify one disadvantage of sunshine.

.....

21. Name any two ports which handles Uganda's imports and exports.

i).....

ii).....

22. State the importance of longitudes and latitudes.

.....

23. Which name is given to the major points on a compass?

.....

24. Suggest one reason why the Bantu settled in the interlacustrine region.

.....

25. Who was the first European explorer to see Lake Albert?

.....

26. Identify any one duty of the bank of Uganda.

.....

27. State the major cause of land fragmentation in urban areas.

.....

28. Why is green wick meridian called so?

.....

29. Give the reason why Uganda import and export her goods through Mombasa in Kenya.

.....

30. What are land locked countries?

.....

31. Name any two lakes in Uganda which are crossed by the equator.

i)..... ii).....

32. Apart from Uganda, name any other examples of land locked countries.

i).....

ii).....

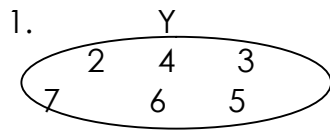
33. Identify one importance of population census to a country.

.....

# P.5 MATHEMATICS WEEK II TERM 1 2020

NAME:..... STREAM .....

## SETS



How many elements has set Y?

2. If set  $A = \{1, 2, 3, 4, 5, 6\}$  and set  $B = \{2, 3, 5\}$

a) Draw a Venn diagram to represent the above information.

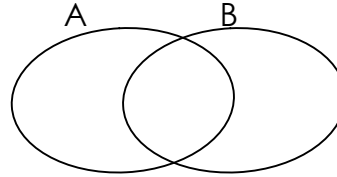
b) Find  $(A \cap B)$

c) Work out  $(A \cup B)$

3. Draw a symbol of an empty set.

4. Draw a Venn diagram to show that  $A \cap B = A$

5. Shade  $A \cap B$  on the Venn diagram below.



6. Given that set  $P = \{1, 2, 3\}$ . How many subsets are in set P?

7. Find the number of subsets in set A by listing method  $A = \{a, b, c\}$

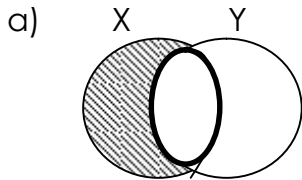
8. Given that set K has the first five prime numbers. List the numbers by showing the working.

9. List down all the factors of 30.

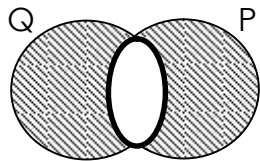
10. What is the product of the first and the third prime number?

16. List down all the multiples of 4 less 40.

11. Describe the shaded part below.



14. What is the square of 4?



17. Write 3tens and 4 ones in figures.

12. Prime factorise 24 and write your answer in set notation.

18. A cow has 4 legs. How many legs do 7 cows have?

13. Given that  $P = \{2_1, 2_2, 3_1\}$ . Find the value of P.

19. A cat has 2 eye. How many eyes do 5 cats have altogether?

14. Find the LCM of 4 and 5.

20. What is the product of 16 and 4?

15. What is the GCF of 6 and 8?

**P.5 SCIENCE WEEK II TERM 1 2020**

**NAME:**..... **STREAM** .....

1. State the meaning of poultry keeping.  
.....
2. State the difference between poultry and poultry keeping.  
.....
3. List down four examples of domestic birds.  
i)..... ii) .....  
iii)..... iv).....
4. What food value do we get from eating chicken and eggs?  
.....
5. How do crop farmers benefit from poultry farming?  
.....
6. Explain the importance of aspur on a chicken.  
.....
7. Name three exotic breeds of chicken.  
i)..... ii) .....  
iii).....
8. How can you identify a cock from a hen?  
.....
9. What is the use of the feathers on the body of a bird?  
.....
10. State two systems of rearing poultry in Uganda.  
i)..... ii) .....
11. Farm records refer to written information kept on various activities carried out on a farm. Give two reasons why poultry farmers should keep records.  
i).....  
ii).....
12. Mention the commonest method of keeping poultry.  
.....
13. Give three advantages of each of the following systems.  
a) Free rage system  
.....  
b) Battery rage system  
.....
14. State the disadvantage of;  
a) Free rage system

.....  
b) Battery cage system  
.....

15. Why do poultry farmers in rural areas prefer free range system to other systems of poultry keeping?  
.....

16. What is the use of litter in a poultry house?  
.....

17. How can a local farmer in Uganda improve on the local breeds of chicken?  
.....

18. What name is given to chicken kept for;

a) Meat production .....

b) Egg production.....

19. Name any one example of exotic breeds that are;

a) Layers.....

b) Broilers .....

20. What name is given to food for chicken?  
.....

b) Complete the table below of birds age to their food.

<b>Bird's age</b>	<b>Food</b>
1 day to 8 weeks	_____
_____	Growers mash
16 weeks onwards	_____

21. What is incubation as used in poultry keeping?  
.....

b) Name any two types of incubation.

i)..... ii) .....

22. What are poultry vices?  
.....

b) Give three examples of poultry vices.

i)..... ii) .....

iii).....

23a) Give three types of feeds for chicken.

i)..... ii) .....

iii).....

b) Identify the type of feed given to broilers.  
.....

24. Name the types of records kept to show the treatment given to birds.  
.....