

MBUYA PARENTS' SCHOOL
P.4 HOLIDAY PACKAGE TERM ONE – 2020 WEEK II

ENGLISH:

NAME: **STREAM:**

Plurals and singulars

Fill in the gaps with the plurals of the words in the brackets.

1. Of the two.....she is clever. (girl)
2. Districts are made up of..... (country)
3. He owns a lot of..... (ox)
4. Her.....are torn. (dress)
5. His.....wear shirts. (brother)
6. The babies.....are usually white. (tooth)
7.live in holes. (mouse)
8. He has dropped a bundle of..... (key)
9. The.....are parked with books. (shelf)
10. Those.....work here. (woman)
11. They.....his work neatly. (does)
12. How many.....can you speak? (language)
13. How many.....make up a district? (county)
14. We.....missed the morning lesson. (has)
15.are very expensive. (piano)

Abbreviations and contractions

Write the following in full.

16. Rd..... 17. Dr.....

- | | |
|----------------|---------------|
| 18. M.P..... | 19. e.g |
| 20. i.e..... | 21. etc..... |
| 22. Mr. | 23. N.B |
| 24. PTO..... | 25. UPE..... |
| 26. Won't..... | 27. L.C..... |
| 28. Ltd..... | 29. Wed..... |
| 30. Mr. | 31. P.o |
| 32. Dec..... | 33. Feb..... |

Use the correct form of words in the brackets to complete the sentences.

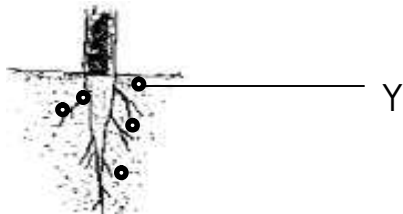
34. Joseph is.....than Julius. (tall)
35. The D.E.O will.....our school next week. (visit)
36. She is.....food now. (eat)
37. He is the.....boy in our class. (small)
38. This test was.....done. (good)
39. She has the.....hand writing in the whole class. (bad)
40. That girl is the most..... in the town. (beauty)
41. Titus.....for swimming every month. (go)
42. His father.....many girls. (have)
43. She.....to Kampala last year. (drive)
44. Of the twins, who is..... (shy)
45. The telephone is.....now. (ring)

HOLIDAY PACKAGE TERM 1 2020 WEEK 2
SCIENCE

NAME: **STREAM:**

1. Flowering plants consist of two main systems, name the systems.
i).....
ii).....
2. Name two common flowering plants in the environment.
i).....ii).....
3. In one sentence, explain the meaning of flowering plants.
.....
4. How do flowering plants reproduce?
.....
5. Give two functions of roots to plants.
i).....
ii).....
6. Write down two crops with prop roots.
i).....ii).....
7. Give two examples of root tubers.
i)..... ii).....
8. How are prop roots important to a crop?
.....
9. State two uses of roots to man.
i).....
ii).....

Study the diagram below and answer the questions that follow.



10. Name part labelled Y.
.....
11. Identify the type of root shown above.
.....
12. Apart from beans, mention one plant with such roots shown above.
.....

13. Give two uses of stems to a plant.

i).....

ii).....

14. Name two examples of each of the following types of underground stems.

a) Stem tubers

i)..... ii).....

b) bulbs

i)..... ii).....

15. Identify two examples of climbing plants.

i).....

ii).....

16. Suggest three methods that plants with weak stems climb others.

i).....

ii).....

iii).....

17. Why do plants with weak stems climb others?

.....

18. How are stems important to man?

.....

19. How are the following plants propagated?

a) Bananas

b) Sweet potatoes

c) Cassava

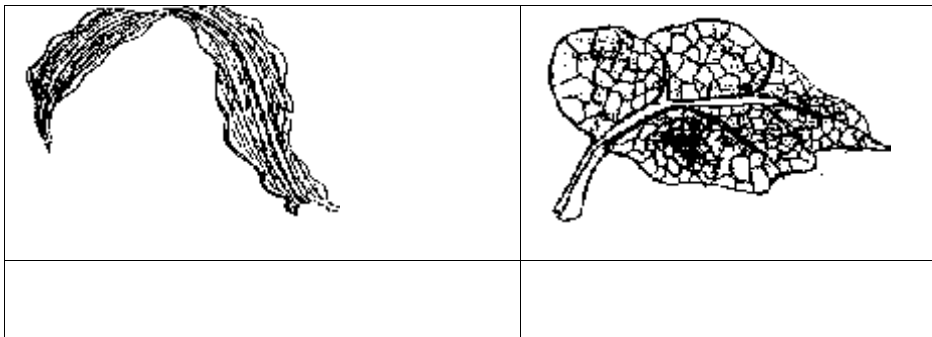
d) Onions

.....

20. What is leaf venation?

.....

21. Name the type of leaf venation shown below.



HOLIDAY PACKAGE SOCIAL STUDIES TERM 1 2020 WEEK II

NAME: **STREAM:**

LOCATION OF OUR DISTRICT

1. Write the fish that is commonly caught from swamps.
.....
2. In which district is your school located?
.....
3. Apart from Kampala, name any other two districts located in the central.
.....
4. What title is given to the head of a school?
.....
5. Which name is given to the four major points of a compass?
.....
6. Give any one duty of a family head.
.....
7. State any one way in which people can increase rainfall.
.....
8. Give any two ways of locating places on a map.
i).....
ii).....
9. In which direction does a compass point at rest?
.....
10. Mention any two ways people who use a compass direction in their work.
i).....
ii).....
11. What is a map?
.....
12. Mention any one item made of soft wood.
.....
13. Give one use of motorcycles to people.
.....
14. How is a map different from a picture?
.....
15. Give the similarity between a map and a picture.
.....
16. Draw a picture and a map of the following.

Tree	table	pot	car

17. State any one role of a clan head.

.....

18. Give any one tribe that belongs to Bantu.

.....

19. In which way is a winnower useful to a farmer?

.....

20. How are the following elements useful to a map reader?

a) Scale.....

b) key.....

c) Map frame

21. Give one reason why most people use road transport in your area.

.....

22. What is a municipality?

.....

23. Give any two ways how municipalities are important.

i).....

ii).....

24. Mention any ways how towns are categorized in Uganda.

.....

25. Why are there many districts in our country?

.....

26. Outline any two categories of towns in Uganda.

i).....

ii).....

27. State any two reasons why the government is creating new districts in Uganda.

i).....

ii).....

HOLIDAY PACKAGE MATHEMATICS TERM 1 2020 WEEK 2

NAME: STREAM:

TOPIC I: SET CONCEPTS

1. Given that set $P = \{\text{all vowel letters}\}$

a) List the members of set P.

b) How many members are in set P?

2. If set $X = \{\text{a girl with 7 hands}\}$, name set X.

3. Name the set symbols below.

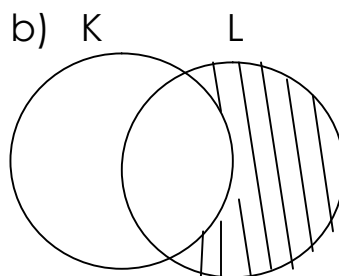
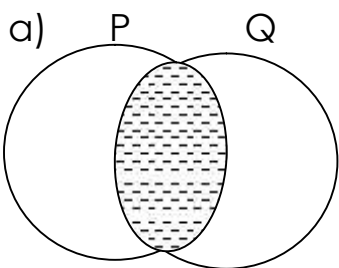
\longleftrightarrow is.....

\ae is.....

V is.....

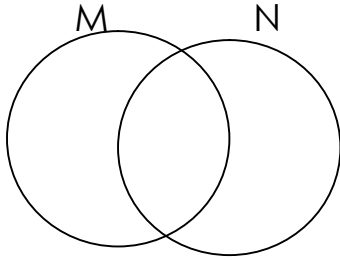
\longleftrightarrow is.....

4. Describe the shaded part of a set.



5. Given that set $M = \{0, 2, 4, 6, 8\}$ and set $N = \{1, 3, 6, 9\}$

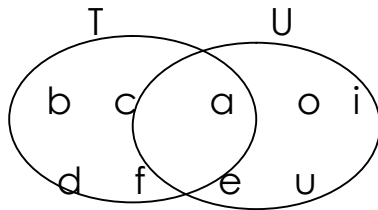
a) Show the information on the venn diagram below.



b) How many members are in set $M \cup N$?

c) Write down the members of set N only.

6. Use the venn diagram to answer the questions.



a) List all the members of set T.

b) List all the members of set U?

c) How many members are in $T \cap U$?

7. Draw a set symbol for an empty set (void set).

8a) Shade $A \cap B$.

