

MBUYA PARENTS' SCHOOL

P.3 HOLIDAY WORK WEEK II TERM ONE – 2020

LITERACY II:

THEME: LIVELIHOOD IN OUR SUB-COUNTY

SUB-THEME: Communication services

Communication is the sending and receiving of messages. There are two types of communication i.e.

- Local communication
- Modern communication

Local communication

This is the type of communication where people use local means to send and receive messages.

Means of local communication

- Drums
- Clapping
- Bells

- Whistle
- Fire
- Xylophones

- Horns
- Mouth (talking)
- Gestures

Advantages of local communication

- It is cheap
- It is easy to use

Disadvantages of local communication

- It wastes time.
- It might not reach many people at the same time.
- The message may change as it moves from one messenger to another.

NB: Gestures are signs used in communication without talking.

Modern communication

It is a type of communication which uses modern means to send and receive communication.

Communication services in Uganda are provided by;

Radio stations - Radio samba - CBS - Super	- Radio One - Capital Radio - Dunamis	- Kaboozi - Dembe FM, etc
TV stations - UBC - Capital - Star TV	- Bukedde - NBS - EATV	- NTV - LTV - ITV
Telecommunication companies - Airtel - MTN	- UTL - Smile - Orange	

Newspapers - New Vision - Daily Monitor	- Weekly observer - Kamunye - Red pepper	- Rupiny - Bukedde - Etop - Orumuri
Modern means of communication		
- Radios	- Newspapers	- Letters
- Television	- Internet	- Fax
- Phones	- Magazines	Computer

Advantages of modern communication

- It is time saving.
- The message does not change.
- The message can reach intended recipients at the same time.

Disadvantages of modern communication

- It is very expensive.
- It requires people who have gone to school.
- Some of it requires electricity.

1. What is communication?

2. State the two types of communication.

i)..... ii).....

3. Mention any two means of local communication.

i)..... ii).....

4. List any two advantages of local communication.

i).....

ii).....

5. Which is the commonest means of communication used by singers on the stage while communicating to people?

6. Define modern communication.

7. Give any four modern means of communication.

i)..... ii).....

iii)..... iv).....

P.3 ENGLISH HOLIDAY HOMEWORK TERM 1 2020 WEEK II:

Fill in the blank space with a correct word.

1. Opondo.....going to the garden now.
2. A teacher is a person.....teacher pupils.
3. The car was moving as slow as a.....
4. Loam.....is good for growing crops because it is fertile.
5. We went.....the market last week to buy paraffin.

Fill in the blank space with a correct letter.

6. secre_____ary 7. s____n 8. Ex_____mination

Use the correct word from the brackets.

9. That tree is.....than our house. (taller, tall)
10. Tom goes.....the mosque every Friday. (two, to)
11. Mugisha is a.....of Kazoola. (sun, son)
12. Have you.....your apple? (ate, eaten)

Arrange these words in alphabetical order.

13. bull, bead, boot, band, bike
-

14. drive, graze, bathe, maize
-

Use "was" or "were"

15. Yesterday.....my birthday.

16. Where.....you yesterday.

Circle the odd man out.

17. hen, duck, turkey, cow, cock

18. English, Maths, Reading, literacy, Kampala

Write the opposite of these words.

19. cold..... 20. Dirty.....

21. brother.....

Complete these sentences correctly.

22. A person who drives a vehicle is called a.....

23. A group of trees growing together is called a.....

24. A young one of a goat is called a.....

Make a correct sentence using each of these words.

25. want.....

26. went.....

Write these short forms in full.

27. Feb.

28. sch.

Give the plural of these words.

29. monkey.....

30. ox.....

LITERACY I:

THEME: OUR ENVIRONMENT IN OUR SUB-COUNTY

1. Define the term "environment.

.....

2. List down four components of soil.

i).....

ii).....

iii).....

iv).....

3. What is soil?

.....

4. Write down one way how soil is formed.

.....

5. State one component of soil.

.....

6. Name the type of soil that is water logged.

.....

7. State one use of soil.

.....

8. Mention one example of mineral salts.

.....

9. Name the best soil for making ceramics.


.....

MATHEMATICS:

THEME: OUR SUB-COUNTY

1. Add: 2 tins + 4 tins

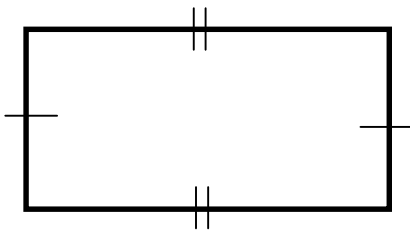
7. Shade $\frac{1}{4}$ on the diagram below.



2. Find the place value of 3 in 935

8. Peter had 20 hens and 10 hens were stolen.
How many hens did he remain with?

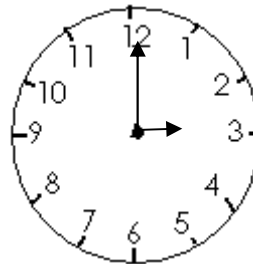
3. Name the shape below.



4. Find the missing number.

+ 5 = 20

9. Tell the time on the clock face.



It is.....o'clock

5. Find the next number in the sequence.

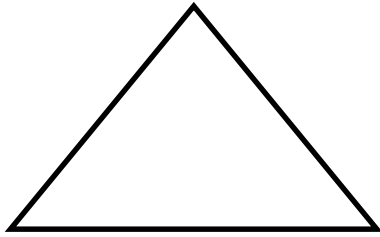
10, 9, 8, 7, 6, 5, 4, _____

10. Subtract: 9 5 7

6. Add: $\frac{5}{9} + \frac{2}{9} =$

$$\begin{array}{r} 9 \ 5 \ 7 \\ - 1 \ 3 \ 5 \\ \hline \\ \hline \end{array}$$

11. How many sides has the triangle below?



16. Multiply: $4 \times 4 =$

12. Divide: $5 \overline{)25}$

17. Given that $a = 2$ and $b = 3$. Find the value of $a + b$

13. Expand 486

18. What number has been expanded?

$$\begin{array}{r} 5000 \\ 400 \\ 90 \\ + \quad 3 \\ \hline \hline \end{array}$$

14. Write 421 in words.

19. Add: 5 6 7 9

$$\begin{array}{r} - 4 1 2 7 \\ \hline \hline \end{array}$$

15. Draw a zig-zag in the provided space.

20. Set $A = \{1, 2, 3\}$. How many members are in set A above?