

# MBUYA PARENTS' SCHOOL

## P.6 HOLIDAY ENGLISH WORK WEEK 1

NAME: \_\_\_\_\_ STREAM: \_\_\_\_\_

### SECTION A:

In questions 1 – 10, use the correct form of the words in the brackets.

1. The morning bell was \_\_\_\_\_ at six o'clock. (ring)
2. He drove his long lorry \_\_\_\_\_ and caused an accident. (reckless)
3. The government has invited \_\_\_\_\_ investors to open up factories in Uganda. (China)
4. It is the responsibility of the \_\_\_\_\_ to proof read the news. (edit)
5. A brother of \_\_\_\_\_ has just returned from Canada. (me)
6. That swimming pool looks \_\_\_\_\_ than ours. (dirty)
7. All the invited dignitaries were told to use the \_\_\_\_\_ gate of the stadium. (north)
8. Driving a car with \_\_\_\_\_ problems is quite dangerous. (mechanic)
9. If I \_\_\_\_\_ the right answer, I would tell you. (Know)
10. What a careful \_\_\_\_\_ Ddumba is! (drive)

In questions 11 – 15, fill in the blank spaces with the most suitable words.

11. My baby brother is fond \_\_\_\_\_ sucking his fingers.
12. \_\_\_\_\_ you connect your computer to the internet, you can't use it for surfing.
13. The \_\_\_\_\_ asked for the taxi fare as soon as we set off from the park.
14. That is the lady \_\_\_\_\_ daughter spoke well at the school assembly.
15. The school nurse used a pair of \_\_\_\_\_ to cut the bandage.

In questions 16 – 18, rewrite the given sentences, replacing the underlined words with their opposites.

16. It is only the judge that determines whether a suspect is innocent or not.

\_\_\_\_\_

17. Ladies' dresses are sold expensively during Easter days.

---

18. Filling in a withdrawal form is quite easy.

---

In questions 19 – 20 re- arrange the given words to make meaningful sentences.

19. the accident reporter interviewed news the victim.

---

20. needs a cyclist to a helmet his protect head.

---

Give the plurals of the the underlined words in the following sentences.

21. She kept her books on the shelf.

---

22. The sheep was grazing at the hillside.

---

Construct correct sentences using the words to show that you know their meanings.

23. would: \_\_\_\_\_

24. wood: \_\_\_\_\_

Re- arrange the following words alphabetically.

25. marry, wedding, guests, receptionists

---

26. official, office, officer, traffic.

---

Write in full.

27. a/c: \_\_\_\_\_

28. Tel: \_\_\_\_\_

Rewrite the following sentences, replacing the underline group of words with a single word.

29. Passengers are advised to put their bags and suitcases on the racks.

---

30. Jalia's dad is a person who draws funny pictures with the New Vision newspaper.

---

In questions 31 – 50, rewrite the sentences as instructed in brackets.

31. This is my brother's directory. (Rewrite using:.....belongs .....)

---

32. No sooner had I entered the shop than I pulled out my shopping list.  
(Rewrite Beginning: As soon as.....)

---

---

33. It is a crime to cheat votes but some people still do it.  
(Rewrite Beginning: Cheating .....)

---

---

34. Magona lost the way to the church. He didn't know the direction.  
(Rewrite using: .....because .....)

---

---

35. If I don't get money, I will not visit my grandmother.  
(Rewrite using.....unless.....)

---

---

36. "I saw Joseph yesterday," said Albert. (Begin: Albert said that.....)

---

---

37. It started raining in the morning. And it is still raining.  
(Rewrite ending .....since morning)

---

---

38. It is not necessary for motorists to drive carelessly.  
(Rewrite using .....mustn't.....)
- 
- 
39. Juliana sings wonderfully. (Rewrite using .....a wonderful .....)
- 
- 
40. Joanita has eaten a delicious cake. ( Rewrite beginning: A delicious cake.....)
- 
- 
41. The computer technician arrived at school late. (Rewrite using .....reached ....)
- 
- 
42. That is the journalist. His camera was captured by the police officer.  
(Rewrite using.....whose.....)
- 
- 
43. He is a farmer. He is a teacher.  
(Join as one sentence using .....not only.....)
- 
- 
44. What a delicious meal this is! (Rewrite using.....very.....)
- 
- 
45. I was entering the school bus. I hurt myself. (Rewrite using .....while .....)
- 
- 
46. Natasha likes cartoons. She doesn't like movies. (Rewrite using  
.....prefer.....)
- 
- 
47. Traffic lights are useful just like traffic officers. (Rewrite using .....as.....as.....)
- 
-

48. Sarah has a cup. Sarah has a book. (Join using .....and .....)

---

49. You may get an accident if you cross a busy road carelessly.  
(Rewrite using:.....likely.....)

---

---

50. This is the garage. My father repairs his cars from there.  
(Rewrite using:.....from where.....)

---

---

51. Read the passage below carefully, and in full sentences, answer the questions that follow.

KEEPING SAFE ON THE ROAD

It is very important to keep safe on the road. Most road users have lost their lives in fatal accidents that have taken place along the roads, though some measures have been put in place. Traffic officers say that all motorcyclists should always wear helmets to protect their heads from damage in case of an accident.

Drivers are also asked to wear the seatbelts to hold them tightly on their seats and also follow the Highway Code for proper use of the road.

They also tell them to always drive in a straight line because wobbling vehicles can easily be a danger to other road users.

All pedestrians are supposed to use a zebra crossing when crossing a busy road, signposts should always be studied and interpreted well by all the road users.

And now it's the time to stop using the road recklessly because life is very important and it has no spare parts.

Questions

1. What is the passage about?

---

2. Where have the fatal accidents taken place?

---

---

3. Who have lost lives?

---

4. What do traffic officers say?

---

5. Why do you think wobbling vehicles are a danger on the road?

---

---

6. What should pedestrians use when crossing a busy road?

---

---

7. Does life have any spare parts?

---

8. Give another word or group of words to mean the following;

(i) studied \_\_\_\_\_

(ii) protect \_\_\_\_\_

9. Write the title of the passage.

---

52. The graph below shows the report made by the District Police Commander of Kamuli District. It shows the offences committed in Kamuli village in 2017.



## Questions

(a) What is the graph about?

---

(b) For which village is the above report?

---

(c) Who made the above report?

---

---

(d) How many offences are shown on the graph?

---

(e) When was the above report made?

---

(f) How many more theft cases were committed than drug abuse?

---

---

(g) What do you think can be done to reduce child abuse?

---

---

(h) Which offences were committed by the same number of people?

---

---

(i) Apart from offences mentioned on the graph, mention any other offence committed in your community.

---

---

(j) Why do you think child abuse is dangerous?

---

---

53. Read the poem below and answer the questions in full sentences.

The postman brought some letters  
wrapped in both small and big envelopes.  
They were from different places in the world  
I knew one of them ought to be mine.

I read the names and addresses  
Of all the forty letters sent and delivered at my school  
But what hurt me most  
None of them was mine.

I took a deep breath to calm down  
Waited patiently for two more days  
Until another batch was brought to school  
And for sure, my letter was there!

With excitement and happiness, I opened it  
And read the lovely message my niece Gloria wrote  
She was inviting me to her ninth birthday  
What a caring niece I have!

Amelia Assimwe P.6 Red

Questions

(a) What is the poem about?

\_\_\_\_\_

(b) By whom was the poem written?

\_\_\_\_\_

(c) Where were the envelopes from?

\_\_\_\_\_

(d) How many stanzas are in the poem?

\_\_\_\_\_

(e) In which stanza does writer express her disappointment?

\_\_\_\_\_

(f) According to the poem, why did the writer take a deep breath?

\_\_\_\_\_

(g) How long did the writer take to receive her own letter?

\_\_\_\_\_



- (h) Who sent a letter to the writer of this poem?  
\_\_\_\_\_
- (i) Why did Gloria write to Amelia?  
\_\_\_\_\_  
\_\_\_\_\_
- (j) Suggest a suitable title to the poem.  
\_\_\_\_\_

54. Re-arrange the following sentences to form a good story.

1. We had a good and lovely birthday party.
2. We worked hand in hand with Aunt Imeldah and we baked cakes and cookies.
3. We found Aunt Imelda had already prepared the working table and the bowls.
4. She told us to bake our own cakes and cookies.
5. We asked Aunt Imeldah what we could do about it.
6. Last month, we had no cake for Uncle Eddy's birthday.
7. She therefore gave us money to buy all the ingredients.
8. We then went to the shop to buy the ingredients.
9. At the shop, we bought all the necessary ingredients and went back home.
10. We were given fifty thousand shillings.

---

---

---

---

---

---

---

---

---

---

---

---

---

---

---

---

---

---

---

---

---

---

---

---

---

55. Below is a student's copy of a bankslip, study it carefully and answer the questions in full sentences.

Dfcu Bank (U) Ltd

Mbarara Branch

a/c no. 02345678

cash only

Date: Tuesday, 5th February, 2018

Name: Nuwagaba Micheal

School: Greenland Junior School. Class: P.5 Term : one

Cashier's stamp	Notes	Amount
	50,000	100,000/=
	20,000	60,000/=
	10,000	
	5,000	25,000/=
	2,000	8,000/=
	1,000	
	Coins	
	1,000	
	500	2500/=
	200	
	50	
	Total	195,000

Amount in words: One hundred ninety five thousand shillings only.  
Paid by Rukundo Evas (mother)

### Questions

1. Who paid the money at the bank?

---

2. For whom was the money paid?

---

3. In which bank did she pay the money?

---

4. What do you think was the money paid for?

---

5. How many notes of five thousand shillings did she bank?

---

---

6. In which school is Michael?

---

7. Did she bank any coins of two hundred shillings in the bank?

---

---

8. What was the total amount of money paid?

---

---

9. When was the money paid?

---

10. What is the relationship between Rukundo Evas and Nuwagaba Micheal?

---

---

# MBUYA PARENTS' SCHOOL

## P.6 HOLIDAY MATHEMATICS WORK WEEK 1

NAME: \_\_\_\_\_ STREAM: \_\_\_\_\_

### SECTION A:

1. Work out:  $25$

$$\begin{array}{r} + 12 \\ \hline \end{array}$$

\_\_\_\_\_

2. Expand 485 using values.

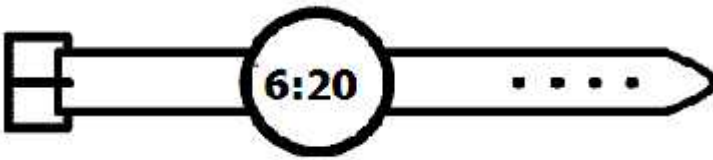
3. Using a pair of compasses, a ruler and a sharp pencil only, construct an angle of  $120^\circ$ .

4. Given that  $A = \{a, b, c\}$ . Find the number of proper subsets in set A.

5. Find the median of the following numbers.

6, 3, 0, 5, 2

6. Write the morning time on the digital clock in words.



7. Convert  $103_{\text{five}}$  to base ten.

8. Find the sum of the next two numbers in the sequence.

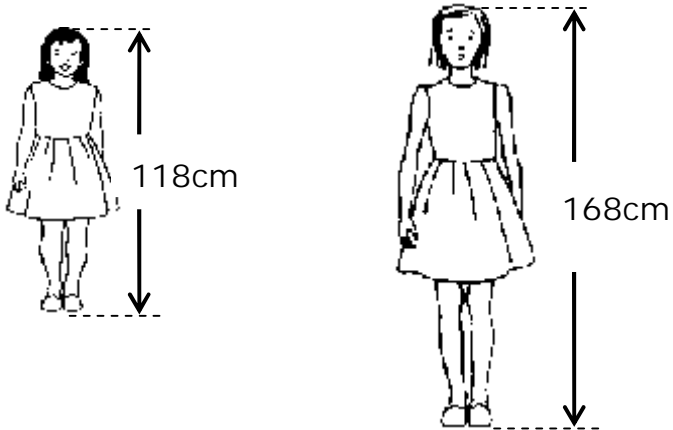
4 , 6 , 8 , 10 , 12 , \_\_\_\_\_ , \_\_\_\_\_

9. Use a number line to work out;

$$^{-}6 + ^{+}5$$

10. Solve the equation:  $2(x + 7) = 16$

11. The pictures below show the height of two girls.



Express the difference in their heights in Roman numerals.

12. Find the smallest number which can be divided by 8 or 6 and leaves 5 as the remainder.

13. Work out:  $7 \overline{)1414}$

14. Given that  $a = 10$  and  $b = 2$ . Find the value of  $a + (a - b)$

15. A bus covered a certain distance at a speed of 80KPH in 2 hours 30 minutes. Find the distance covered by the bus.

16. Below are tins of different masses.

Tin P



Tin Q

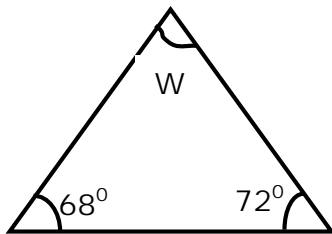


Find the total mass of the two tins in kg and g.

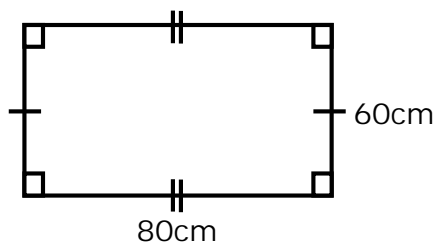
17. Betty bought a goat at sh.68, 000 and later sold it at sh.98, 000. Find the profit she made.

18. Annet had  $\frac{2}{3}$  of the cake in the morning and ate  $\frac{1}{4}$  of it in the afternoon. What fraction of the cake remained?

19. Find the size of the angle marked W.



20. A spider moved around the rectangular shape below twice.



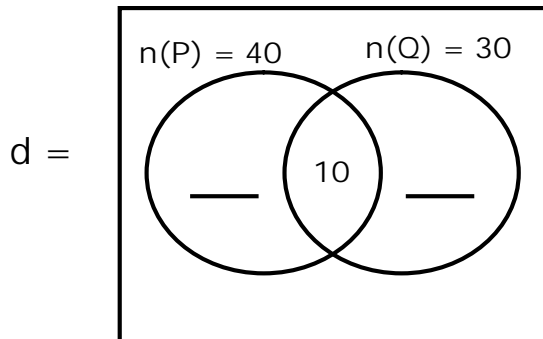
Find the total distance it covered altogether



**SECTION B (60 MARKS)**

21. Given that  $n(P) = 40$ ,  $n(Q) = 30$  and  $n(P \cap Q) = 10$

(a) Use the information to complete the venn diagram



(2 marks)

(b) Find  $n(P \cap Q)$

(2 marks)

22. Given the number 8,736.

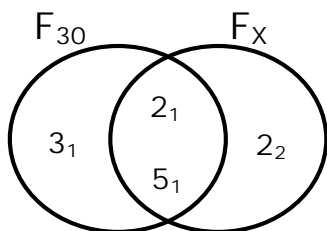
(a) Find the value of the digit in the place value of hundreds. (2 marks)

(b) Find the sum of the value of 8 and the value of 3 in the above number.  
(2marks)

(c) Round off 8736 to the nearest thousands.

(1 mark)

23. The venn diagram below shows the prime factors of 30 and  $x$ .



(a) Find the value of  $x$ .

(2 marks)

(b) Find the LCM of 30 and  $x$ .

(2 marks)

(c) Find the GCF of 30 and  $x$ .

(2 marks)

24. Solve the following equations;

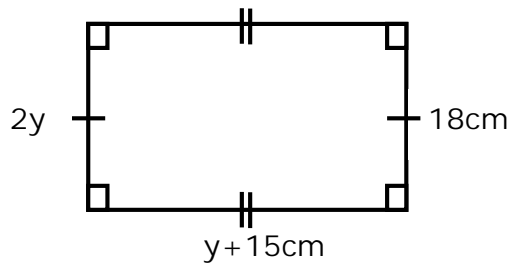
(i)  $\frac{y}{12} = 15$

(2 marks)

(ii)  $2m - 3 = 16$

(3 marks)

25. The figure below is a rectangle.



(a) Find the value of  $y$ .

(2 marks)

(b) Work out the actual length.

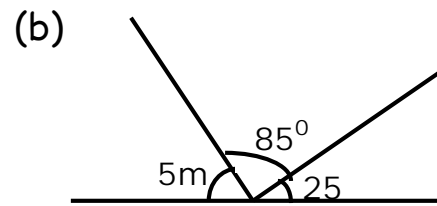
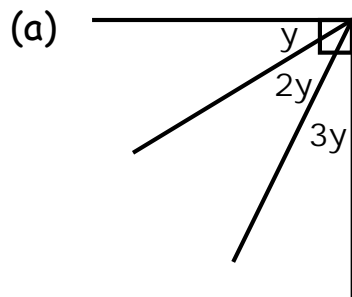
(1 mark)

(c) Find the area of the rectangle.

(2 marks)

26. Find the value of the unknown angles.

(2 marks @)



27. Banza went shopping with a twenty thousand shilling note and bought the following;

2 kg of Rice at sh. 4000 per kg.

800gm of sugar at sh. 3000.

20 tomatoes at sh. 1000 for every 5.

(a) How much did he spend altogether?

(4 marks)

(b) If he used Sh. 2000 for transport on boda-boda, how much money did he remain with? (2 marks)

28. In a village of 4000 people,  $\frac{2}{5}$  of them are males and the rest are females.

(a) Find the fraction of females. (2 marks)

(b) How many males are in the village? (2 marks)

(c) If  $\frac{3}{10}$  of the males are boys and  $\frac{1}{2}$  of the females are girls, how many children are in the village. (2 marks)

29. Peter scored the following marks in 6 subjects.

50 , 60 , 40 , 75 , 85 , 60

(a) Find the range of the marks. (2 marks)

(b) What was his modal mark? (1 mark)

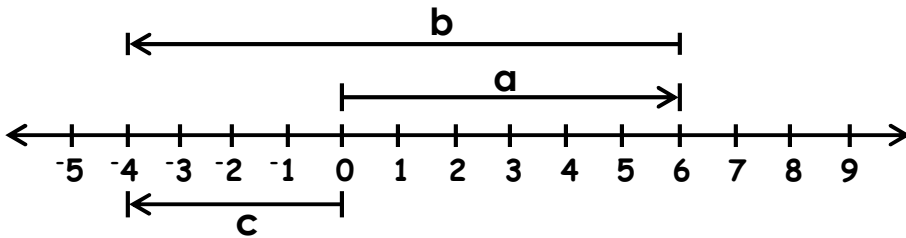
(c) Calculate his average mark. (2 marks)

30. Work out: (2 marks @)

$$\begin{array}{r} 1 \ 2 \ 3 \ \text{four} \\ + 1 \ 1 \ \text{four} \\ \hline \hline \end{array}$$

$$\begin{array}{r} 1 \ 0 \ 1 \ \text{two} \\ \times 1 \ 0 \ \text{two} \\ \hline \hline \end{array}$$

31. Study the number line below and answer questions that follow.



(a) Write the integer represented by each arrow. (1 mark @)

c = \_\_\_\_\_ b = \_\_\_\_\_ a = \_\_\_\_\_

(b) Write the mathematical statement shown by the number line.

(2 marks)

32. (a) Using a pair of compasses, a pencil and a ruler only, construct a square ABCD of side 6cm. (4 marks)

(b) Measure diagonal AC.

(1 mark)

# MBUYA PARENTS' SCHOOL


## P.6 HOLIDAY INTEGRATED SCIENCE WORK WEEK 1

NAME: \_\_\_\_\_ STREAM: \_\_\_\_\_

### SECTION A

1. Name any one domestic vertebrate that provides us with milk.  
\_\_\_\_\_
2. Give any one effect of accidents to people.  
\_\_\_\_\_
3. State one way in which water stored in a pot can get contaminated.  
\_\_\_\_\_
4. Kasumali does not bathe daily. State any one health problem he might experience.  
\_\_\_\_\_
5. What advice would you give to a mother whose child is having tape worm infestation?  
\_\_\_\_\_

The diagram below shows a soil profile, use it to answer question 6.



6. Use an arrow with letter P to show the layer that has a lot of humus.
7. Some birds promote sanitation by feeding on left-over flesh of other animals. Give one example of such a bird.  
\_\_\_\_\_
8. Which part of a mango plant is usually eaten by people?  
\_\_\_\_\_



9. How do poultry farmers who keep layers under the deep litter system prevent eggs from breaking during laying?

---

10. How is the shape of the canine teeth suitable for tearing flesh?

---

11. Give a reason for including sugar in ORS.

---

12. Mention the component of air which supports respiration in humans.

---

13. State any one way you can protect yourself during rainy weather while coming to school.

---

14. Give any one way you can care for bees in your environment.

---

15. Name any one organism that reproduces by means of spores.

---

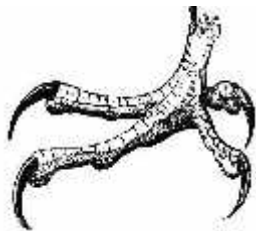
16. Which part of a cat serves the same function as spiracles in houseflies?

---

17. Write down any one activity done to promote oral and dental health.

---

18. To which group of birds does such a foot belong?



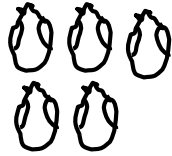
---

19. Apart from twinning, state any other way in which plants with weak stems climb others.

---

20. Which type of immunity does one get after recovering from an illness?  
\_\_\_\_\_
21. Identify the part of a good house which allows warm air out.  
\_\_\_\_\_
22. Apart from phosphorous, give the other mineral salt needed for proper bone and teeth formation.  
\_\_\_\_\_
23. Why are maize plants unable to carryout photosynthesis at night?  
\_\_\_\_\_
24. In which one way does a bat differ from all other mammals?  
\_\_\_\_\_  
\_\_\_\_\_
25. Give any one way heat travels through matter.  
\_\_\_\_\_
26. How can you help your class prefect in the promotion of sanitation in the classroom?  
\_\_\_\_\_
27. Why should farmers be encouraged to use proper methods of farming?  
\_\_\_\_\_
28. Name any one item you can use in harvesting resources such as water.  
\_\_\_\_\_
29. How is a housefly harmful to human beings?  
\_\_\_\_\_
30. When is the displacement method of measurement used?  
\_\_\_\_\_
31. Write down any one method of extracting honey from combs.  
\_\_\_\_\_

32. Mention the disease spread by the mosquito whose eggs are drawn in the diagram below.



33. Apart from trypsin, write down one other enzyme present in the pancreatic juice.

---

34. Why is freezing regarded as a physical change?

---

35. Give the most common way through which HIV/AIDS spreads.

---

36. Which type of weather is suitable for winnowing?

---

37. Apart from planting cover crops, state one other way farmers can use to maintain in the soil.

---

38. Name the disease that affects children who lack carbohydrates in their bodies.

---

39. In which part of the alimentary canal does digestion end?

---

40. Name the organism that causes watery stool with blood stains in people.

---

### SECTION B

41. (a) In one sentence, give the meaning of the word pollination.

---

---

(b) Mention any one bird that helps in pollination.

---

(c) How is the stigma adapted to its function of receiving pollen grains?

---

(d) Give any one type of pollination.

---

42. (a) Convert  $60^{\circ}$  to  $^{\circ}\text{F}$ .

(b) Write down any one scale on which temperature is measured.

---

43. (a) What are vertebrates?

---

---

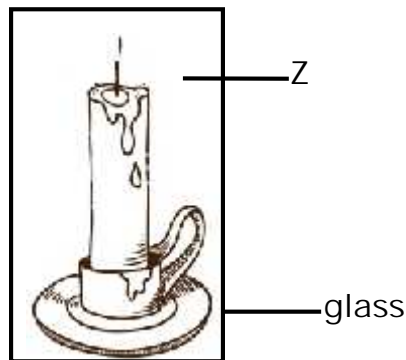

(b) Write down the group of vertebrates where the organisms below belong.

(i) fish \_\_\_\_\_

(ii) snake \_\_\_\_\_

(iii) bat \_\_\_\_\_

44. The diagram below is of a burning candle. Use it to answer questions that follow.



(a) Name the component of air that keeps candle A burning.

---

(b) Which plant process makes use of the gas produced at Z.

---

(c) What does the experiment above show?

\_\_\_\_\_

(d) State any one property of air.

\_\_\_\_\_

45. (a) Name the type of chicken kept for the following purposes;

(i) Egg production \_\_\_\_\_

(ii) Meat production \_\_\_\_\_

(b) Give one advantage of keeping birds under the deep litter system.

\_\_\_\_\_

(c) Apart from the deep litter system, name one other system of keeping poultry.

\_\_\_\_\_

46. (a) Write down any two examples of diarrhoeal diseases in people.

(i) \_\_\_\_\_

(ii) \_\_\_\_\_

(b) Mention any one organism involved in the spread of diarrhoeal diseases.

\_\_\_\_\_

(c) State any one way of protecting yourself from getting the above diseases.

\_\_\_\_\_

47. (a) What is transpiration?

\_\_\_\_\_

\_\_\_\_\_

(b) Give two factors that affect the rate of transpiration.

(i) \_\_\_\_\_

(ii) \_\_\_\_\_

(c) How can a banana farmer reduce transpiration in suckers before planting them?

\_\_\_\_\_

48. (a) What advice would you give to a mother whose child is suffering from tuberculosis?

\_\_\_\_\_

(b) Mention any two features found on a child health card.

(i) \_\_\_\_\_

(ii) \_\_\_\_\_

(c) How can a family participate in the immunization programme?

\_\_\_\_\_

49. Identify the compound leaves drawn below.



\_\_\_\_\_  
\_\_\_\_\_



\_\_\_\_\_  
\_\_\_\_\_

(b) Give two uses of leaves to plants.

(i) \_\_\_\_\_

(ii) \_\_\_\_\_

50. (a) Name any two states of matter.

(i) \_\_\_\_\_

(ii) \_\_\_\_\_

(b) In which state of matter does heat travel fastest?

\_\_\_\_\_

(c) Give any one effect of heat on metals.

\_\_\_\_\_

51. Complete the table below by filling in correctly.

Body organ	Function
Kidney	_____
_____	pumps blood
Stomach	_____
_____	Seeing

52. (a) Which component of soil is formed by decomposition?

\_\_\_\_\_

(b) Why is sand soil not the best for plant growth?

\_\_\_\_\_

(c) Give any one structural difference between sand and clay soil.

\_\_\_\_\_

\_\_\_\_\_

(d) State any one way farmers care for their soil.

\_\_\_\_\_

53. (a) Give any two accidents that can occur at home.

(i) \_\_\_\_\_

(ii) \_\_\_\_\_

(b) State any one way of managing accidents at home.

\_\_\_\_\_

(c) Write down any one way of preventing accidents at home.

\_\_\_\_\_

54. (a) Name any two types of metamorphosis in insects.
- (i) \_\_\_\_\_
- (ii) \_\_\_\_\_
- (b) What type of metamorphosis does each of the following insects undergo?
- (i) cockroach \_\_\_\_\_
- (ii) housefly \_\_\_\_\_
55. (a) Give the function of the following weather instruments.
- (i) Wind vane \_\_\_\_\_
- (ii) Anemometer \_\_\_\_\_
- (b) Why should a rain gauge be placed in an open place?
- \_\_\_\_\_
- (c) When is sunny weather important?
- \_\_\_\_\_



# MBUYA PARENTS' SCHOOL

## P.6 HOLIDAY STUDIES & RELIGIOUS EDUCATION WORK WEEK 1

NAME: \_\_\_\_\_ STREAM: \_\_\_\_\_

### SECTION A

1. Write E.A.C in full  
\_\_\_\_\_
2. Give one thing that can promote peace among pupils in a school.  
\_\_\_\_\_
3. How is a map similar to a picture?  
\_\_\_\_\_
4. In which way does the vice chairman LC 1 serve children in village?  
\_\_\_\_\_
5. Why do people keep donkeys in mountainous areas?  
\_\_\_\_\_
6. Give any one way we can care for our physical features.  
\_\_\_\_\_
7. Name any one district in North Eastern Uganda where nomadic pastoralism is practised.  
\_\_\_\_\_
8. How is brick laying important to people in our community?  
\_\_\_\_\_
9. Why are there few people living in areas with thick forests?  
\_\_\_\_\_
10. State one way the government of Uganda is encouraging more tourists to visit Uganda's tourists attractions.  
\_\_\_\_\_
11. Why did the Nilotics move away from their cradle land?  
\_\_\_\_\_

12. How did the work of early ethnic groups determine where they settled in Uganda?

---

13. State one reason why John Speke as an explorer moved towards Eastern Uganda.

---

14. What is a clan?

---

15. Name the first Christian missionary to come to Uganda.

---

16. Give one contribution of Semei Kakungulu towards the establishment of British rule in Uganda.

---

17. Mention one duty of citizens when conducting free and fair elections.

---

18. How do members of Parliament serve the people they represent?

---

19. Why are citizens in Uganda encouraged to pay taxes to the government?

---

20. Which country shares boundaries with Uganda in the north?

---

21. What is population density?

---

---

22. Mention one founder member president of the East African community.

---

23. How did Rwanda solve the problem of being a land locked country?

---

24. Give one way rivers support people who live near them.

---

25. Why do people keep their money in banks?

---

26. State any one activity done by females on lakes and rivers?

---

27. State any one way culture can be preserved in the society.

---

28. How can boys and girls be treated equally?

---

29. Why is it important for people to know children's rights?

---

30. In which direction are shadows of objects in the evening?

---

31. How is a wet and dry bulb thermometer useful to meteorologists?

---

32. Give one role of leader in our community.

---

33. State one danger of settling on mountain slopes.

---

34. Why did the British colonialists use indirect rule in Uganda?

---

35. Which arm of a government rules the country?

---

From questions 36 – 40, answer either Christianity or Islam but not both.

36. Either: How can you care for another Christian?

---

Or: How can you care for another Moslem?

---

37. Either: What was God's creation on the sixth day?

---

Or: What was Allah's creation on the sixth day?

---

38. Either: State one way Jesus was always kind to others.

---

Or: State one way Prophet Mohammed was always kind to others.

---

39. Either: Name the son God promised Abraham.

---

Or: Name the son God promised Ibrahim.

---

40. Either: Why did Eve accept to eat the forbidden fruit?

---

Or: Why did Hawa accept to eat the forbidden fruit?

---

### SECTION B

41. (a) What name is given to the line of longitude which determines time?

---

(b) Give two parts of the world as divided by the Equator.

(i) \_\_\_\_\_

(ii) \_\_\_\_\_

(c) Which line of latitude is marked  $23\frac{1}{2}^{\circ}\text{N}$ ?

---

42. (a) State the feature on the Uganda National flag that represents peace.

---

(b) How is a national motto important to a country like Uganda?

\_\_\_\_\_

(c) State two important reasons for having the national symbols in a country.

(i) \_\_\_\_\_

(ii) \_\_\_\_\_

43. (a) Mention two factors that make urban areas to have a big population.

(i) \_\_\_\_\_

(ii) \_\_\_\_\_

(b) In which two ways has a fast growing population affected the environment in rural areas?

(i) \_\_\_\_\_

(ii) \_\_\_\_\_

44. (a) What type of government encourages freedom of speech?

\_\_\_\_\_

(b) Give one step involved when conducting elections.

\_\_\_\_\_

(c) State two reasons for registering people before they vote.

(i) \_\_\_\_\_

(ii) \_\_\_\_\_

45. (a) Name two Ugandans who collaborated with the British during colonial time.

(i) \_\_\_\_\_

(ii) \_\_\_\_\_

(b) State two ways the British established their rule in Uganda.

(i) \_\_\_\_\_

(ii) \_\_\_\_\_

46. (a) Give one way people use land as a resource.

\_\_\_\_\_

(b) Mention two natural resources found on land.

(i) \_\_\_\_\_

(ii) \_\_\_\_\_

(c) Why have most resources in Uganda not been fully used?

\_\_\_\_\_

47. (a) Mention two countries that formed the East African Community in 1967.

(i) \_\_\_\_\_ (ii) \_\_\_\_\_

(b) State two reasons for the formation of East African Community in 1967.

(i) \_\_\_\_\_

(ii) \_\_\_\_\_

48. (a) What is an ethnic group?

\_\_\_\_\_

\_\_\_\_\_

(b) Mention one example of Western Bantu in East Africa.

\_\_\_\_\_

(c) State two factors that forced the Bantu to leave their place of origin.

(i) \_\_\_\_\_

(ii) \_\_\_\_\_

49. (a) Mention one leader chosen by appointment in the district.

\_\_\_\_\_

(b) State two other ways people become leaders in the district.

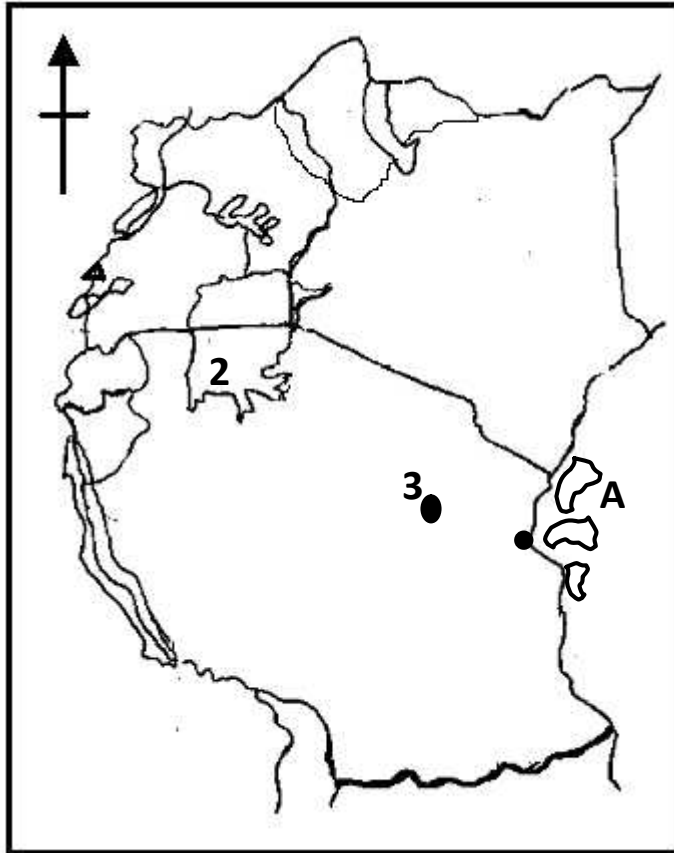
(i) \_\_\_\_\_

(ii) \_\_\_\_\_

(c) Which quality of a good leader can make people to copy him or her?

\_\_\_\_\_

Study the map below and answer the questions that follow:



50. (a) Name the Island marked with letter A.

---

(b) Use letter M to show Ethiopia on the map.

---

(c) Name town marked 3 on the map.

---

(d) How was Lake labelled 2 formed?

---

From 50 – 55 answer Either Christianity Or Islam but not both.

51. EITHER:

(a) Give the meaning of the word disciple.

---

---

(b) Name two of the first followers of Jesus.

(i) \_\_\_\_\_

(ii) \_\_\_\_\_

(c) How did Jesus show a good example of being kind to his followers?

---

OR:

(a) Give the meaning of the word Caliph.

---

(b) Name two of the first followers of prophet Mohammed.

(i) \_\_\_\_\_

(ii) \_\_\_\_\_

(c) How did Prophet Mohammed show a good example of being kind to people of Allah?

---

52. EITHER:

(a) State one way members of a Christian family can relate well with one another.

---

(b) Give two ways a Christian child can get trust from family members.

(i) \_\_\_\_\_

(ii) \_\_\_\_\_

(c) Why is it important to have trust in the family?

---



OR:

(a) State one way a Muslim can relate well with one another.

\_\_\_\_\_

(b) Give two ways a member of Allah's family can get trust from family members.

(i) \_\_\_\_\_

(ii) \_\_\_\_\_

(c) Why is it important to have trust in a family?

\_\_\_\_\_

53. EITHER:

(a) Give the meaning of the word "Prophet"

\_\_\_\_\_

\_\_\_\_\_

(b) Mention one prophet in the Old Testament.

\_\_\_\_\_

(c) What did Prophet Isaiah preach about?

\_\_\_\_\_

(d) Write any one duty of a prophet.

\_\_\_\_\_

OR:

(a) Give the meaning of the word "Prophet"

\_\_\_\_\_

(b) Name two prophets in Islam.

(i) \_\_\_\_\_ (ii) \_\_\_\_\_

(c) Write down one duty of prophets in Islam.

\_\_\_\_\_

EITHER:

54. (a) Mention two examples of needy people in your community.  
(i) \_\_\_\_\_  
(ii) \_\_\_\_\_
- (b) State two ways a Christian can bring happiness to a needy person.  
(i) \_\_\_\_\_  
(ii) \_\_\_\_\_

OR:

- (a) Mention two examples of needy people in your community.  
(i) \_\_\_\_\_  
(ii) \_\_\_\_\_
- (b) State two ways a Muslim can bring happiness to a needy person.  
(i) \_\_\_\_\_  
(ii) \_\_\_\_\_

55. FOR BOTH:

- (a) State any two ways people worship God /Allah.  
(i) \_\_\_\_\_  
(ii) \_\_\_\_\_
- (c) Give two reasons why people worship God/Allah.  
(i) \_\_\_\_\_  
(ii) \_\_\_\_\_

\*\*\*\*\* END \*\*\*\*\*