

MBUYA PARENTS' SCHOOL

P.3 HOLIDAY ENGLISH WORK WEEK 1

NAME: _____ STREAM: _____

SECTION A:

Fill in the missing letters.

1. Vill__ge
2. No__th
3. L__af

Use the words in brackets correctly.

4. Kato is a good _____.(farm)
5. The primary three pupils are _____the compound. (clean)
6. She has taken _____book. (he)
7. Suzan _____her teeth after every meal. (brush)

Give the plural of the underlined words.

8. Rose's key can't open that padlock.

9. We picked the leaf from the floor.

10. She has gone to church.

Fill in the gaps with a correct word.

11. _____ is your name?
12. Joseph _____ Sarah are good people.
13. She is sitting _____ a chair.
14. James is _____ Ugandan.
15. The _____ has removed my hurting tooth.

Arrange these words in alphabetical order.

16. axe, chalk, book, doll

17. team, toil, till, talk.

Write these abbreviations in full.

18. Dec. _____
19. Sch. _____
20. Dr. _____

Underline the odd one out.

21. Dog pig cow fire
22. January February Monday December

Rewrite the sentences giving the opposite of the underlined word.

23. My sister is very tall.

24. Rodney is a weak boy.

Use 'some' or 'any' to complete these sentences.

25. We have _____ water in our small pot.
26. There isn't _____ child in the classroom.
27. There is _____ tea in the flask.

Give a single word for the underlined group of words.

28. Mummy bought jeans, shirts and skirts yesterday.

29. Daddy has gone to buy meat of a cow.

30. We have been here for seven days.

Use 'a' or 'an' to complete these sentences

31. Pauline is _____ beautiful girl.
32. I have bought _____ orange from the market.
33. He is _____ honest gentleman.

Punctuate these sentences correctly.

34. how old are you

35. i shall go to Buwaate next week

Make meaningful sentences using these words.

36. Four: _____
37. For: _____

Use 'has' or 'have' to complete these sentences.

38. Brenda _____ a nice dress.
39. They _____ been playing since morning.
40. Mary and Tom _____ gone to town.

Rewrite these sentences as instructed in brackets.

41. Stella has a pen. Stella has a pencil. (Join usingand)

42. I did not go to school. I was sick. (Use:because.....)

43. Mummy is happy. Daddy is happy. (Begin: Both.....)

44. Daniel did not finish the exam. He got good marks.
(Usebut.....)

45. My sister was cooking. I was playing with the baby.
(Usewhile)

46. Here is the girl. She won the spelling competition.
(Use:who.....)

47. This is the cat. It drank our milk. (Usewhich.....)

48. Complete the table correctly.

	Positive	comparative	superlative
49.	big	_____	biggest
	tall	taller	tallest
50.	happy	happier	_____

51. Read the story and answer the questions that follow in full sentences.

My name is Lubega Mike. I am eight years old in Primary Three. I go to Bukasa Primary school. My teacher is Joan. She teaches us English and Literacy. My father is a shopkeeper and my mother is a nurse at a Java clinic. My father's shop is in Mityana town and it is one of the biggest shops in that town. He goes to his shop for five days in a week. My mother works everyday including Sunday. I have four brothers and one sister. I love my family.

Questions

1. Who is the boy in the story?

2. In which class is the boy?

3. How old is the boy?

4. What is the work of Lubega's father?

5. Who is his class teacher?

6. How many brothers does Lubega have?

7. In which school is Lubega?

8. How many subjects does Joan teach?

9. Write the opposite of these words.

(i) mother

(ii) biggest

52. (A) Arrange the sentences to make a correct story.

(a) He entered.

(b) After using the toilet.

(c) Lubega went to the toilet.

(d) He flushed and closed the door.

(e) He opened the door.

B

(a) She removed her uniform.

(b) Prossy came back from school.

(c) After bathing, she started doing her homework.

(d) She went and bathed after tea.

(e) Then she went to the dining and took her tea.

53. Read the conversation and answer the questions in full sentences

Helping our Parents

David: Alex, we must hurry and reach home early.

Alex: Why do you want to reach home early?

David: There is a lot of work which I must do at home.

Alex: Which work?

David: Helping my mother to cook and wash plates.

Alex: I hate washing plates.

David: You must help your parents.

Alex: You are right David. I have to do it.

Batanda Peter (P.3 Blue)

Questions

1. How many people are talking in the conversation?

2. Who had much work at home?

3. Who doesn't want to wash plates?

4. What does David do at home?

5. In which class is Batanda Peter?

54. Read the poem and answer the questions in full sentences.

The lovely cow

My lovely cow Matata
I like you
You give me meat
Milk and skin
When I take you to graze
You don't moo loudly

Your calf called Tevo
It is black and white
Like you the mother
It jumps up and down
Around you
You are good
My lovely cow Matata

*Ocen Robert P.3 Green
Seguku Primary school*

Questions

(1) Write the title of the poem.

(2) What is the name of the lovely cow?

(3) What is a young cow called?

(4) In which class is the writer?

(5) What sound does a cow make?

(6) Who wrote the poem?

(7) In which school is the writer?

(8) What is the name of the calf?

Write the opposite of;

(9) Mother _____

(10) Good _____

55. Put the sentences below on the right picture.

Bob catches a lot of fish.

One day, he caught a big snake.

He throws a net into the river.

They killed the big snake.

Bob is a fisherman.

His sons hit it with stones and stick.

1



2



3



4



5



6



7. Write the plural of these words

(i) Snake _____ (ii) River _____

8. Form two small words from the word 'fisherman'.

(i) _____ (ii) _____

MBUYA PARENTS' SCHOOL

P.3 HOLIDAY LIT A WORK WEEK 1

NAME: _____ STREAM: _____

SECTION A. (40 Marks)

1. Name the body organ we use for feeling.

2. Why do we need brooms in our classrooms?

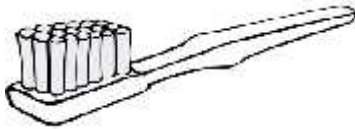
3. How are dogs useful in a home?

4. Why do we give first aid to people?

5. Write one use of leaves to a plant.

6. Name one animal that lives in soil.

7. How is the item below useful to people?



8. Why do we wash hands before eating food?

9. Write one activity children do to help their parents at home.

10. How can we prevent mosquitoes from biting us?

11. Name one common fruit eaten at school.

12. Why is it dangerous for you to wear dirty clothes?

13. Draw this item that causes cuts to people.

14. Give one way farmers care for domestic animals.

15. Name one insect that can sting people.

16. Which type of soil can P.3 children use for making pots?

17. Why are children taken for immunization?

18. Give one use of food in our bodies.

19. Name this animal habitat.



20. Name one type of family.

21. What is the use of an umbrella to people?

22. Name one item found in a kitchen.

23. Give one role of a mother at home.

24. Why do we wash our hands after using the toilet?

25. How can we take care of the body part below?



26. Why do we cross a busy road at a zebra crossing?

27. How are leaves useful to a plant?

28. What is the name given to a meal containing all food values in their right amount?

29. Why do animals move from one place to another?

30. Draw and name one item made from animal skins and hides.

--

31. How do we manage rainy weather?

32. Give one use of water at school.

33. Name one useful insect in our environment.

34. How is a panga useful to a farmer?

35. Name one fruit tree at school.

36. Give one use of firewood at school.

37. Name one food stuff that is prepared using a mortar and pestle.

38. How is this animal dangerous to people?



39. Write one basic need of people.

40. Name one member in a nuclear family.

SECTION B

41. (a) What is personal hygiene?


(b) Write two ways of keeping the body clean.

(i)

(ii)

(c) Give one danger of not keeping your body clean.

Study the diagram below and use it to answer questions that follow.



42. (a) 1
K _____
M _____

(b) Give the use of part L to the insect above.

(c) How many main body parts has the above insect?

43. (a) Write two immunisable diseases.
(i) _____
(ii) _____

(b) Write one place where sick people go for treatment.

(c) Give one way you can care for sick people at home.

44. **Use the diagram below to answer questions that follow.**



(a) Name the above item.

(b) Identify any one type of weather managed using the above item.

(c) Give two other items used to manage weather changes.
(i) _____
(ii) _____

45. (a) What is a family?

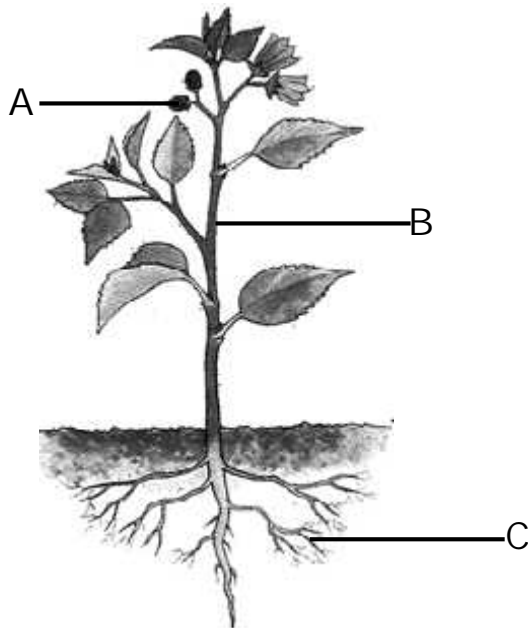
(b) Which family member in a nuclear family breastfeeds a baby?

(c) Name any two members of a family.

(i) _____

(ii) _____

46. Below is a diagram of a plant.



(a) Name parts marked;

A _____

B _____

(b) How is part marked C useful to a plant?

(c) Write one thing plants need to grow well.

47. (a) Name two common accidents at home.

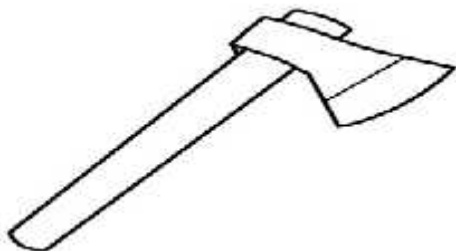
(i) _____

(ii) _____

(b) How are accidents dangerous to people?

(c) How can pupils avoid accidents at school?

48. Below is a diagram of a garden tool.



(a) Identify the above garden tool.

(b) How is the above garden tool useful to people?

(c) How can the above tool be dangerous to children?

(d) How can we care for the above garden tool?

Use the item below to answer question 49.



49. (a) Identify the above item.

(b) Which type of soil is suitable for making the above item?

(c) State any two uses of the above item at home.

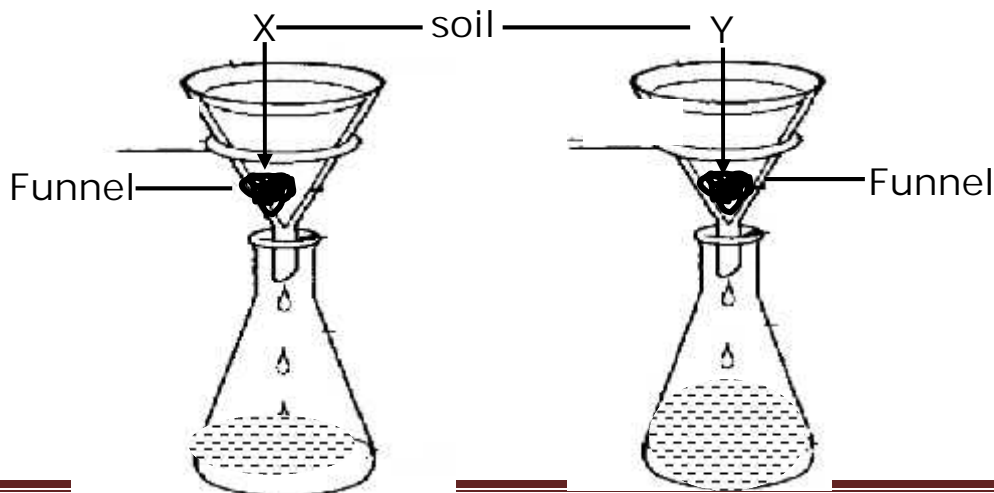
(i) _____

(ii) _____

50. Complete correctly.

Animal	way of movement
Cow	_____
_____	Slithering
Fish	_____
_____	Flying

Use the experiment below and answer the questions that follow.



51. (a) Name the soil in funnel X.

- (b) Give one use of soil marked X and Y.
 W _____
 Z _____
- (c) Why did much water go through soil Y?

52. (a) Give two causes of natural changes.
 (i) _____
 (ii) _____
- (b) Write two dangers of floods.
 (i) _____
 (ii) _____
53. (a) Name the main natural source of water.

- (b) How can water sources get contaminated?

- (c) Give two items we can use to fetch water.
 (i) _____
 (ii) _____
54. (a) Write any two agents of soil erosion.
 (i) _____
 (ii) _____
- (b) Identify one activity that can cause soil erosion.

- (c) How can soil erosion be controlled in the garden?

55. a) Give two examples of birds at home.
 (i) _____
 (ii) _____
- (b) How useful are those birds at home.

- (c) Give one way of caring for those birds at home.

MBUYA PARENTS' SCHOOL

P.3 HOLIDAY LIT B WORK WEEK 1

NAME: _____ STREAM: _____

SECTION A : 40 MARKS

1. Write any one school symbol.

2. How useful is a dog at home?

3. Name one domestic bird kept for eggs.

4. How is a school important in our community?

5. Draw and name one item made from clay.

6. Write any one use of sunny weather to the people in our community.

7. Why do we need baskets at home?

8. What is a map?

9. Give one importance of a market to the people in your community.

10. Write one example of people who work in our school.

11. State one danger of too much rainfall.

12. How is a carpenter important to the people in your community?

13. Mention one source of water.

14. Name one activity done by the people to get money in the community.

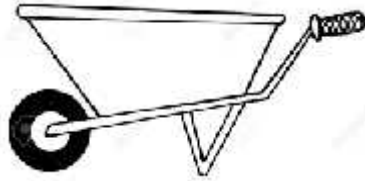
15. Which activity is done to keep our classrooms clean?

16. Give one duty of the police officers in our community.

17. Name one cultural practice in our community.

18. Why do we need class rules?

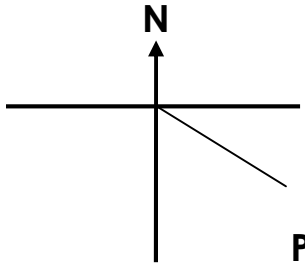
19. How is the item below useful in a home?



20. Name one dangerous thing found on the road.

21. Why do we need water at home?

22. Name the compass direction marked P.



23. Name any one food got from lakes and rivers.

24. How can a P.3 child care for the crops in a garden?

25. Name any one item made from sisal.


26. Why do we plant trees in the school compound?

27. Name any one member of a nuclear family.

28. How is a holiday important to school children?

29. Where do sick people go for treatment in our community?

30. Name the traffic road sign below.



31. Write any one important place in your community.

32. How is a swamp important to potters?

33. Write any one cause of problems between your school and the community.

34. Mention one colour of the Uganda flag.

35. Why do we fence our homes?

CHRISTIAN RELIGIOUS EDUCATION

36. Name the Holy book for the Christians.

37. What is a prayer?

38. Write one activity done on a Christmas day.

39. In which river was Jesus baptized?

40. How can you care for God's creation?

SECTION B

41. (a) What is transport?

- (b) Name any two means of road transport.
(i) _____
(ii) _____
- (c) How can we use the road safely?

42. (a) Name two activities a P.3 child can do at home.
(i) _____
(ii) _____
- (b) Which item do we use to sweep?

- (c) Give the importance of cleaning at home.

43. (a) What is a community?

(b) Name two important places in our sub county.

(i) _____

(ii) _____

(c) Why is it good for people to work together?

44. (a) Name any two cardinal points of a compass.

(i) _____ (ii) _____

(b) In which direction does the sun set?

(c) Give one group of people who need a compass in their work.

45. Match correctly.

Teacher

make furniture

Doctors

cut people's hair

Barbers

treat sick people

Carpenters

teach children

Teachers: _____

Doctors _____

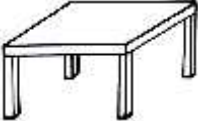

Barbers _____

Carpenters _____

46. (a) Name any two elements of a good map.

(i) _____ (ii) _____

(b) Draw the maps of these pictures.

47. (a) What do we call the mistreatment of a child by an adult?

(b) Write any two examples of child abuse.

(i) _____

(ii) _____

(c) How can child abuse be controlled?

48. (a) Name any two physical features.
 (i) _____
 (ii) _____
 (b) Name any two places where people go for recreation.
 (i) _____
 (ii) _____
49. (a) Give any two recreation activities at home.
 (i) _____
 (ii) _____
 (b) Name any two importance of physical features.
 (i) _____
 (ii) _____
50. (a) Name two people who help to keep peace and security in our area.
 (i) _____
 (ii) _____
 (b) How can children help to keep security at school?

 (c) Draw this item used to keep peace and security.

gun

RELIGIOUS EDUCATION

51. (a) Who created heaven and earth?

- (b) Name the first person to be created by God.


- (c) Draw and name any two things created by God.

52. (a) Write the earthly parents of Jesus Christ.
 (i) _____
 (ii) _____

(b) Why did Jesus Christ die on the cross?

(c) Draw and name any one Christian symbol.

53. (a) Match correctly.



For writing

For seeing

For eating

For walking

54. (a) Name any two groups of people in need.

(i) _____

(ii) _____

(b) Give two ways of showing love and care to the needy people.

(i) _____

(ii) _____

55. (a) What name is given to our saviour?

(b) Write the meaning of these names.

(i) Peter _____

(ii) Emmanuel _____

(c) Why are children given names?



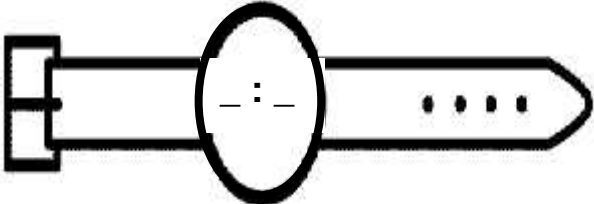
END

MBUYA PARENTS' SCHOOL

P.3 HOLIDAY MATHEMATICS WORK WEEK 1

NAME: _____ STREAM: _____

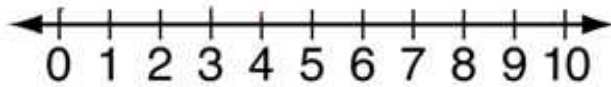
SECTION A (20 QUESTIONS – 40 MARKS)

<p>1. Add:</p> $\begin{array}{r} 12 \\ + 11 \\ \hline \\ \hline \end{array}$	<p>2. Name this set.</p> 
<p>3. Fill in correctly. 247 = ___ hundreds 4 tens ___ ones.</p>	<p>4. Shade $\frac{1}{5}$ on the diagram.</p> 
<p>5. Find the next number in the sequence. 50 , 60 , 70 , 80 , 90 , _____</p>	<p>6. Work out and fill in the box.</p> $\square + 4 = 9$
<p>7. Use a ruler and a sharp pencil to draw a square.</p>	<p>8. Write the time, half past three on the digital clock below.</p> 

9. How many threes are in twelve?

10. Write 208 in words.

11. Add $3 + 4$ using a number line below.



12. Subtract: Weeks Days

$$\begin{array}{r} 7 \quad 6 \\ - 3 \quad 4 \\ \hline \\ \hline \end{array}$$

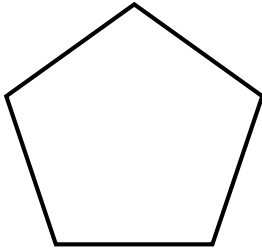
13. Add: $\frac{2}{6} + \frac{3}{6} =$

14. Write the expanded number in short.
 $100 + 30 + 2$

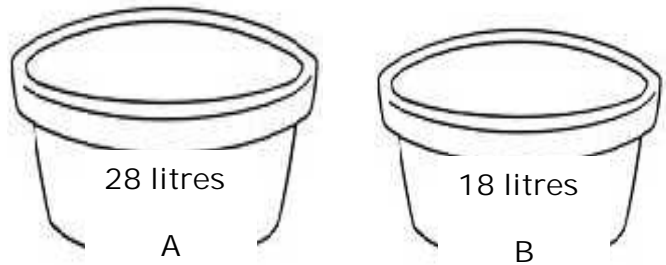
15. Moses has 132 cows and 125 goats. How many animals does he have altogether?

16. Draw the set symbol for an empty set.

17. How many sides has the shape below.



18. Below are two containers.



How many more litres does container A hold than B?

19. Write the place value of the circled digit in 6⑧9.

20. A book costs sh. 500. What will be the cost of 2 books?

SECTION B (12 QUESTIONS – 60 MARKS)

21. Mary is 15 years old. Jane is 12 years old. (a) Who is older?	(1 mark)
(b) Who is younger?	(1 mark)
(c) Find their total age.	(2 marks)

22. Match correctly.

202

22

200

2

two

two hundred two

twenty – two

two hundred

(1 mark @)

23. Work out:

(a) $\square + 3 = 5$

(2 marks)

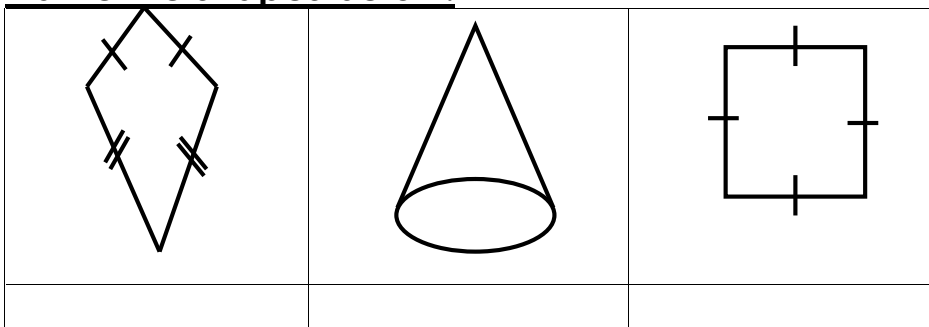
(b) $2 \times \square = 8$

(2 marks)

(c) $9 - \square = 6$

(2 marks)

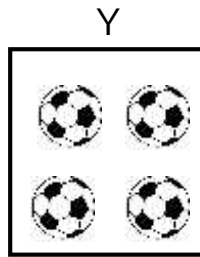
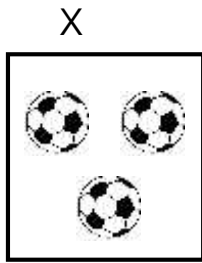
24. Name the shapes below.



(2 marks@)

25. Use “less” or “more” to compare the sets.

(2 marks)



(a) Set X has _____ members than set Y.

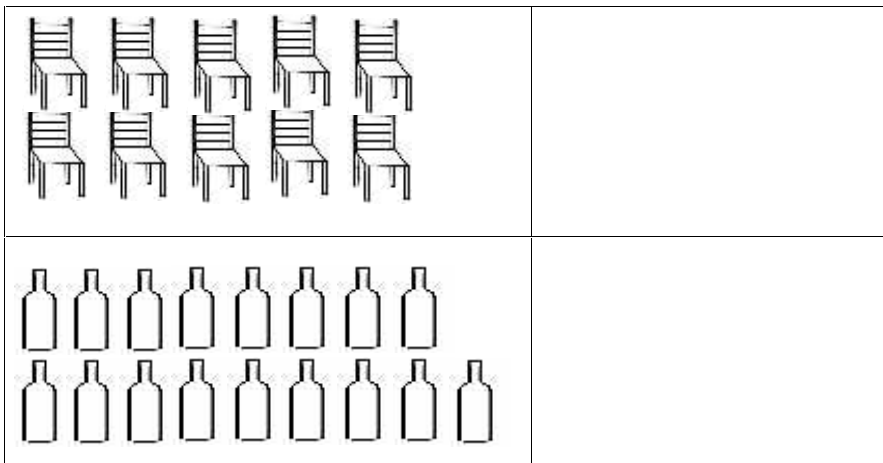
(b) Set Y has _____ members than set X.

(c) How many members are in set X and set Y?

(2 marks)

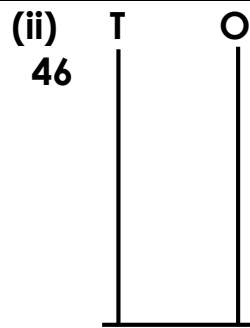
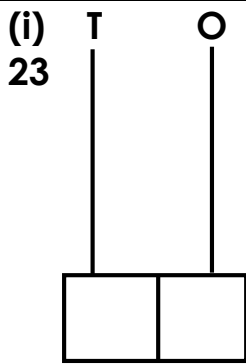
(2 marks)

26. Count and write the number.




(2 marks
@

27. a) Show each number on an abacus.



(2 marks @)

b) Write the number shown on the abacus below in words.



→ _____

28. Study the table and complete it correctly.

Sheep	1	2	_____	4	_____
No. of eyes	2	_____	6	_____	12

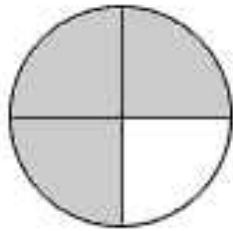
(1 mark @)

29. a) Joan ate $\frac{2}{5}$ of a cake. Marcus ate $\frac{1}{5}$ of the same cake.
What fraction did they eat altogether?

(2 marks)

(b) Write the unshaded fraction.

(2 marks)



(d) Write $\frac{1}{3}$ in words.

(1 mark)

30. Match list A and B correctly.

A
+
-
x
÷

B
difference
product
quotient
sum

(1 mark @)

31. Study the shopping list below.

ITEM	COST
A book	Sh. 1000
A pencil	Sh. 400
A ruler	Sh. 700

(2 marks)

(a) Which item costs sh. 400?

(b) Find the cost of buying 2 books.

(2 marks)

(c) How much money can be used to buy a book and a ruler

(2 mar

altogether?	ks)										
<p>32. The table below shows the marks got by John a P.3 pupil in Mid-term Examinations.</p> <table border="1" data-bbox="240 642 1003 737"> <tr> <th>Subject</th> <th>Maths</th> <th>English</th> <th>SST</th> <th>Science</th> </tr> <tr> <td>Mark</td> <td>100</td> <td>90</td> <td>80</td> <td>90</td> </tr> </table> <p>(a) What was John's best mark?</p>	Subject	Maths	English	SST	Science	Mark	100	90	80	90	(2 marks)
Subject	Maths	English	SST	Science							
Mark	100	90	80	90							
(b) In which two subjects did he score the same mark?	(2 marks)										
(c) In which subject did he score 80 marks?	(2 marks)										

***** END *****